

SCIENCE

TEXTBOOK FOR CLASS VI



0652



राष्ट्रीय शैक्षिक अनुसंधान और प्रशिक्षण परिषद्
NATIONAL COUNCIL OF EDUCATIONAL RESEARCH AND TRAINING

0652 – SCIENCE

Textbook for Class VI

ISBN 81-7450-512-1

First Edition

March 2006 Phalguna 1927

Reprinted

December 2006, February 2008,
January 2009, November 2009,
November 2010, January 2012,
October 2013, December 2014,
December 2015, January 2017,
December 2017, December 2018,
August 2019, January 2021,
August 2021 and November 2021

Revised Edition

November 2022 Agrahayana 1944

PD 850T BS

© National Council of Educational
Research and Training, 2006, 2022

₹ **65.00**

Printed on 80 GSM paper with NCERT
watermark

Published at the Publication Division by the
Secretary, National Council of Educational
Research and Training, Sri Aurobindo Marg,
New Delhi 110 016 and printed at Eye
Vision Printograph, 78, Mohkampur
Industrial Complex, Phase-I, Delhi Road,
Meerut - 250 002 (U.P.)

ALL RIGHTS RESERVED

- ❑ No part of this publication may be reproduced, stored in a retrieval system or transmitted, in any form or by any means, electronic, mechanical, photocopying, recording or otherwise without the prior permission of the publisher.
- ❑ This book is sold subject to the condition that it shall not, by way of trade, be lent, re-sold, hired out or otherwise disposed of without the publisher's consent, in any form of binding or cover other than that in which it is published.
- ❑ The correct price of this publication is the price printed on this page. Any revised price indicated by a rubber stamp or by a sticker or by any other means is incorrect and should be unacceptable.

OFFICES OF THE PUBLICATION

DIVISION, NCERT

NCERT Campus
Sri Aurobindo Marg
New Delhi 110 016

Phone : 011-26562708

108, 100 Feet Road
Hosdakere Halli Extension
Banashankari III Stage
Bengaluru 560 085

Phone : 080-26725740

Navjivan Trust Building
P.O.Navjivan
Ahmedabad 380 014

Phone : 079-27541446

CWC Campus
Opp. Dhankal Bus Stop
Panihati
Kolkata 700 114

Phone : 033-25530454

CWC Complex
Maligaon
Guwahati 781 021

Phone : 0361-2674869

Publication Team

Head, Publication Division : Anup Kumar Rajput

Chief Production Officer : Arun Chitkara

Chief Business Manager : Vipin Dewan

Chief Editor (In charge) : Bijnan Sutar

Production Assistant : Om Prakash

Cover

Shweta Rao

Layout and Illustrations

Ashwani Tyagi

FOREWORD

The National Curriculum Framework (NCF), 2005, recommends that children's life at school must be linked to their life outside the school. This principle marks a departure from the legacy of bookish learning which continues to shape our system and causes a gap between the school, home and community. The syllabi and textbooks developed on the basis of NCF signify an attempt to implement this basic idea. They also attempt to discourage rote learning and the maintenance of sharp boundaries between different subject areas. We hope these measures will take us significantly further in the direction of a child-centred system of education outlined in the National Policy on Education (1986).

The success of this effort depends on the steps that school principals and teachers will take to encourage children to reflect on their own learning and to pursue imaginative activities and questions. We must recognise that, given space, time and freedom, children generate new knowledge by engaging with the information passed on to them by adults. Treating the prescribed textbook as the sole basis of examination is one of the key reasons why other resources and sites of learning are ignored. Inculcating creativity and initiative is possible if we perceive and treat children as participants in learning, not as receivers of a fixed body of knowledge.

These aims imply considerable change in school routines and mode of functioning. Flexibility in the daily time-table is as necessary as rigour in implementing the annual calendar so that the required number of teaching days are actually devoted to teaching. The methods used for teaching and evaluation will also determine how effective this textbook proves for making children's life at school a happy experience, rather than a source of stress or boredom. Syllabus designers have tried to address the problem of curricular burden by restructuring and reorienting knowledge at different stages with greater consideration for child psychology and the time available for teaching. The textbook attempts to enhance this endeavour by giving higher priority and space to opportunities for contemplation and wondering, discussion in small groups, and activities requiring hands-on experience.

National Council of Educational Research and Training (NCERT) appreciates the hard work done by the Textbook Development Committee responsible for this book. We wish to thank the Chairperson of the advisory group in Science and Mathematics, Professor J.V. Narlikar and the Chief Advisor for this book, Dr. N. Rathnasree for guiding the work of this committee. Several teachers contributed to the development of this textbook; we are grateful to their principals for making this possible. We are indebted to the institutions and organisations which have generously permitted us to draw upon their resources, material and personnel. We are especially grateful to the members of the National Monitoring Committee, appointed by the Department of Secondary and Higher Education, Ministry of Human Resource Development under the Chairpersonship of Professor Mrinal Miri and Professor G.P. Deshpande, for their valuable time and contribution. As an organisation committed to systemic reform and continuous improvement in the quality of its products, NCERT welcomes comments and suggestions which will enable us to undertake further revision and refinement.

New Delhi
December 2005

Director
National Council of Educational
Research and Training

© NCERT
not to be republished

RATIONALISATION OF CONTENT IN THE TEXTBOOKS

In view of the COVID-19 pandemic, it is imperative to reduce content load on students. The National Education Policy 2020, also emphasises reducing the content load and providing opportunities for experiential learning with creative mindset. In this background, the NCERT has undertaken the exercise to rationalise the textbooks across all classes. Learning Outcomes already developed by the NCERT across classes have been taken into consideration in this exercise.

Contents of the textbooks have been rationalised in view of the following:

- Overlapping with similar content included in other subject areas in the same class
- Similar content included in the lower or higher class in the same subject
- Difficulty level
- Content, which is easily accessible to students without much interventions from teachers and can be learned by children through self-learning or peer-learning
- Content, which is irrelevant in the present context

This present edition, is a reformatted version after carrying out the changes given above.

© NCERT
not to be republished

TEXTBOOK DEVELOPMENT COMMITTEE

CHAIRPERSON, ADVISORY GROUP IN SCIENCE AND MATHEMATICS

J.V. Narlikar, *Emeritus Professor*, Chairman, Advisory Committee Inter University Centre for Astronomy and Astrophysics (IUCCA), Ganeshkhind, Pune University, Pune

CHIEF ADVISOR

N. Rathnasree, *Director*, Nehru Planetarium, Teen Murti House, New Delhi

MEMBERS

C. V. Shimray, *Lecturer*, Department of Education in Science and Mathematics, NCERT, Sri Aurobindo Marg, New Delhi

D. Lahiry, *Professor (Retd.)*, DESM, NCERT, BL-89, Sector 2, Salt Lake, Kolkata

G. P. Pande, *Uttarakhand Seva Nidhi*, Paryavaran Shiksha Sansthan, Jakhan Devi, Almora, Uttranchal

Harsh Kumari, *Headmistress*, CIE Experimental Basic School, Department of Education, Delhi University, Delhi

J. S. Gill, *Professor*, Department of Education in Science and Mathematics, NCERT, Sri Aurobindo Marg, New Delhi

Jaishree Sikka, *Assistant Professor*, Department of Botany, P.M.B. Gujarati Science College, Indore

Kalyani Krishna, *Reader*, Department of Botany, Sri Venkateswara College, University of Delhi, Dhaula Kuan, New Delhi

Lalita C. Kumar, *Reader (Chemistry)*, School of Science, Indira Gandhi National Open University (IGNOU), Maidan Garhi, New Delhi

Neeraja Raghavan, *Writer*, Girl's Education Plus, 302, East Mansion, 2 Hutchins Road, Cooke Town, Bangalore

P.S. Yadava, *Professor*, Department of Life Sciences, Manipur University, Imphal

R. K. Parashar, *Lecturer*, Department of Education in Science and Mathematics, NCERT, Sri Aurobindo Marg, New Delhi

Rachna Garg, *Lecturer*, Central Institute of Educational Technology, NCERT, Sri Aurobindo Marg, New Delhi

Ranjana Agrawal, *Principal Scientist and Head*, Division of Forecasting Techniques, Indian Agricultural Statistics Research Institute, IARI Campus, Pusa, New Delhi

Sunila Masih, *Teacher*, Mitra GHS School, Suhagpur, P.O. Hoshangabad, Madhya Pradesh

Sunita Malhotra, *Professor of Chemistry*, School of Science, Indira Gandhi National Open University (IGNOU), Maidan Garhi, New Delhi

V. P. Srivastava, *Reader*, Department of Education in Science and Mathematics, NCERT, Sri Aurobindo Marg, New Delhi

MEMBER-COORDINATOR

R. Joshi, *Lecturer (Selection Grade)*, DESM, NCERT, New Delhi

ACKNOWLEDGEMENTS

The National Council of Educational Research and Training (NCERT) acknowledges the valuable contribution of the individuals and organisations involved in the development of Science Textbook for Class VI. The Council acknowledges the valuable contribution of the following academics for reviewing and refining the manuscripts of this book: Sushma Kiran Setia, *Principal*, Sarvodaya Kanya Vidyalaya, Hari Nagar (Clock Tower), New Delhi; Mohini Bindra, *Principal*, Ramjas School, Pusa Road, New Delhi; D. K. Bedi, *Principal*, Apeejay Senior Secondary School, Pitampura, Road No. 42, Sainik Vihar, New Delhi; Chand Vir Singh, *Lecturer (Biology)*, GBSS School, Rajouri Garden (Main), New Delhi; Neelam Monga, *TGT (Science)*, Kendriya Vidyalaya, Janakpuri, New Delhi; Renuka Madan, *TGT (Physics)*, Air Force Golden Jubilee Institute, Subroto Park, Delhi Cantt; P.K. Bhattacharya, *Professor (Retd) Consultant*, DESM, NCERT, New Delhi and Shukhvir Singh, *Reader*, DESM, NCERT, New Delhi.

The Council gratefully acknowledges the valuable contribution of the following academics for the editing and finalisation of this book: Vinod Raina, *Member National Monitoring Committee*, Bharat Gyan Vigyan Samiti, Basement of YWA Building, Hostel No. 2, G. Block, Saket, New Delhi; Professor Amitabha Mukherjee, *Director*, Centre for Science Education and Communication (CSEC), 10 Cavalry Lane, University of Delhi, Delhi; Savithri Singh, *Principal*, AND College, University of Delhi, Govindpuri, New Delhi; M. M. Kapoor, *Professor*, CSEC, 10 Cavalry Lane, University of Delhi, Delhi; R. M. Hallen, CSEC, 10 Cavalry Lane, University of Delhi, Delhi; D. A. Misra, *Principal (Retd)*, (As Nominee of CSEC) Directorate of Education, B 203, Saraswati Vihar, New Delhi; Charu Varma, *Lecturer*, (As Nominee of CSEC), DIET, FU Block, Pitampura, Delhi. The contributions of Ruchi Verma, Associate Professor, Pushplata Verma, Pramila Tanwar and Ashish K. Srivastava, *Assistant Professors*, are acknowledged for being a part of the review of this textbook.

The Council gratefully acknowledges the valuable feedback and suggestions received from Professor Arvind Kumar, *Director*, Homi Bhabha Centre for Science Education (HBCSE), TIFR, V. N. Purve Marg, Mankhurd, Mumbai and the academics at HBCSE and CSEC at various stages of development of the manuscript of this textbook.

The dynamic leadership of Professor M. Chandra, Head, DESM, for providing guidance in final editing of the manuscript and extending infrastructure facilities is highly acknowledged. Special thanks are due to Shveta Uppal, *Chief Editor*; and Vandana Singh, *Consultant Editor* for going through the manuscript and suggesting relevant changes.

The Council also acknowledges the efforts of Deepak Kapoor, Computer Station *Incharge*, Muhammad Aiyub Raza Misbahi, *DTP Operator*; Rajesh Kumar 'Manjhi', *Copy Editor*; Satish Kumar Mishra and Seema Yadav, *Proofreaders*.

The contribution of APC-office, administration of DESM, Publication Department and Secretariat of NCERT is also acknowledged.

A NOTE FOR STUDENTS

The team of Paheli and Boojho will be with you as you journey through this textbook. They love to ask questions. All kinds of questions come to their minds and they collect them in their sacks. Sometimes, they may share some of these questions with you, as you read through the chapters.

Paheli and Boojho are also on the lookout for answers to many questions — sometimes the questions seem answered after they discuss them with each other, sometimes through discussions with other classmates, teachers or their parents. Answers to some questions do not seem available even after all these. They might need to experiment on their own, read books in the library, send questions to scientists. Just dig and dig and dig into all possibilities and see if the questions can be answered. Perhaps, they would carry some of the unanswered questions in their sacks to higher classes.

What will really thrill them, would be your adding questions to their sacks or answer to their questions. Sometimes activities are suggested in the textbook, results or findings of these by different groups of students would be of interest to other students and teachers. You can complete the suggested activities and send your results or findings to Paheli and Boojho. Do keep in mind that activities that involve using blades, scissors or fire need to be done strictly under the care of your teachers. Stick to the precautions given and then enjoy doing all the suggested activities. Mind, the book will not be able to help you much, if the activities are not completed!

You can send your feedback for Paheli and Boojho at.



To

The Head
Department of Education in
Science and Mathematics,
NCERT, Sri Aurobindo Marg,
New Delhi 110016

CONSTITUTION OF INDIA

Part IV A (Article 51 A)

Fundamental Duties

Fundamental Duties – It shall be the duty of every citizen of India —

- (a) to abide by the Constitution and respect its ideals and institutions, the National Flag and the National Anthem;
- (b) to cherish and follow the noble ideals which inspired our national struggle for freedom;
- (c) to uphold and protect the sovereignty, unity and integrity of India;
- (d) to defend the country and render national service when called upon to do so;
- (e) to promote harmony and the spirit of common brotherhood amongst all the people of India transcending religious, linguistic and regional or sectional diversities; to renounce practices derogatory to the dignity of women;
- (f) to value and preserve the rich heritage of our composite culture;
- (g) to protect and improve the natural environment including forests, lakes, rivers, wildlife and to have compassion for living creatures;
- (h) to develop the scientific temper, humanism and the spirit of inquiry and reform;
- (i) to safeguard public property and to abjure violence;
- (j) to strive towards excellence in all spheres of individual and collective activity so that the nation constantly rises to higher levels of endeavour and achievement;
- (k) who is a parent or guardian, to provide opportunities for education to his child or, as the case may be, ward between the age of six and fourteen years.



CONTENTS

FOREWORD	<i>iii</i>
RATIONALISATION OF CONTENT IN THE TEXTBOOKS	<i>v</i>
A NOTE FOR STUDENTS	<i>ix</i>
C H A P T E R 1	
COMPONENTS OF FOOD	1
C H A P T E R 2	
SORTING MATERIALS INTO GROUPS	11
C H A P T E R 3	
SEPARATION OF SUBSTANCES	20
C H A P T E R 4	
GETTING TO KNOW PLANTS	31
C H A P T E R 5	
BODY MOVEMENTS	45
C H A P T E R 6	
THE LIVING ORGANISMS — CHARACTERISTICS AND HABITATS	58
C H A P T E R 7	
MOTION AND MEASUREMENT OF DISTANCES	74
C H A P T E R 8	
LIGHT, SHADOWS AND REFLECTIONS	86
C H A P T E R 9	
ELECTRICITY AND CIRCUITS	95
C H A P T E R 10	
FUN WITH MAGNETS	104
C H A P T E R 11	
AIR AROUND US	115

THE CONSTITUTION OF INDIA

PREAMBLE

WE, THE PEOPLE OF INDIA, having solemnly resolved to constitute India into a ¹**[SOVEREIGN SOCIALIST SECULAR DEMOCRATIC REPUBLIC]** and to secure to all its citizens :

JUSTICE, social, economic and political;

LIBERTY of thought, expression, belief, faith and worship;

EQUALITY of status and of opportunity; and to promote among them all

FRATERNITY assuring the dignity of the individual and the ²[unity and integrity of the Nation];

IN OUR CONSTITUENT ASSEMBLY this twenty-sixth day of November, 1949 do **HEREBY ADOPT, ENACT AND GIVE TO OURSELVES THIS CONSTITUTION.**

1. Subs. by the Constitution (Forty-second Amendment) Act, 1976, Sec.2, for "Sovereign Democratic Republic" (w.e.f. 3.1.1977)
2. Subs. by the Constitution (Forty-second Amendment) Act, 1976, Sec.2, for "Unity of the Nation" (w.e.f. 3.1.1977)



0652CH02

1

Components of Food

In lower classes, we made lists of the food items that we eat. We also identified food items eaten in different parts of India and marked these on its map.

A meal could consist of *chapati*, *dal* and brinjal curry. Another may be rice, *sambar* and a vegetable preparation of lady's finger (*bhindi*). Yet another meal could be *appam*, fish curry and vegetables.



Activity 1

Our meals usually have at least one item made of some kind of grain. Other items could be a *dal* or a dish of meat and vegetables. It may also include items like

curd, butter milk and pickles. Some examples of meals from different regions are given in Table 1.1. Select food items and enter these in Table 1.1.

Sometimes, we may not really have all this variety in our meals. If we are travelling, we may eat whatever is available on the way. It may not be possible for some of us, to eat such a variety of items, most of the time.

There must be some reason though, why meals usually consist of such a distribution. Do you think that our body needs different kinds of food for some special purpose?

1.1 WHAT DO DIFFERENT FOOD ITEMS CONTAIN?

We know that each dish is usually made up of one or more ingredients, which we get from plants or animals. These ingredients contain some components that are needed by our body. These

Table 1.1 Some common meals of different regions/states

Region/State	Item of grain	Item of dal/meat	Vegetables	Others
Punjab	<i>Makki</i> (corn) <i>roti</i>	<i>Rajma</i> (Kidney beans)	<i>Sarson saag</i> (Mustard leaf curry)	Curd, <i>ghee</i>
Andhra Pradesh	Rice	<i>Tuar dal</i> and <i>rasam</i> (<i>charu</i>)	<i>Kunduru</i> (<i>dondakai</i>)	Buttermilk, <i>ghee</i> , pickle (<i>aavakai</i>)

components are called **nutrients**. The major nutrients in our food are named carbohydrates, proteins, fats, vitamins and minerals. In addition, food contains dietary fibres and water which are also needed by our body.

Do all foods contain all these nutrients? With some simple methods we can test whether cooked food or a raw ingredient contains one or more of these nutrients. The tests for presence of carbohydrates, proteins and fats are simpler to do as compared to the tests for other nutrients. Let us do these tests and record all our observations in Table 1.2.

For carrying out these tests, you will need solutions of iodine, copper sulphate and caustic soda. You will also need a few test tubes and a dropper.

Try these tests on cooked food items as well as raw materials. Table 1.2 shows you a way to record the observations from these tests. Some food items are given in this table. You can conduct the tests either with these or any other available food items. Do these tests carefully and do not try to eat or taste any chemicals.

If the required solutions are not available in readymade form, your teacher can prepare them as given in the box.

Let us begin by testing different food items to see if they contain **carbohydrates**. There are many types of carbohydrates. The main carbohydrates found in our food are in the form of starch and sugars. We can easily test if a food item contains starch.

A dilute solution of iodine can be prepared by adding a few drops of tincture iodine to a test tube half filled with water.

Copper sulphate solution can be prepared by dissolving 2 gram (g) of copper sulphate in 100 millilitre (mL) of water.

10 g of caustic soda dissolved in 100 mL of water makes the required solution of caustic soda.

Activity 2

Test for Starch

Take a small quantity of a food item or a raw ingredient. Put 2-3 drops of dilute iodine solution on it (Fig. 1.1). Observe if there is any change in the colour of the food item. Did it turn blue-black? A blue-black colour indicates that it contains starch.



Fig. 1.1 Testing for starch

Repeat this test with other food items to find out which of these contain starch. Enter all your observations in Table 1.2.

Test for Protein

Take a small quantity of a food item for testing. If the food you want to test is a solid, you first need to make a paste of it or powder it. Grind or mash a small quantity of the food item. Put some of this in a clean test tube, add 10 drops of water to it and shake the test tube.

Now, using a dropper, add two drops of solution of copper sulphate and ten drops of solution of caustic soda to the test tube (Fig. 1.2). Shake well

and let the test tube stand for a few minutes. What do you see? Did the contents of the test tube turn violet? A violet colour indicates presence of **proteins** in the food item.

Now, you can repeat this test on other food items.

Table 1.2 Nutrients present in some food items

Food item	Starch (present)	Protein (present)	Fat (present)
Raw potato	Yes		
Milk		Yes	
Groundnut			Yes
Uncooked powdered rice			
Cooked rice			
Dry coconut			
Uncooked <i>tuar dal</i> (powdered)			
Cooked <i>dal</i>			
A slice of any vegetable			
A slice of any fruit			
Boiled egg (white portion)			



Fig. 1.2 Testing for protein

Test for Fats

Take a small quantity of a food item. Wrap it in a piece of paper and crush it. Wrap it in a piece of paper and crush it. Take care that the paper does not tear. Take care that the paper does not tear. Now, straighten the paper and observe it carefully. Does it have an oily patch? Hold the paper against light. Are you able to see the light faintly, through this patch?

An oily patch on paper shows that the food item contains **fat**. The food items may sometimes contain a little water. Therefore, after you have rubbed an item on paper, let the paper dry for a while. If there were any water that may have come from food, it would dry up after some time. If no oily patch shows up after this, the food item does not contain any fat.

What do these tests show? Are fats, proteins and starch present in all the food items that you tested? Does a food item contain more than one nutrient? Do you find any food item that does not contain any of these nutrients?

We tested food items for three nutrients — carbohydrates, proteins and fats. There are also other nutrients like **vitamins** and **minerals** that are present in different food items. Why do we need all these nutrients?

1.2 WHAT DO VARIOUS NUTRIENTS DO FOR OUR BODY?

Carbohydrates mainly provide energy to our body. Fats also give us energy. In fact, fats give much more energy as compared to the same amount of carbohydrates. Foods containing fats

and carbohydrates are also called 'energy giving foods' (Fig. 1.3 and Fig. 1.4).

Proteins are needed for the growth and repair of our body. Foods proteins

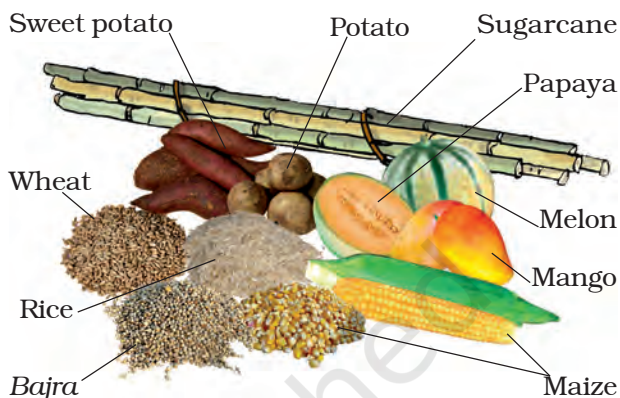


Fig. 1.3 Some sources of carbohydrates

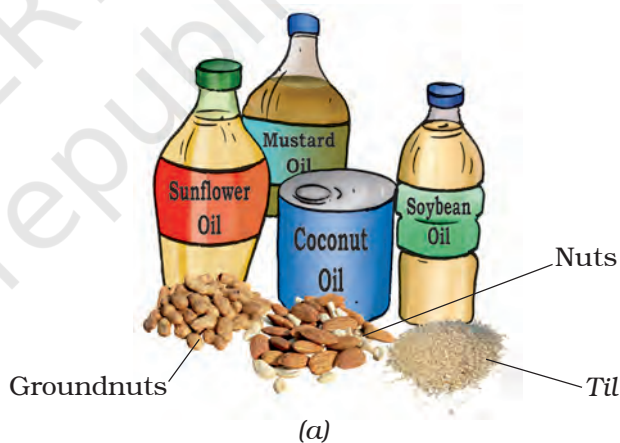


Fig. 1.4 Some sources of fats: (a) plant sources and (b) animal sources





Fig. 1.5 Some sources of proteins: (a) plant sources and (b) animal sources

are often called 'body building foods' (Fig 1.5).

Vitamins help in protecting our body against diseases. Vitamins also help in keeping our eyes, bones, teeth and gums healthy.

Vitamins are of different kinds known by different names. Some of these are Vitamin A, Vitamin C, Vitamin D, Vitamin E and K. There is also a group of vitamins called Vitamin B-complex. Our body needs all types of vitamins in

small quantities. Vitamin A keeps our skin and eyes healthy. Vitamin C helps body to fight against many diseases. Vitamin D helps our body to use calcium for bones and teeth. Foods that are rich in different vitamins are shown in Fig. 1.6 to Fig. 1.9.

Minerals are needed by our body in small amounts. Each one is essential




Fig. 1.6 Some sources of Vitamin A



Fig. 1.7 Some sources of Vitamin B



Fig. 1.8 Some sources of Vitamin C





Fig. 1.9 Some sources of Vitamin D

Our body also prepares Vitamin D in the presence of sunlight. Nowadays, insufficient exposure to sunlight is causing Vitamin D deficiency in many people.



for proper growth of body and to maintain good health. Some sources of different minerals are shown in Fig. 1.10.

Most food items, usually, have more than one nutrient. You may have noticed this, while recording your observations in Table 1.2. However, in a given raw material, one particular nutrient may be present in much larger quantity than in others. For example, rice has more carbohydrates than other nutrients. Thus, we say that rice is a “carbohydrate rich” source of food.

Besides these nutrients, our body needs **dietary fibres** and water. Dietary fibres are also known as roughage. Roughage is mainly provided by plant products in our foods. Whole grains and pulses, potatoes, fresh fruits and vegetables are main sources of roughage. Roughage does not provide any nutrient to our body, but is an essential component of our food and adds to its bulk. This helps our body get rid of undigested food.




Fig. 1.10 Sources of some minerals

Water helps our body to absorb nutrients from food. It also helps in throwing out some wastes from body as urine and sweat. Normally, we get most of the water that our body needs from the liquids we drink — such as water, milk and tea. In addition, we add water to most cooked foods. Let's see if there is any other source which provides water to our body.

Activity 3

Take a tomato or a fruit like lemon. Cut it into small pieces. Do your hands get wet while doing so?

Carefully observe whenever vegetables and fruits are being cut, peeled, grated or mashed at your home. Do you find any fresh vegetables or fruits that do not contain some amount of water?

We see that many food materials themselves contain water. To some extent, our body needs are met by this water. Apart from this, we also add water while cooking many food items.

1.3 BALANCED DIET

The food we normally eat in a day is our diet. For growth and maintenance of good health, our diet should have all the nutrients that our body needs, in right quantities. Not too much of one and not too little of the other. The diet should also contain a good amount of roughage and water. Such a diet is called a **balanced diet**.

Do you think that people of all ages need the same type of diet? Do you also

think that, what we need for a balanced diet would depend on the amount of physical work that we do?

Prepare a chart of whatever you eat over a period of a week. Check whether all the nutrients mentioned are present in one or the other food items being eaten within a day or so.

Pulses, groundnut, soyabean, sprouted seeds (*moong* and Bengal gram), fermented foods (South Indian foods such as *idlis*), a combination of flours (*missi roti*, *thepla* made from cereals and pulses), banana, spinach, *sattu*, jaggery, available vegetables and other such foods provide many nutrients. Therefore, one can eat a balanced diet without expensive food materials.

Eating the right kind of food is not enough. It should also be cooked

Paheli wonders whether animal food also consists of these different components and do they also need a balanced diet?



properly so that its nutrients are not lost. Are you aware that some nutrients get lost in the process of cooking and preparations?

If the vegetables and fruits are washed after cutting or peeling them, it

may result in the loss of some vitamins. The skins of many vegetables and fruits contain vitamins and minerals. Similarly, repeated washing of rice and pulses may remove some vitamins and minerals present in them.

We all know that cooking improves the taste of food and makes it easier to digest. At the same time, cooking also results in the loss of certain nutrients. Many useful proteins and considerable amounts of minerals are lost if excess water is used during cooking and is then thrown away.

Vitamin C gets easily destroyed by heat during cooking. Would it not be sensible to include some fruits and raw vegetables in our diet?

Boojho thought that fats would be the best foods to eat, all the time. A *katori* (bowl) of fat will give much more energy than a *katori* of carbohydrate rich food, isn't it? So, he ate nothing but food rich



in fats — fried food like *samosa* and *poori* (snacks), *malai*, *rabdi* and *peda* (sweets).

Do you think he was right? No, of course not! It can be very harmful for us to eat too much of fat rich foods and we may end up suffering from a condition called **obesity**.

1.4 DEFICIENCY DISEASES

A person may be getting enough food to eat, but sometimes the food may not contain a particular nutrient. If this continues over a long period of time, the person may suffer from its **deficiency**. Deficiency of one or more nutrients can cause diseases or disorders in our body. Diseases that occur due to lack of nutrients over a long period are called **deficiency diseases**.

If a person does not get enough proteins in his/her food for a long time, he/she is likely to have stunted growth, swelling of face, discolouration of hair, skin diseases and diarrhoea.

If the diet is deficient in both carbohydrates and proteins for a long period of time, the growth may stop completely. Such a person becomes very lean and thin and so weak that he/she may not even be able to move.

Deficiency of different vitamins and minerals may also result in certain diseases or disorders. Some of these are mentioned in Table 1.3.

All deficiency diseases can be prevented by taking a balanced diet.

In this chapter, we asked ourselves the reason why widely varying food from different regions had a common

Table 1.3 – Some diseases/disorders caused by deficiency of vitamins and minerals

Vitamin/Mineral	Deficiency disease/disorder	Symptoms
Vitamin A	Loss of vision	Poor vision, loss of vision in darkness (night), sometimes complete loss of vision
Vitamin B1	Beriberi	Weak muscles and very little energy to work
Vitamin C	Scurvy	Bleeding gums, wounds take longer time to heal
Vitamin D	Rickets	Bones become soft and bent
Calcium	Bone and tooth decay	Weak bones, tooth decay
Iodine	Goiter	Glands in the neck appear swollen, mental disability in children
Iron	Anaemia	Weakness

distribution. This distribution, we find, ensures that our meals have a balance of the different nutrients needed by the body.

Summary

- The major nutrients in our food are carbohydrates, proteins, fats, vitamins and minerals. In addition, food also contains dietary fibres and water.
- Carbohydrates and fats mainly provide energy to our body.
- Proteins and minerals are needed for the growth and the maintenance of our body.
- Vitamins help in protecting our body against diseases.
- Balanced diet provides all the nutrients that our body needs, in right quantities, along with adequate amount of roughage and water.
- Deficiency of one or more nutrients in our food for a long time may cause certain diseases or disorders.



FORTIFIED
SAMPOORNA POSHAN
SWASTH JEEVAN

This is a logo for fortified foods as per standards by FSSAI. Fortification of food is the addition of key vitamins and minerals to staple foods such as rice, wheat, oil, milk and salt to improve their nutritional content.

Key words

- Balanced diet
- Beriberi
- Carbohydrates
- Energy
- Fats
- Minerals
- Nutrients
- Proteins
- Roughage
- Scurvy
- Starch
- Vitamins



Exercises

1. Name the major nutrients in our food.
2. Name the following:
 - (a) The nutrients which mainly give energy to our body.
 - (b) The nutrients that are needed for the growth and maintenance of our body.
 - (c) A vitamin required for maintaining good eyesight.
 - (d) A mineral that is required for keeping our bones healthy.
3. Name two foods each rich in:
 - (a) Fats
 - (b) Starch
 - (c) Dietary fibre
 - (d) Protein
4. Tick (✓) the statements that are correct.
 - (a) By eating rice alone, we can fulfill nutritional requirement of our body. ()
 - (b) Deficiency diseases can be prevented by eating a balanced diet. ()
 - (c) Balanced diet for the body should contain a variety of food items. ()
 - (d) Meat alone is sufficient to provide all nutrients to the body. ()
5. Fill in the blanks.
 - (a) _____ is caused by deficiency of Vitamin D.
 - (b) Deficiency of _____ causes a disease known as beri-beri.
 - (c) Deficiency of Vitamin C causes a disease known as _____.
 - (d) Night blindness is caused due to deficiency of _____ in our food.

SUGGESTED PROJECTS AND ACTIVITIES

1. Prepare a diet chart to provide balance diet to a twelve year old child. The diet chart should include food items which are not expensive and are commonly available in your area.
2. We have learnt that excess intake of fats is harmful for the body. What about other nutrients? Would it be harmful for the body to take too much of proteins or vitamins in the diet? Read about diet related problems to find answers to these questions and have a class discussion on this topic.
3. Test the food usually eaten by cattle or a pet to find out which nutrients are present in animal food. Compare results obtained from the whole class to conclude about balanced diet requirements for different animals.

2



0652CH04

Sorting Materials into Groups

2.1 OBJECTS AROUND US

We have seen that our food and clothes have so much variety in them. Not just food and clothes, there is such a vast variety of objects everywhere. We see around us, a chair, a bullock cart, a cycle, cooking utensils, books, clothes, toys, water, stones and many other objects. All these objects have different shapes, colours and uses (Fig. 2.1).

Look around and identify objects that are round in shape. Our list may include a rubber ball, a football and a glass marble. If we include objects that are nearly round, our list could also include objects like apples, oranges, and an earthen pitcher (*gharha*).



Fig. 2.1 Objects around us

Let us say, we wish to make a group of objects that are made of plastics. Buckets, lunch boxes, toys, water containers, pipes and many such objects, may find a place in this group. There are so many ways to group objects! In the above examples we have grouped objects on the basis of their shape or the materials they are made from.

All objects around us are made of one or more materials. These materials may be glass, metal, plastics, wood, cotton, paper, mud or soil. Can you think of more examples of materials?

Activity 1

Let us collect as many objects as possible, from around us. Each of us could get some everyday objects from home and we could also collect some objects from the classroom or from outside the school. What will we have in our collection? Chalk, pencil, notebook, rubber, duster, a hammer, nail, soap, spoke of a wheel, bat, matchbox, salt, potato. We can also list objects that we can think of, but, cannot bring to the classroom. For example, wall, trees, doors, tractor, road.

Separate all objects from this collection that are made from paper or wood. This way we have divided all objects

into two groups. One group has the objects that are made from paper or wood while the other group has the objects that are not made of these materials. Similarly, we could separate the things that are used for preparing food.

Let us be a little more systematic. List all objects collected, in Table 2.1. Try to identify the materials that each one is made of. It would be fun to make this a large table – collecting information about as many objects as possible. It may seem difficult to find out the materials out of which some of these objects are made. In such cases, discuss with your friends, teacher and parents to identify the materials.

Table 2.1 Objects and the materials they are made of

Objects	Materials they are made of
Plate (<i>thali</i>)	Steel, glass, plastics (any other)
Pen	Plastics, metal

Activity 2

Table 2.2 lists some common materials. You can also add more materials in Column 1 that are known to you. Now, try and think of everyday objects you know, that are made mainly of these materials, and list them in Column 2.

Boojho wants to know, whether we found some materials that were used for making more than one type of an object.



Table 2.2 Different types of objects that are made from the same material

Material	Objects made of these materials
Wood	Chair, table, plough, bullock cart and its wheels, ...
Paper	Books, notebooks, newspaper, toys, calendars,...
Leather	
Plastics	
Cotton	

What do we find from these tables? First, we grouped objects in many different ways. We then found that objects around us are made of different materials. At times, an object is made of a single material. An object could also be made of many materials. And then again, one material could be used for making many different objects. What decides which material should be used for making any given object? It seems

that we need to know more about different materials.

2.2 PROPERTIES OF MATERIALS

Have you ever wondered why a tumbler is not made with a piece of cloth? Keep in mind that we generally use a tumbler to keep a liquid. Therefore, would it not be silly, if we were to make a tumbler out of cloth (Fig 2.2)! What we need for a tumbler is glass, plastics, metal or other such material that will hold water. Similarly, it would not be wise to use paper-like materials for cooking vessels.

We see then, that we choose a material to make an object depending



Fig. 2.2 Using a cloth tumbler

on its properties, and the purpose for which the object is to be used.

So, what are all the properties of materials that would be important for their usage? Some properties are discussed here.

Appearance

Materials usually look different from each other. Wood looks very different from iron. Iron appears different from copper or aluminium. At the same time, there may be some similarities between iron, copper and aluminium that are not there in wood.

Activity 3

Collect small pieces of different materials – paper, cardboard, wood, copper wire, aluminium sheet, chalk. Do any of these appear shiny? Separate the shiny materials into a group.

Now, observe as the teacher cuts each material into two pieces and look at the freshly cut surface (Fig. 2.3). What do you notice? Does the freshly cut surface of some of these materials appear shiny? Include these objects also in the group of shiny materials.

Do you notice such a shine or lustre in the other materials, cut them anyway as you can? Repeat this in the class with as many materials as possible and make a list of those with and without lustre. Instead of cutting, you can rub the surface of material with sand paper to see if it has lustre.



Fig. 2.3 Cutting pieces of materials to see if they have lustre

Materials that have such lustre are usually metals. Iron, copper, aluminium and gold are examples of metals. Some metals often lose their shine and appear dull, because of the action of air and moisture on them. We therefore, notice the lustre, only on their freshly cut surface. When you visit an ironsmith or a workshop, look out for freshly cut surfaces of metal rods to see if they have lustre.

Hardness

When you press different materials with your hands, some of them may be hard to compress while others can be easily compressed. Take a metal key and try to scratch with it, the surface of a piece of wood, aluminium, a piece of stone, a nail, candle, chalk, any other material or object. You can easily scratch some materials, while some cannot be scratched so easily. Materials which can be compressed or scratched easily are called **soft** while some other materials which are difficult to compress are called **hard**. For example, cotton or sponge is soft while iron is hard.

In appearance, materials can have different properties, like lustre, hardness, be rough or smooth. Can you think of other properties that describe the appearance of a material?

Soluble or Insoluble?

Activity 4

Collect samples of some solid substances such as sugar, salt, chalk powder, sand and sawdust. Take five glasses or

beakers. Fill each one of them about two-thirds with water. Add a small amount (spoonful) of sugar to the first glass, salt to the second and similarly, add small amounts of the other substances into the other glasses. Stir the contents of each of them with a spoon. Wait for a few minutes. Observe what happens to the substances added to water (Fig. 2.4). Note your observations as shown in Table 2.3.



Fig. 2.4 What disappears, what doesn't?

Table 2.3 Mixing different solid materials in water

Substance	Disappears in water/ does not disappear
Salt	Disappears completely in water
Sugar	
Sand	
Chalk powder	
Sawdust	

You will notice that some substances have completely disappeared or dissolved in water. We say that these substances are **soluble** in water. Other substances do not mix with water and do not disappear even after we stir for a

long time. These substances are **insoluble** in water.

Water plays an important role in the functioning of our body because it can dissolve a large number of substances. Do liquids also dissolve in water?

Activity 5

Collect samples of vinegar, lemon juice, mustard oil or coconut oil, kerosene or any other liquid. Take a glass tumbler. Fill it up to half with water. Add a few spoonfuls of one liquid to this and stir it well. Let it stand for five minutes. Observe whether the liquid mixes with water (Fig. 2.5). Repeat the same with other liquids, as many different liquids as are available to you. Write your observations in Table 2.4.

Table 2.4 Solubility of some common liquids in water

Liquid	Mixes well/ Does not mix
Vinegar	Mixes well
Lemon juice	
Mustard oil	
Coconut oil	
Kerosene	




Fig. 2.5 (a) Some liquids mix well with water while (b) some others do not

We notice that some liquids get completely mixed with water. Some others do not mix with water and form a separate layer when kept aside for some time.

Boojho suggests that we also check if the liquids that we used in Activity 5, mix well with some liquid other than water.

Paheli is curious to know whether gases also dissolve in water.

Some gases are soluble in water whereas others are not. Water, usually, has small quantities of some gases dissolved in it. For example, oxygen gas dissolved in water is very important for the survival of animals and plants that live in water.

Objects may float or sink in water

While doing Activity 4, you might have noticed that the insoluble solids separated out from water. You may have also noticed this with some liquids in Activity 5. Some of these materials that did not mix with water, floated to the surface of water. Others may have sunk to the bottom of the tumbler, right? We notice many examples of objects that float in water or sink (Fig. 2.6). Dried leaves fallen on the surface of a pond, a stone that you throw into this pond, few



Fig. 2.6 Some objects float in water while others sink in it

drops of honey that you let fall into a glass of water. What happens to all of these?

Boojho would like you to give him five examples each, of objects that float and those that sink in water. What about testing these same materials to see if they float or sink in other liquids like oil?

Transparency

You might have played the game of hide and seek. Think of some places where you would like to hide so that you are not seen by others. Why did you choose those places? Would you have tried to



Fig. 2.7 Looking through opaque, transparent or translucent material

hide behind a glass window? Obviously not, as your friends can see through that and spot you. Can you see through all the materials? Those substances or materials, through which things can be seen, are called transparent (Fig. 2.7). Glass, water, air and some plastics are examples of transparent materials. Shopkeepers usually prefer to keep biscuits, sweets and other eatables in transparent containers of glass or



Fig. 2.8 Transparent bottles in a shop

plastic, so that buyers can easily see these items (Fig. 2.8).

On the other hand, there are some materials through which you are not able to see. These materials are called opaque. You cannot tell what is kept in a closed wooden box, a cardboard carton or a metal container. Wood, cardboard and metals, are examples of opaque materials.

Do we find that we can group all materials and objects, without any confusion, as either opaque or transparent?

Activity 6

Take a sheet of paper and look through it towards a lighted bulb. Make a note of your observation. Now, put 2-3 drops

of some oil and spread it on the sheet of paper. Look again towards the lighted bulb through that portion of the paper on which the oil has been spread. Do you find that the bulb is more clearly visible than before? But, can you see clearly through the oiled paper? Is everything on the other side of it visible? Perhaps not. The materials through which objects can be seen, but not clearly, are known as **translucent**. Remember the oily patch on paper when we tested food items for presence of fats? That was translucent too. Can you think of some more examples of translucent materials?

We can therefore group materials as opaque, transparent and translucent.



Fig. 2.9 Does torch light pass through your palm?

Paheli suggests covering the glass of a torch with your palm at a dark place. Switch on the torch and observe the other side of the palm. She wants to know

whether palm of your hand is opaque, transparent or translucent?

We learnt that materials differ in their appearance and the way they mix in water or other liquids. They may float or sink in water or may be transparent, opaque or translucent. Materials can be grouped on the basis of similarities or differences in their properties.

Why do we need to group materials? In everyday life, we often group materials for our convenience. At home, we usually store things in such a manner that similar objects are placed together. Such an arrangement helps us to locate them easily. Similarly, a grocer usually keeps all type of biscuits at one corner of his shop, all soaps at another while grains and pulses are stored at some other place.

There is another reason why we find such grouping useful. Dividing materials in groups makes it convenient to study their properties and also observe any patterns in these properties. We will study more about this in higher classes.

Key words

Hard
Insoluble
Lustre
Material
Metals

Opaque
Rough
Soluble
Translucent
Transparent



Summary

- Objects around us are made up of a large variety of materials.
- A given material could be used to make a large number of objects. It is also possible that an object could be made of a single material or of many different types of materials.
- Different types of materials have different properties.
- Some materials are shiny in appearance while others are not. Some are rough, some smooth. Similarly, some materials are hard, whereas some others are soft.
- Some materials are soluble in water whereas some others are insoluble.
- Some materials such as glass, are transparent and some others such as wood and metals are opaque. Some materials are translucent.
- Materials are grouped together on the basis of similarities and differences in their properties.
- Things are grouped together for convenience and to study their properties.

Exercises

1. Name five objects which can be made from wood.
2. Select those objects from the following which shine:
Glass bowl, plastic toy, steel spoon, cotton shirt
3. Match the objects given below with the materials from which they could be made. Remember, an object could be made from more than one material and a given material could be used for making many objects.

Objects	Materials
Book	Glass
Tumbler	Wood
Chair	Paper
Toy	Leather
Shoes	Plastics

4. State whether the statements given below are True or False.
 - (i) Stone is transparent, while glass is opaque.
 - (ii) A notebook has lustre while eraser does not.
 - (iii) Chalk dissolves in water.
 - (iv) A piece of wood floats on water.

- (v) Sugar does not dissolve in water.
 - (vi) Oil mixes with water.
 - (vii) Sand settles down in water.
 - (viii) Vinegar dissolves in water.
5. Given below are the names of some objects and materials:
Water, basket ball, orange, sugar, globe, apple and earthen pitcher
Group them as:
- (a) Round shaped and other shapes
 - (b) Eatables and non eatables
6. List all items known to you that float on water. Check and see if they will float on an oil or kerosene.
7. Find the odd one out from the following:
- a) Chair, Bed, Table, Baby, Cupboard
 - b) Rose, Jasmine, Boat, Marigold, Lotus
 - c) Aluminium, Iron, Copper, Silver, Sand
 - d) Sugar, Salt, Sand, Copper sulphate

SUGGESTED ACTIVITY

1. You may have played a memory game with your friends. Several objects are placed on a table, you are asked to observe them for a few minutes, go into another room and write down the names of all objects that you can remember. Play this game, with a difference! Ask all the participants in the game to remember objects with some particular property while playing this memory game — remember and write down the names of objects that were made of wood or objects that are edible and so on. Have fun!
2. From a large collection of materials, make groups of objects having different properties like transparency, solubility in water and other properties. In later chapters you will also learn about properties of materials related to electricity and magnetism. After making different groups from the collected materials, try and find out if there are any patterns in these groups. For instance, do all materials which have lustre conduct electricity?

3

Separation of Substances



0652CH05

In our daily life, there are many instances when we notice a substance being separated from a mixture of materials.

Tea leaves are separated from the liquid with a strainer, while preparing tea (Fig. 3.1).



Fig. 3.1 Separating tea leaves with a strainer

Grain is separated from stalks, while harvesting. Milk or curd is churned to separate the butter (Fig. 3.2). We gin cotton to separate its seeds from the fibre.



Perhaps you might have eaten salted *daliya* or *poha*. If you found that it had chillies in it, you may have carefully taken them out before eating.

Suppose you are given a basket containing mangoes and guavas and asked to separate them. What would you do? Pick out one kind and place them in a separate container, right?

Seems easy, but what if the materials we want to separate are much smaller




Fig. 3.2 Butter is taken out by churning milk or curd

than mango or guava? Imagine you are given a glass of sand with salt mixed in it. Impossible, even to think of separating salt from this mixture by picking out grains of sand by hand!

But, why would we need to separate substances like this at all, is what Paheli wants to know.



Activity 1

In Column 1 of Table 3.1, are given a few processes of separation. The purpose of separation and the way separated components are used is mentioned in Column 2 and 3 respectively. However, the information given in Columns 2 and 3 is jumbled up. Can you match each

Table 3.1 Why do we separate substances?

Separation process	Purpose for which we do the separation	What do we do with the separated components?
1) Separate stones from rice	a) To separate two different, but useful components.	i) We throw away the soild component.
2) Churning milk to obtain butter	b) To remove non-useful components.	ii) We throw away the impurities.
3) Separate tea leaves	c) To remove impurities or harmful components.	iii) We use both the components.

process with its purpose and the way separated components are used?

We see that, before we use a substance, we need to separate harmful or non-useful substances that may be mixed with it. Sometimes, we separate even useful components if we need to use them separately.

The substances to be separated may be particles of different sizes or materials. These may be in any three states of matter i.e., solid, liquid or gas. So, how do we separate substances mixed together if they have so many different properties?

3.1 METHODS OF SEPARATION

We will discuss some simple methods of separating substances that are mixed together. You may come across some of these methods being used in day to day activities.

Handpicking

Activity 2

Bring a packet of food grain purchased from a shop to the classroom. Now, spread the grains on a sheet of paper. Do you find only one kind of grain on

the sheet of paper? Are there pieces of stone, husks, broken grain and particles of any other grain in it? Now, remove with your hand the pieces of stone, husks and other grains from it.

This method of **handpicking** can be used for separating slightly larger sized impurities like the pieces of dirt, stone, and husk from wheat, rice or pulses (Fig. 3.3). The quantity of such impurities is usually not very large. In such situations, we find that handpicking is a convenient method of separating substances.



Fig. 3.3 Handpicking stones from grain

Threshing

You must have seen bundles of wheat or paddy stalks lying in fields after

harvesting the crop. Stalks are dried in the sun before the grain is separated from them. Each stalk has many grain seeds attached to it. Imagine the number of grain seeds in hundreds of bundles of stalk lying in the field! How does the farmer separate grain seeds from those bundles of stalks?

One may pluck mangoes or guavas from the trees. But, grain seeds are much smaller than mangoes or guavas. So, plucking them from their stalks would be impossible. How does one separate grain seeds from their stalks?

The process that is used to separate grain from stalks etc. is **threshing**. In this process, the stalks are beaten to free the grain seeds (Fig. 3.4). Sometimes,



Fig. 3.4 Threshing

threshing is done with the help of bullocks. Machines are also used to thresh large quantities of grain.

Winnowing

Activity 3

Make a mixture of dry sand with sawdust or powdered dry leaves. Keep

this mixture on a plate or a newspaper. Look at this mixture carefully. Can the two different components be made out easily? Are the sizes of particles of the two components similar? Would it be possible to separate the components by handpicking?

Now, take your mixture to an open ground and stand on a raised platform. Put the mixture in a plate or sheet of paper. Hold the plate or the sheet of paper containing the mixture, at your shoulder height. Tilt it slightly, so that the mixture slides out slowly.

What happens? Do both the components — sand and sawdust (or powdered leaves) fall at the same place? Is there a component that blows away? Did the wind manage to separate the two components?

This method of separating components of a mixture is called **winnowing**. Winnowing is used to separate heavier and lighter components of a mixture by wind or by blowing air.




Fig. 3.5 Winnowing

This method is commonly used by farmers to separate lighter husk particles from heavier seeds of grain (Fig. 3.5).

The husk particles are carried away by the wind. The seeds of grain get separated and form a heap near the platform for winnowing. The separated husk is used for many purposes such as fodder for cattles.

Sieving

Sometimes, we may wish to prepare a dish with flour. We need to remove impurities and bran that may be present in it. What do we do? We use a sieve and pour the flour into it (Fig. 3.6).

Sieving allows the fine flour particles to pass through the holes of the sieve while the bigger impurities remain on the sieve.

In a flour mill, impurities like husk and stones are removed from wheat before grinding it. Usually, a bagful of wheat is poured on a slanting sieve. The sieving removes pieces of stones, stalk and husk that may still remain with wheat after threshing and winnowing.



Fig. 3.6 Sieving

You may have also noticed similar sieves being used at construction sites



Fig. 3.7 Pebbles and stones are removed from sand by sieving

to separate pebbles and stones from sand (Fig. 3.7).

Activity 4

Bring a sieve and a small quantity of flour from home, to the class. Sieve the flour to separate any impurities in it. Now, make a fine powder of chalk pieces and mix it with the flour. Can we separate the flour and the powdered chalk by sieving?

Sieving is used when components of a mixture have different sizes.

Sedimentation, Decantation and Filtration

Sometimes, it may not be possible to separate components of a mixture by winnowing and handpicking. For example, there may be lighter impurities like dust or soil particles in rice or pulses. How are such impurities separated from rice or pulses before cooking?

Rice or pulses are usually washed before cooking. When you add water to these, the impurities like dust particles

get separated. These impurities go into water. Now, what will sink to the bottom of the vessel — rice or dust? Why? Have you seen that the vessel is tilted to pour out the dirty water?

When the heavier component in a mixture settles after water is added to it, the process is called **sedimentation**. When the water (along with the dust) is removed, the process is called **decantation** (Fig. 3.8). Let us find a few other mixtures that can be separated through sedimentation and decantation.

The same principle is used for separating a mixture of two liquids that do not mix with each other. For example, oil and water from their mixture can be separated by this process. If a mixture of such liquids is allowed to stand for some time, they form two separate layers. The component that forms the top layer can then be separated by decantation.

Let us again consider a mixture of a solid and liquid. After preparing tea, what do you do to remove the tea leaves? Usually, we use stainer to remove tea leaves. Try decantation. It helps a little. But, do you still get a few leaves in your tea? Now, pour the tea through a




Fig. 3.8 Separating two components of a mixture by sedimentation and decantation

strainer. Did all the tea leaves remain in the strainer? This process is called **filtration** (Fig. 3.1). Which method of separating tea leaves from prepared tea is better, decantation or filtration?

Let us now consider the example of water that we use. Do all of us, at all times, get safe water to drink? Sometimes, water supplied through taps may be muddy. The water collected from ponds or rivers may also be muddy, especially after rains. Let us see if we can use some method of separation to remove insoluble impurities like soil from the water.

Activity 5

Collect some muddy water from a pond or a river. If it is not available, mix some soil to water in a glass. Let it stand for half an hour. Observe the water carefully and note your observations.

Does some soil settle at the bottom of water? Why? What will you call this process?

Now, slightly tilt the glass without disturbing the water. Let the water from the top flow into another glass (Fig. 3.8). What will you call this process?

Is the water in the second glass still muddy or brown in colour? Now filter it. Did the tea strainer work? Let us try filtering the water through a piece of cloth. In a piece of cloth, small holes or pores remain in between the woven threads. These pores in a cloth can be used as a filter.

If the water is still muddy, impurities can be separated by a filter that has even

smaller pores. A filter paper is one such filter that has very fine pores in it. Fig. 3.9 shows the steps involved in using a filter paper. A filter paper folded in the form of a cone is fixed onto a funnel (Fig. 3.10). The mixture is then poured on the filter paper. Solid particles in the mixture do not pass through it and remain on the filter.

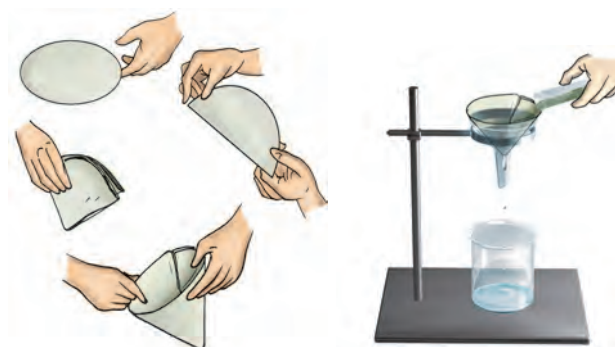


Fig. 3.9 Folding a filter paper to make a cone **Fig. 3.10** Filtration using a filter paper

Fruit and vegetable juices are usually filtered before drinking to separate the seeds and solid particles of pulp. The method of filtration is also used in the process of preparing cottage cheese (*paneer*) in our homes. You might have seen that for making *paneer*, a few drops of lemon juice are added to milk as it boils. This gives a mixture of particles of solid *paneer* and a liquid. The *paneer* is then separated by filtering the mixture through a fine cloth or a strainer.

Evaporation

Activity 6

Add two spoons of salt to water in another beaker and stir it well. Do you



Fig. 3.11 Heating a beaker containing salt water
see any change in the colour of water? Can you see any salt in the beaker, after stirring? Heat the beaker containing the salt water (Fig. 3.11). Let the water boil away. What is left in the beaker?

In this activity, we used the process of evaporation, to separate a mixture of water and salt.

The process of conversion of water into its vapour is called **evaporation**. The process of evaporation takes place continuously wherever water is present.

Where do you think, salt comes from? Sea water contains many salts mixed in it. One of these salts is the common salt. When sea water is allowed to stand in shallow pits, water gets heated by sunlight and slowly turns into water vapour, through evaporation. In a few days, the water evaporates completely leaving behind the solid salts (Fig. 3.12). Common salt is then obtained from this mixture of salts by further purification.



Fig. 3.12 Obtaining salt from sea water

Use of more than one method of separation

We have studied some methods for separation of substances from their mixtures. Often, one method is not sufficient to separate the different substances present in a mixture. In such a situation, we need to use more than one of these methods.

Activity 7

Take a mixture of sand and salt. How will we separate these? We already saw that handpicking would not be a practical method for separating these.

Keep this mixture in a beaker and add some water to it. Leave the beaker aside for some time. Do you see the sand settling down at the bottom? The sand can be separated by decantation or filtration. What does the decanted liquid contain? Do you think this water contains the salt which was there in the mixture at the beginning?

Now, we need to separate salt and water from the decanted liquid. Transfer this liquid to a kettle and close its lid. Heat the kettle for some time. Do you

notice steam coming out from the spout of the kettle?

Take a metal plate with some ice on it. Hold the plate just above the spout of the kettle as shown in Fig. 3.13. What do you observe? Let all the water in the kettle boil off.

When the steam comes in contact with the metal plate cooled with ice, it condenses and forms liquid water. The water drops that you observed falling from the plate, were due to condensation of steam. The process of conversion of water vapour into its liquid form is called **condensation**.

Did you ever see water drops condensed under a plate that has been used to cover a vessel containing milk that has just been boiled?

After all the water has evaporated, what is left behind in the kettle?

We have thus, separated salt, sand and water using processes of decantation, filtration, evaporation and condensation.

Paheli faced a problem while recovering salt mixed with sand. She has mixed a packet of salt in a small



Fig. 3.13 Evaporation and condensation

amount of sand. She then tried the method suggested in Activity 7, to recover the salt. She found, however, that she could recover only a small part of the salt that she had taken. What could have gone wrong?

Can water dissolve any amount of a substance?

In chapter 2, we found that many substances dissolve in water and form a solution. We say that these substances are soluble in water. What will happen if we go on adding more and more of these substances to a fixed quantity of water?

Activity 8

You will need a beaker or a small pan, a spoon, salt and water. Pour half a cup of water in the beaker. Add one teaspoonful of salt and stir it well, until the salt dissolves completely (Fig 3.14). Again add a teaspoonful of salt and stir well. Go on adding salt, one teaspoonful at a time, and stir.

After adding a few spoons of salt, do you find that some salt remains undissolved and settles at the bottom of the beaker? If yes, this means that no more salt can be dissolved in the amount of water we have taken. The solution is now said to be **saturated**.

Here is a hint as to what might have gone wrong when Paheli tried to recover large quantity of salt mixed with sand. Perhaps the quantity of salt was much more than that required to form a saturated solution. The undissolved salt



Fig 3.14 Dissolving salt in water

would have remained mixed with the sand and could not be recovered. She could solve her problem by using a larger quantity of water.

Suppose, she did not have sufficient quantity of water to dissolve all the salt in the mixture. Is there some way that water could be made to dissolve more salt before the solution gets saturated?

Let us try and help Paheli out.

Activity 9

Take some water in a beaker and mix salt in it until it cannot dissolve any more salt. This will give you a saturated solution of salt in water.

Now, add a small quantity of salt to this saturated solution and heat it. What do you find? What happens to the undissolved salt in the bottom of the beaker? Does it dissolve, now? If yes, can some more salt be dissolved in this solution by heating it?

Let this hot solution cool. Does the salt appear to settle at the bottom of the beaker again?

The activity suggests that larger quantity of salt can be dissolved in water on heating.

Does water dissolve equal amounts of different soluble substances? Let us find out.

Activity 10

Take two glasses and pour half a cup of water in each of them. Add a teaspoon of salt to one glass and stir till the salt dissolves. Go on adding salt, one teaspoon at a time, till the solution saturates. Record the number of spoons of salt that dissolved in the water, in Table 3.2. Now, repeat the same activity with sugar. Repeat this with some other substances that are soluble in water.

What do you notice from Table 3.2? Do you find that water dissolves different substances in different amounts?

Table 3.2

Substance	Number of spoons of substance that dissolved in water
Salt	
Sugar	


We have discussed a few methods of separating substances. Some of the methods of separation presented in this chapter are also used in a science laboratory.

We also learnt that a solution is prepared by dissolving a substance in a liquid. A solution is said to be saturated if it cannot dissolve more of the substance in it.

Key words

Churning
Condensation
Decantation
Evaporation
Filtration
Handpicking

Saturated solution
Sedimentation
Sieving
Solution
Threshing
Winnowing



Summary

- Handpicking, winnowing, sieving, sedimentation, decantation and filtration are some of the methods of separating substances from their mixtures.

- Husk and stones could be separated from grains by handpicking.
- Husk is separated from heavier seeds of grain by winnowing.
- Difference in the size of particles in a mixture is utilised to separate them by the process of sieving and filtration.
- In a mixture of sand and water, the heavier sand particles settle down at the bottom and the water can be separated by decantation.
- Filtration can be used to separate components of a mixture of an insoluble solid and a liquid.
- Evaporation is the process in which a liquid gets converted into its vapour. Evaporation can be used to separate a solid dissolved in a liquid.
- A saturated solution is one in which no more of that substance can be dissolved.
- More of a substance can be dissolved in a solution by heating it.
- Water dissolves different amount of soluble substances in it.

Exercises

1. Why do we need to separate different components of a mixture? Give two examples.
2. What is winnowing? Where is it used?
3. How will you separate husk or dirt particles from a given sample of pulses before cooking.
4. What is sieving? Where is it used?
5. How will you separate sand and water from their mixture?
6. Is it possible to separate sugar mixed with wheat flour? If yes, how will you do it?
7. How would you obtain clear water from a sample of muddy water?
8. Fill up the blanks
 - (a) The method of separating seeds of paddy from its stalks is called _____.
 - (b) When milk, cooled after boiling, is poured onto a piece of cloth the cream (*malai*) is left behind on it. This process of separating cream from milk is an example of _____.
 - (c) Salt is obtained from seawater by the process of _____.
 - (d) Impurities settled at the bottom when muddy water was kept overnight in a bucket. The clear water was then poured off from the top. The process of separation used in this example is called _____.
9. True or false?
 - (a) A mixture of milk and water can be separated by filtration.
 - (b) A mixture of powdered salt and sugar can be separated by the process of winnowing.

- (c) Separation of sugar from tea can be done with filtration.
- (d) Grain and husk can be separated with the process of decantation.
10. Lemonade is prepared by mixing lemon juice and sugar in water. You wish to add ice to cool it. Should you add ice to the lemonade before or after dissolving sugar? In which case would it be possible to dissolve more sugar?

SUGGESTED PROJECTS AND ACTIVITIES

1. Visit a nearby dairy and report about the processes used to separate cream from milk.
2. You have tried a number of methods to separate impurities like mud from water. Sometimes, the water obtained after employing all these processes could still be a little muddy. Let us see if we can remove even this impurity completely. Take this filtered water in a glass. Tie a thread to a small piece of alum. Suspend the piece of alum in the water and swirl. Did the water become clear? What happened to the mud? This process is called loading. Talk to some elders in your family to find out whether they have seen or used this process.

THINGS TO SEE



*“The winnowers”, painted by Gustav Courbet in 1853
Reproduced with permission from Musée de Beaus Arts, Nantes, France*



0652CH07

4

Getting to Know Plants

Go outside and observe all the plants around you (Fig. 4.1). Do you see that some plants are small, some very big, while some are just patches of green on the soil? Some have green leaves, while some others have reddish ones. Some have huge red flowers, some have tiny blue ones, while some have none. We do see a variety of plants existing all around us — near our homes, in the school ground, on the way to

the school, in the parks and gardens, isn't it?

Let us get to know the different parts of any plant. This will help us



Fig. 4.1 A Nature walk!

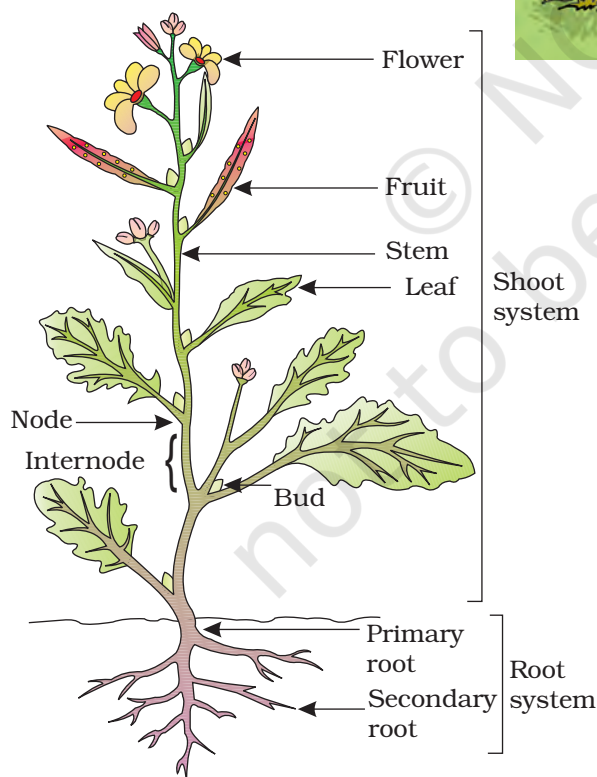


Fig. 4.2 Parts of a plant

understand the differences between plants of different kinds. Can you label the stem, branch, root, leaf, flower and fruit of the plant shown in Fig.4.1? Colour the parts of the plant.

4.1 HERBS, SHRUBS AND TREES

Activity 1

Look closely at the stem and branches of:

1. Plants much smaller than you.
2. Plants that are about your size, and
3. Plants which are much taller than you.

Feel their stem and try to bend them gently to see if they are tender or hard.

Table 4.1 Categories of plants

Plant name	Column 1 Height	Column 2 Stem				Column 3 Where do the branches appear		Column 4
		Green	Tender	Thick	Hard	At the base of the stem	Higher up on the stem	Category of plant
Tomato	Short	Yes	Yes					Herb
Mango	Very tall			Yes	Yes		Yes	Tree
Lemon	About my height				Yes	Yes		Shrub

Take care that the stem does not break. Hug the tall plants to see how thick their stems are!

We also need to notice from where the branches grow in some plants — close to the ground or higher up on the stem.

We will now group all the plants we observed, in Table 4.1. Some examples are shown. You can fill the Columns 1,

2 and 3 for many more plants. Fill Column 4 later after studying the section.

Based on these characters most plants can be classified into three categories: **herbs**, **shrubs** and **trees**. An example of each is shown in Fig.4.3.

Suggestion: Student can work in groups of 4–5 so that a minimum number of plants are harmed/damaged.

You may also use **weeds** with soft stems for the activities. Do you know what weeds are? In crop fields, lawns, or in pots, often some unwanted plants or weeds start growing. Have you seen farmers removing these weeds from their fields?




Fig.4.3 (a) Herb, (b) shrub and (c) tree

Plants with green and tender stems are called herbs. They are usually short and may not have many branches [Fig.4.3 (a)].

Some plants develop branches near the base of stem. The stem is hard but not very thick. Such plants are called shrubs [Fig.4.3(b)].

Some plants are very tall and have hard and thick stem. The stems have branches in the upper part, much above the ground. Such plants are called trees [Fig.4.3(c)].

Based on the above characteristics can you now classify the plants listed by you and complete column 4 in Table 4.1?



Fig. 4.4 Creepers



Fig. 4.5 Climbers

two trees, shrubs, herbs or creepers growing in your house or school.

4.2 STEM

Observe closely the stems of different plants around you. Note down different structures/parts borne by the stem. Compare your observations with the that of your friends. What do you find? Stems bear leaves, branches, buds, flowers and fruits.

Paheli wonders what kind of stem — the money plant, beanstalk, gourd plants and grape vines have. Do observe some of these plants. How are these different from a herb, a shrub or a tree? Why do you think some of them need support to climb upwards?



Plants with weak stems that cannot stand upright but spread on the ground are called **creepers** (Fig.4.4), while those that take support and climb up are called **climbers** (Fig.4.5). These are different from the herbs, shrubs and trees.

Perhaps there are some plants in your school or at home that you take care of. Write down the names of any

Activity 2

We would require a glass, water, red/blue ink and a soft stem. Pour water to fill one-third of the glass. Add a few drops of red/blue ink to the water. Cut the base of the stem and put it in the glass as shown in Fig.4.6.

Observe the set-up. Does the colour appear in the stem? You will find that the colour rises in the stem. If this is kept for a longer period, the colour



Fig. 4.6 Stem in a glass with coloured water

appears in the veins of leaves also. How do you think the colour reached there?

From this activity, we see that the stem helps in upward movement of water. The water and minerals go to leaves and other plant parts attached to the stem.

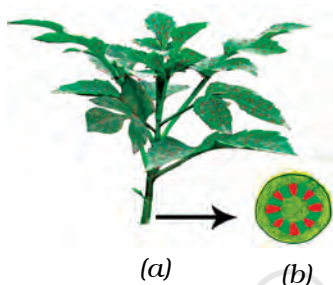


Fig. 4.7 (a) Water moves up the stem and reaches leaves
(b) Enlarged view of open end of stem

4.3 LEAF

Observe the leaves of some plants around you and draw them in your notebook. Are all the leaves of same size, shape and colour?

How are leaves attached to the stem? The part of leaf by which it is attached to the stem is called **petiole**. The broad, green part of the leaf is called **lamina** (Fig. 4.8). Can you identify these parts of the leaves in plants around you? Do all the leaves have petioles?



Fig. 4.8 A leaf

Let us get to know the leaf better by taking its impression! If you thought that leaves cannot sign, here is an activity which will make you think again.

Activity 3

Put a leaf under a white sheet of paper or a sheet in your notebook. Hold it in place as shown in Fig. 4.9. Hold your pencil tip sideways and rub it on the portion of the paper having the leaf below it. Did you get an impression with some lines in it? Are they similar to those on the leaf?

These lines on the leaf are called **veins**. Do you see a prominent line in the middle of the leaf? This is called the **midrib**. The design made by veins in a leaf is



Fig. 4.9 Taking an impression of a leaf

called the **leaf venation**. If this design is net-like on both sides of midrib, the venation is **reticulate** [Fig. 4.10 (a)]. In the leaves of grass you might have seen that the veins are parallel to one another. This is **parallel venation** [(Fig. 4.10 (b))]. Observe the venation in as many leaves as you can without removing them from the plant. Draw the pattern and write




Fig. 4.10 Leaf venation (a) reticulate and (b) parallel

names of some plants having reticulate and parallel venation.

Shall we now find out some of the functions of a leaf?

Activity 4

We will require a herb, two transparent polythene bags and thread.

Do this activity during day time on a sunny day. Use a healthy, well watered plant that has been growing in the sun. Enclose a leafy branch of the plant in a polythene cover and tie up its mouth as shown in Fig. 4.11. Tie up the mouth of another empty polythene cover and keep it also in the sun.

After a few hours, observe the inner surface of the covers. What do you see? Are there any droplets of water? How do you think they got there? [Don't forget to remove the polythene bag after the activity!]

Water comes out of leaves in the form of vapour by a process called **transpiration**. Plants release a lot of water into the air through this process.

Why did we tie a cover around the leaves? Would we have seen the water evaporate if we had not tied a polythene




Fig. 4.11 What does the leaf do?

cover? What makes the water appear on the polythene bag? In Chapter 5, we noticed water changing into different forms in some of our activities. Can you think of these and name the process that makes water drops appear on the polythene cover?

Leaves also have another function. Let us study this.

Activity 5

We would require a leaf, spirit, a beaker, test tube, burner, water, a watch glass and iodine solution for this activity.

Take a leaf in a test tube and pour spirit to completely immerse the leaf.

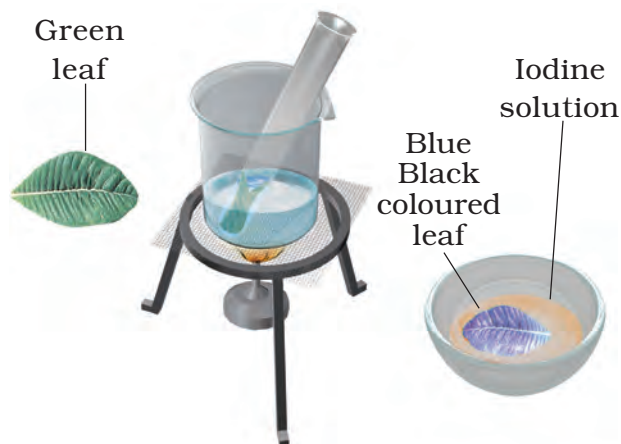


Fig. 4.12 What does the leaf contain?

Note: Since the activity involves the use of spirit and heating, it is advised that it is demonstrated by the teacher in the class.

Now, place the test tube in a beaker half filled with water. Heat the beaker till all the green colour from the leaf comes out into the spirit in the test tube. Take out the leaf carefully and wash it in water. Place it on a watch glass and pour some iodine solution over it (Fig. 4.12).

What do you observe? Compare your observations with those done in Chapter 1, when you tested food for presence of different nutrients. Does this mean that the leaf has starch in it?

In Chapter 1, we saw that a slice of raw potato also shows the presence of starch. Potatoes get this starch from their leaves and store it. Leaves prepare their food in the presence of sunlight and a green coloured substance present in them. For this, they also use water and carbon dioxide. This process is called **photosynthesis**. Oxygen is given out in this process. The food prepared by leaves ultimately gets stored in different parts of plant.

We have seen that the stem supplies leaf with water. The leaf uses the water to make food. The leaves also lose water through transpiration. How do the stem and leaves get water? That is where the roots come in!

4.4 Root

Look at Fig. 4.13. Who do you think is watering their plant correctly, Paheli or Boojho? Why?



Fig. 4.13 Watering the plants

Which part of the plant is in the soil? Let us learn more about this part from the following activities.

Activity 6

You would require two pots, some soil, *khurpi* (for digging), blade or a pair of scissors and water. This activity is to be done in groups of 4-5 students.

Select two plants of the same kind from an open ground and dig them out with roots. Take care that their roots do not break. Plant one of them in pot A [Fig. 4.14 (a)]. Cut off the roots from the

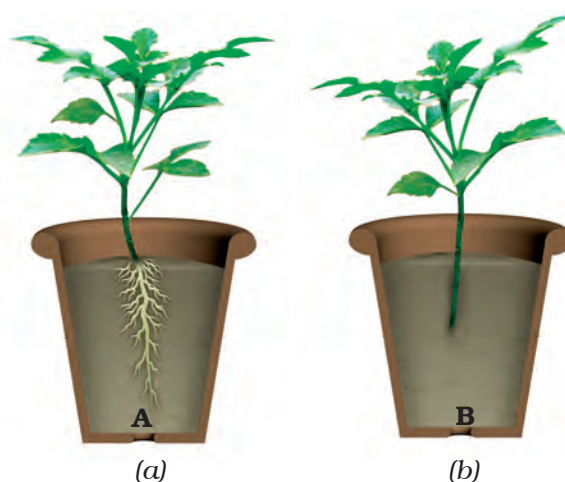


Fig. 4.14 (a) Plant with roots, and (b) without roots

other plant and plant it in pot B [Fig. 4.14 (b)]. Water them regularly. Observe the plants after a week. Are both plants healthy?

Both the plants are watered regularly, but, one is without roots, isn't it? Does this activity help you understand an important function of the root?

Let us do an activity to study another function of root.

Activity 7

We would require seeds of gram and maize, cotton wool, *katori* (bowl) and some water.

Take two *katoris* (bowl). Place some wet cotton in them. Put 3 or 4 seeds of gram in one and maize in the other. Keep the cotton wet by sprinkling water every day, until the sprouts have grown into young plants. After a week try to separate the young plants from the cotton (Fig. 4.15).



Fig. 4.15 Young plants grown on cotton

Was it easy to separate the cotton from the roots? Why?

In Activity 6, we could not pull out the plants from the soil, right? We dug them out. This is because roots help in

holding the plant firmly to the soil. They **anchor** the plant to the soil.

You have seen that there are different kinds of stems and leaves. Do the roots also show a variety? Let us find out.

Activity 8

Study Fig. 4.16 (a) and (b) carefully. Now, look at the roots of the gram plants you have pulled out from the cotton in the previous activity. Do they look like the roots shown in Fig. 4.16 (a) or those in Fig. 4.16 (b)? How about the roots of




Fig 4.16 (a) Roots of _____
(b) Roots of _____

maize plant? Write 'gram' or 'maize' in the blank spaces in the figure after matching the roots with the figures.

In what way are the roots of gram and maize similar? In what way are they different? There seem to be two different types of roots, isn't it? Are there also other types of roots? Let us find out.

Activity 9

Go to an open ground where many wild plants are growing. Dig out a few, wash the soil off the roots and observe them. Do you find that all of them have either the kind of roots shown in Fig. 4.17 (a) or as in Fig. 4.17 (b)?

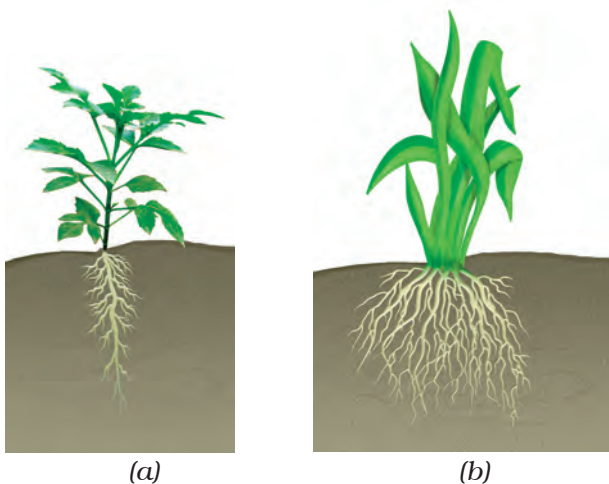


Fig. 4.17 (a) Taproot and (b) fibrous roots

For roots of the kind shown in Fig.4.17 (a), the main root is called **tap root** and the smaller roots are called **lateral roots**. Plants with roots as shown in Fig. 4.17 (b) do not have a main root. All roots seem similar and these are called **fibrous roots**.

Separate the plants you have collected into two groups. In group (a) put those that have tap roots and in group (b) those that have fibrous roots. Look at the leaves of the plants in Group (a). What kind of venation do they have? What kind of venation do you see for plants of Group (b)?

Do you notice that leaf venation and the type of roots in a plant are related in

Boojho has a brilliant idea! If he wants to know what kind of roots a plant has, he need not pull it out. He just has to look at its leaves!



a very interesting way? In Table 4.2, can you match the type of leaf venation and the type of roots for some plants you have studied in all the activities so far?

Table 4.2 Types of roots and types of leaf venation

Name of plant	Type of leaf venation	Type of roots

We have learnt that roots absorb water and minerals from the soil and the stem conducts these to leaves and other parts of the plant. The leaves prepare food. This food travels through the stem and is stored in different parts of plant. We eat some of these as roots—like carrot, radish, sweet potato, turnip and tapioca. We also eat many other parts of a plant where food is stored.

Do you agree that stem is like a street with two way traffic (Fig. 4.18)? Write the name of material that goes up in the stem and that which comes down.



Fig. 4.18. Stem as two-way traffic street

In the next section, we will study about the structure of a flower.

4.5 FLOWER

You are shown three branches of a rose in Fig 4.19 (a), (b) and (c). Which one will help you best to recognise the plant?




Fig 4.19 Rose: (a) A leafless branch
(b) A branch with leaves
(c) A branch with leaves and flowers

Which colour did you use for the flower in Fig. 4.19 (c)? Are all flowers colourful? Have you ever seen flowers on grass, wheat, maize, mango or guava? Are those brightly coloured?

Let us study a few flowers.

When choosing flowers to study, avoid using marigold, chrysanthemum or sunflower. You will learn in higher classes that they are not single flowers, but groups of flowers.

Activity 10

We would require one bud and two fresh flowers each, of any of the following—*datura*, china rose, mustard, brinjal, lady's finger, gulmohur. Also a blade, a glass slide or a sheet of paper, a magnifying glass and water.

Observe Fig. 4.20 carefully. Look at the prominent parts of the open flower.

These are the **petals**. Different flowers have petals of different colours.

Where do you think the petals are in a closed bud? Which is the most prominent part in a bud? Did you see that this part is made of small leaf-like structures? They

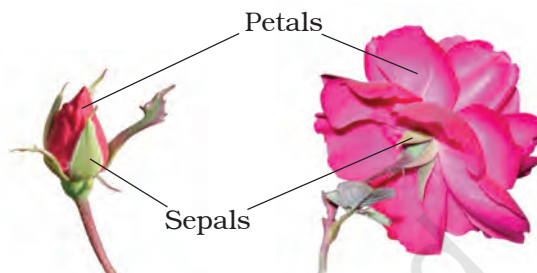


Fig. 4.20 Bud and flower

are called **sepals**. Take a flower and observe its petals and sepals. Now, answer the following questions:

How many sepals does it have?

Are they joined together?

What are the colours of the petals and the sepals?

How many petals does the flower have?

Are they joined to one another or are they separate?

Do the flowers with joint sepals have petals that are separate or are they also joined together?

Fill the table based on the observations of the whole class (Table 4.3). Add observations to this table, from a field trip to a locality where there are plants with flowers. Fill the last two columns later.

To see the inner parts of the flower clearly, you have to cut it open, if its petals are joined. For example, in *datura* and other bell-shaped flowers, the petals have to be cut lengthwise and spread

Table 4.3 Observations on flowers

Name of flower/plant	Number and colour of sepals	Number and colour of petals	Are the sepals joined or separate?	Are the petals joined or separate?	Stamens - are they free or joined to petals	Pistil - Present/absent
Rose	Many (Colour?)	5 (Colour?)	Separate		Free	Present

out so that the inner parts can be seen clearly (Fig. 4.21).

Remove the sepals and petals to see the other parts. Study the Fig. 4.22 carefully, compare your flower with the illustration and identify the **stamens** and **pistil** in your flower.

Look at Fig 4.23 carefully. It shows different kinds of stamens present in different flowers. Can you recognise the two parts of the stamens in your flower? How many stamens are there in your flower? Draw one stamen and label its parts.



Fig. 4.21 A bell-shaped flower




Fig. 4.22 Parts of a flower



Fig. 4.23 Parts of a stamen

The innermost part of flower is called the **pistil**. If you cannot see it completely, remove the remaining stamens. Identify the parts of the pistil with the help of Fig. 4.24.

Draw a neat, labelled diagram of the pistil of your flower.

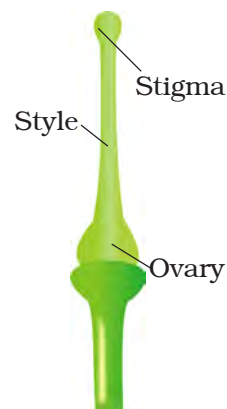


Fig. 4.24 Parts of a pistil

Activity 11

Let us now study the structure of **ovary** (Fig. 4.24). It is the lowermost and swollen part of the pistil. We will cut this part to study what is inside! Look at Fig. 4.25 (a) and (b) carefully to understand how to cut the ovary of a flower.

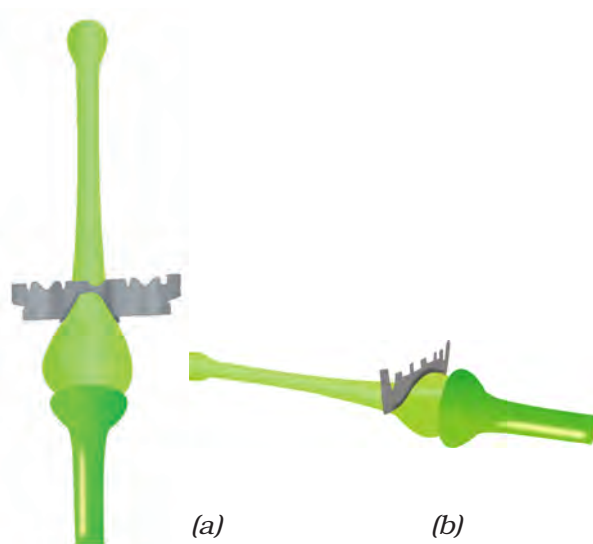


Fig. 4.25 Cutting an ovary (a) longitudinal cut and (b) transverse cut

Cut the ovary in two different ways as shown in Fig. 4.25. To prevent them from drying, put a drop of water on each of the two pieces of the ovary, you have cut.

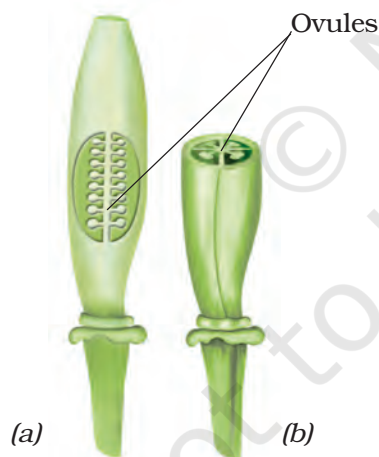


Fig. 4.26 Inner structure of an ovary (a) longitudinal cut, (b) transverse cut

Observe the inner parts of the ovary using a lens (Fig. 4.26). Do you see some small bead like structures inside the ovary? They are called **ovules**. Draw and label the inner parts of the ovary in your notebook.

Try to find out the names of as many flowers as you can by asking the gardener or any other person. Remember, not to pluck more flowers than you need. Based on what you have filled in Table 4.3, answer the following questions.

Do all flowers have sepals, petals, stamens and pistils? Are there flowers that do not have one or more of these? Are there flowers which have parts other than these?

Did you find any flower which has no difference between sepals and petals?

Did you find any flower in which the number of stamens is different from the number of petals?

Do you now agree that the structure of the flower is not always the same? The number of sepals, petals, stamens and pistils may also be different in different flowers. Some of these parts may even be absent at times!

We have studied some features and functions of leaves, stems and roots. We studied the structure of different flowers. We will learn about the function of flowers in higher classes. We will also learn about fruits in higher classes.

Key words

Climbers	Petiole
Conduct	Photosynthesis
Creepers	Pistil
Fibrous roots	Reticulate venation
Herbs	Sepal
Lamina	Shrubs
Lateral roots	Stamen
Midrib	Taproot
Ovule	Transpiration
Parallel Venation	Trees
Petal	Veins



Summary

- Plants are usually grouped into herbs, shrubs and trees based on their height, nature of stem and branches.
- The stem bears leaves, flowers and fruits.
- Leaf usually has a petiole and lamina.
- The pattern of veins on the leaf is called venation. It can be reticulate or parallel.
- Leaves give out water vapour through the process of transpiration.
- Green leaves make their food by the process of photosynthesis using carbon dioxide and water in the presence of sunlight.
- Roots absorb water and minerals from the soil. They also anchor the plant firmly in the soil.
- Roots are mainly of two types: tap root and fibrous root.
- Plants having leaves with reticulate venation have tap roots while plants having leaves with parallel venation have fibrous roots.
- The stem conducts water from roots to the leaves (and other parts) and food from leaves to other parts of the plant.
- The parts of a flower are sepals, petals, stamens and pistil.

Exercises

- Correct the following statements and rewrite them in your notebook.
 - Stem absorbs water and minerals from the soil.
 - Leaves hold the plant upright.
 - Roots conduct water to the leaves.
 - The number of petals and stamens in a flower is always equal.
 - If the sepals of a flower are joined together, its petals are also joined together.
 - If the petals of a flower are joined together, then the pistil is joined to the petal.
- Draw (a) a leaf, (b) a taproot and (c) a flower, you have studied for Table 4.3.
- Can you find a plant in your house or in your neighborhood, which has a long but weak stem? Write its name. In which category will you place it?
- What is the function of a stem?
- Which of the following leaves have reticulate venation?
Wheat, tulsi, maize, grass, coriander (*dhania*), China rose
- If a plant has fibrous root, what type of venation do its leaves have?
- If a plant has leaves with reticulate venation, what kind of roots will it have?
- Is it possible for you to find out whether a plant has taproot or fibrous roots by looking at the impression of its leaf on a sheet of paper?
- What are the parts of a flower.
- From the following plants, which of them have flowers?
Grass, maize, wheat, chilli, tomato, *tulsi*, *peepal*, *shisham*, banyan, mango, *jamun*, guava, pomegranate, papaya, banana, lemon, sugarcane, potato, groundnut
- Name the part of plant which produces food. Name the process.
- In which part of a flower, you will find the ovary?
- Name two plants in which one has joined sepals and the other has separate sepals.

SUGGESTED PROJECT AND ACTIVITIES

1. BECOME A LEAF EXPERT

Do this activity with a number of leaves over a period of few weeks. For every leaf that you wish to study, pluck it and wrap it in a wet cloth and take it home. Now, place the leaf between the folds of a newspaper and place a heavy book on it. You can also put it under your mattress or a trunk! Take out the leaf after a week. Paste it on a paper and write a poem or story about it. With your leaf collection pasted in a book, you can become an expert about leaves!

2. Names of plant parts are hidden in this grid. Search them by going up, down, diagonally, forward or backward. Have fun!

O	V	U	L	E	L	Y	T	S	T	E	M
V	E	I	N	W	Q	H	E	R	B	P	I
A	N	I	M	A	L	Z	E	X	R	N	D
R	F	I	L	A	M	E	N	T	M	U	R
Y	A	R	A	B	L	C	O	D	B	E	I
L	E	E	U	O	F	O	L	G	H	I	B
A	L	H	I	I	R	J	A	L	K	U	R
T	M	T	N	O	T	P	P	Q	R	R	A
E	E	N	S	T	U	F	E	H	V	W	N
P	Y	A	M	G	I	T	S	Z	Z	N	C
F	L	O	W	E	R	E	H	T	N	A	H
S	T	A	M	E	N	N	S	E	P	A	L

5



0652CH08

Body Movements

Sit absolutely still. Observe the movements taking place in your body. You must be blinking your eyes, time to time. Observe the movements in your body as you breathe. There are so many movements that happen in our bodies.

When you are writing in your notebook which part of the body are you moving? Or, when you turn and look at your friend? Different parts of your body move while you remain at the same place, in these examples. You also move from one place to another — you get up and go to your teacher or to the school compound, or go home after school. You walk, run, skip, jump and move from place to place.

Let us see how animals move from place to place by filling up Table 5.1, after discussing with our friends, teachers and parents.

Boojho wonders about movements in plants. He knows they do not move from place to place, but, do they show any other kind of movements?



Table 5.1 How do animals move from place to place?

Animal	Body part used for moving from place to place	How does the animal move?
Cow	Legs	Walk
Humans		
Snake	Whole body	Slither
Bird		
Insect		
Fish		

Walk, run, fly, jump, creep, crawl, slither and swim – these are only a few of the ways in which animals move from one place to another. Why are there so many differences in the way that animals move from place to place? Why is it that many animals walk while a snake slithers or crawls and a fish swims?

5.1 HUMAN BODY AND ITS MOVEMENTS

Let us look closely at some of our own movements to begin with, before looking at all these varieties of movements in animals.

Do you enjoy doing physical exercise at school? How do you move your hands and legs while doing different exercises?

Let us try some of the many movements, our body is capable of.

Bowl an imaginary ball at an imaginary wicket. How did you move your arm? Did you rotate it at the shoulder in a circular movement? Did your shoulder also move? Lie down and rotate your leg at the hip. Bend your arm at the elbow and the leg at the knee. Stretch your arm sideways. Bend your arm to touch your shoulder with your fingers. Which part of your arm did you bend? Straighten your arm and try to bend it downwards. Are you able to do it?

Try to move the various parts of your body and record their movements in Table 5.2.

Why is it that we are able to move a few parts of our body easily in various directions and some only in one direction? Why are we unable to move some parts at all?

Activity 1

Place a scale length-wise on your arm so that your elbow is in the centre (Fig. 5.1).

Ask your friend to tie the scale and your arm together. Now, try to bend your elbow. Are you able to do it?




Fig. 5.1 Can you bend your arm now?

Table 5.2 Movements in our body

Body Part	Movement				
	Rotates completely	Rotates partly/turns	Bends	Lifts	Does not move at all
Neck		Yes			
Wrist					
Finger					
Knee					
Ankle					
Toe					
Back					
Head					
Elbow					
Arm	Yes				

Did you notice that we are able to bend or rotate our body in places where two parts of our body seem to be joined together — like elbow, shoulder or neck? These places are called **joints**. Can you name more such joints? If our body has no joints, do you think it would be possible for us to move in any way at all?

What exactly is joined together at these joints?

Press your fingers against the top of your head, face, neck, nose, ear, back of the shoulder, hands and legs including the fingers and toes.

Do you get a feel of something hard pressing against your fingers? The hard structures are the bones. Repeat this activity on other parts of your body. So many bones!

Bones cannot be bent. So, how do we bend our elbow? It is not one long bone from the upper arm to our wrist. It is different bones joined together at the elbow. Similarly, there are many bones present in each part of the body. We can bend or move our body only at those points where bones meet.

There are different types of joints in our body to help us carry out different movements and activities. Let us learn about some of them.

Ball and socket joints

Activity 2

Roll a strip of paper into a cylinder. Make a small hole in an old rubber or plastic ball (under supervision) and push the paper cylinder into it as shown in Fig. 5.2. You can also stick the cylinder on the ball. Put the ball in a small bowl.

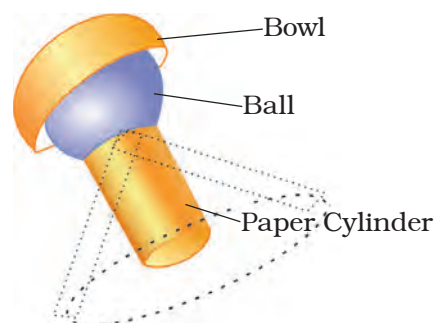


Fig. 5.2 Making a ball and socket joint

Does the ball rotate freely inside the bowl? Does the paper cylinder also rotate?

Now, imagine that the paper cylinder is your arm and the ball is its end. The bowl is like the part of the shoulder to which your arm is joined. The rounded end of one bone fits into the **cavity** (hollow space) of the other bone (Fig.5.3). Such a joint allows movements in all directions. Can you name another such joint you can think of, recollecting the body movements we tried at the beginning of this section?

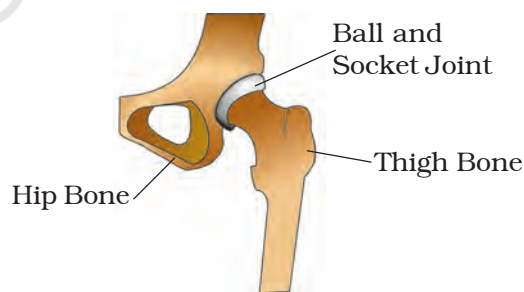


Fig. 5.3 A ball and socket joint

Pivotal Joint

The joint where our neck joins the head is a pivotal joint (Fig. 5.4). It allows us to bend our head forward and backward and turn the head to our right or left. Try these movements. How are these movements different from those of our arm that can rotate a complete circle in

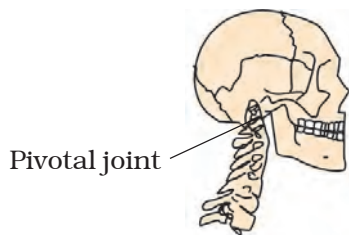


Fig. 5.4 A pivotal joint

its ball and socket joint? In a pivotal joint a cylindrical bone rotates in a ring.

Hinge joints

Open and close a door a few times. Observe the **hinges** of the door carefully. They allow the door to move back and forth.

Activity 3

Let us look at the kind of movement allowed by a hinge. Make a cylinder with cardboard or thick chart paper, as shown in Fig. 5.5. Attach a small pencil to the cylinder by piercing the cylinder at the centre, as shown. Make a hollow half cylinder from cardboard such that the rolled up cylinder can fit inside it easily. The hollow half cylinder with the rolled up cylinder sitting inside it, allows movement like a hinge. Try to move the rolled up cylinder. How does it move? How is this movement different from what we saw with our constructed ball and socket joint? We saw this kind of



Fig. 5.5 Directions of movement allowed by a hinge like joint

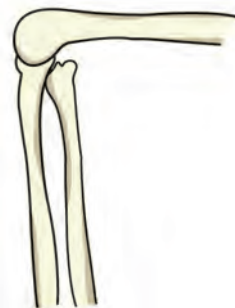


Fig. 5.6 Hinge joints of the knee

movement at the elbow in Activity 1. What we have constructed in Fig. 5.5 is different from a hinge, of course. But, it illustrates the direction in which a hinge allows movement. The elbow has a hinge joint that allows only a back and forth movement (Fig. 5.6). Can you think of more examples of such joints?

Fixed joints

Some joints between bones in our head are different from those we have discussed so far. The bones cannot move at these joints. Such joints are called **fixed** joints. When you open your mouth wide, you can move your lower jaw away from your head, isn't it? Try to move your upper jaw, now. Are you able to move it? There is a joint between the upper jaw and the rest of the head which is a fixed joint.

We discussed only some of the joints that connect parts of our body.

What gives the different parts of the body their different shapes?

If you wanted to make a doll, what will you make first? Perhaps a framework to give the doll shape before making its outer structure, isn't it? All the bones in our body also form a framework to give a shape to our body.

The human skeleton is composed of around 305 bones at birth. The number of bones in the skeleton changes with age. It decreases to 206 bones by adulthood after some bones have fused together.

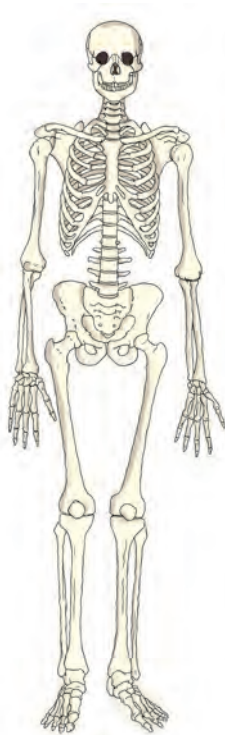


Fig. 5.7 The Human skeleton

This framework is called the **skeleton** (Fig. 5.7.)

How do we know that this is the shape of a human skeleton? How do we know the shapes of the different bones in our body? We can have some idea about the shape and number of bones in some parts of our body by feeling them. One way we could know this shape better would be to look at X-ray images of the human body.

Did you or anyone in your family ever have an X-ray of any part of your body taken? Sometimes when we are hurt, or have an accident, doctors use these X-ray images to find out about any possible injuries that might have happened to the bones. The X-rays show the shapes of the bones in our bodies.

Feel the bones in your forearm, upper arm, lower leg and upper leg. Try to find the number of bones in each part.

Similarly, feel the bones of your ankle and knee joints and compare these with the X-ray images (Fig. 5.8).



Fig. 5.8 X-ray images of ankle and knee joints

Bend your fingers. Are you able to bend them at every joint? How many bones does your middle finger have? Feel the back of your palm. It seems to have many bones, isn't it (Fig. 5.9)? Is your wrist flexible? It is made up of several small bones called **carpals**. What will happen if it has only one bone?



Fig. 5.9 Bones of the hand

Activity 4

Take a deep breath and hold it for a little while. Feel your chest bones and the back bone by gently pressing the middle of the chest and back at the same time. Count as many ribs (bones of the chest)

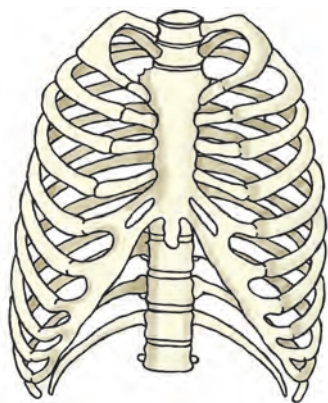


Fig. 5.10 The rib cage

as possible. Observe Fig. 5.10 carefully and compare with what you feel of the chest bones. We see that the ribs are curiously bent. They join the chest bone and the backbone together to form a box. This is called the **rib cage**. There are 12 ribs on each side of chest. Some important internal parts of our body lie protected inside this cage.

Ask some friends to touch their toes without bending their knees. Starting from the neck, move your fingers downwards on the back of your friend. What you feel is the **backbone**. It is made up of many small bones called vertebrae. The backbone consists of 33 vertebrae (Fig. 5.11). The rib cage is joined to these bones.



Fig. 5.11 The backbone

If backbone was made up of only one long bone, will your friend be able to bend?

Make your friend stand with both hands pressed to the wall and ask her to push the wall. Do you notice two



Fig. 5.12 Shoulder bones

bones on the back are prominent where the shoulders are? They are called **shoulder bones** (Fig. 5.12).

Observe Fig. 5.13 carefully. This structure is made of **pelvic bones**. They enclose the portion of your body below the stomach. This is the part you sit on.

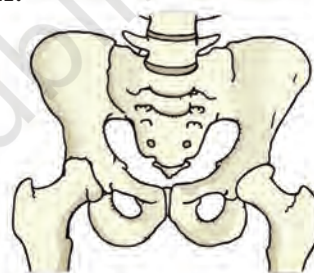


Fig. 5.13 Pelvic bones

The skull is made up of many bones joined together (Fig. 5.14). It encloses and protects a very important part of the body, the brain.

We discussed many bones and the joints of our skeleton. There are

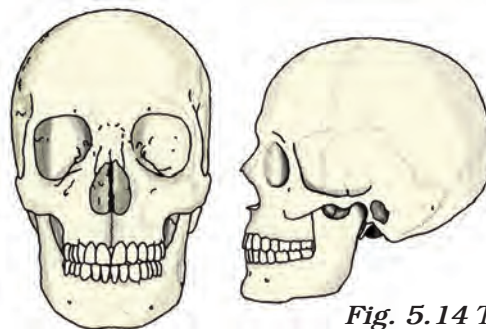


Fig. 5.14 The skull

some additional parts of the skeleton that are not as hard as the bones and which can be bent. These are called **cartilage**.

Feel your ear. Do you find any hard bony parts that can be bent (Fig. 5.15)? There do not seem to be any bones here, isn't it? Do you notice anything different between the ear lobe and the portions above it (Fig. 5.16), as you press them between your fingers?



Fig. 5.15 Upper part of ear has cartilage



Fig. 5.16 The ear lobe

You do feel something in the upper parts of the ear that is not as soft as the ear lobe but, not as hard as a bone, isn't it? This is cartilage. Cartilage is also found in the joints of the body.

We have seen that our skeleton is made up of many bones, joints and cartilage. You could feel, bend and move many of them. Draw a neat figure of the skeleton in your notebook.

We have learnt about the bones in our body and about joints that help us move in different ways. What makes the bones move the way they do? Let us find out.

Make a fist with one hand, bend your arm at the elbow and touch your shoulder with the thumb (Fig. 5.17). Do you see any change in your upper arm? Touch it with the other hand. Do you

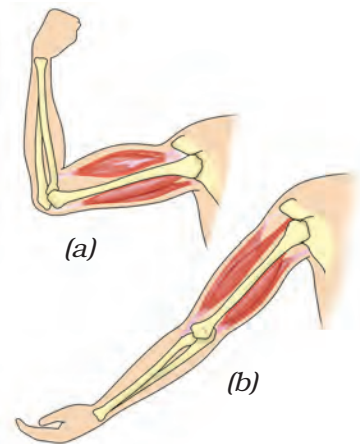


Fig. 5.17 Two muscles work together to move a bone

observe a swollen region in the upper arm? This is a **muscle**. The muscle bulged due to **contraction** (it became smaller in length). Now bring your arm back to its normal position. What happened to the muscle? Is it still contracted? You can observe similar contraction of muscles in your leg when you walk or run.

When contracted, the muscle becomes shorter, stiffer and thicker. It pulls the bone.

Muscles work in pairs. When one of them contracts, the bone is pulled in that direction. The other muscle of the pair relaxes. To move the bone in the opposite direction, the relaxed muscle contracts to pull the bone towards its original position, while the first relaxes. A muscle can only pull. It cannot push. Thus, two muscles have to work together to move a bone (Fig. 5.17).

Are muscles and bones always required for movement? How do other animals move? Do all animals have bones? What about an earthworm or a

snail? Let us study the manner of movement, that is, the gait of some animals.

5.2 "GAIT OF ANIMALS"

Earthworm

Activity 5

Observe an earthworm moving on soil in a garden. Gently lift it and place it on a piece of blotting or filter paper. Observe its movement (Fig. 5.18). Then place it on a smooth glass plate or any slippery surface. Observe its movement now. Is it different from that on paper? In which of the above two surfaces do you find that the earthworm is able to move easily?

The body of an earthworm is made up of many rings joined end to end. An

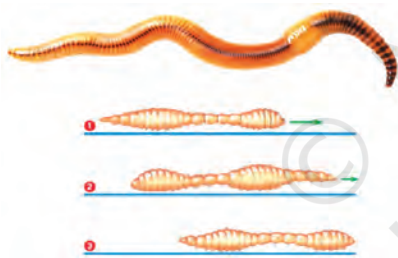


Fig. 5.18 Movement of earthworm

earthworm does not have bones. It has muscles which help to extend and shorten the body. During movement, the earthworm first extends the front part of the body, keeping the rear portion fixed to the ground. Then it fixes the front end and releases the rear end. It then shortens the body and pulls the rear end forward. This makes it move forward by a small distance. Repeating such muscle expansions and

contractions, the earthworm can move through soil. Its body secretes a slimy substance to help the movement.

How does it fix parts of its body to the ground? Under its body, it has a large number of tiny bristles (hair like structures) projecting out. The bristles are connected with muscles. The bristles help to get a good grip on the ground.

The earthworm, actually, eats its way through the soil! Its body then throws away the undigested part of the material that it eats. This activity of an earthworm makes the soil more useful for plants.

Snail

Activity 6

Observe a snail in your garden or in field. Have you seen the rounded structure it carries on its back (Fig. 5.19)?



Fig. 5.19 A snail

This is called the shell and it is the outer skeleton of the snail, but is not made of bones. The shell is a single unit and does not help in moving from place to place. It has to be dragged along.

Place the snail on a glass plate and watch it. When it starts moving, carefully lift the glass plate along with the snail over your head. Observe its movements from beneath.

A thick structure and the head of the snail may come out of an opening in

the shell. The thick structure is its foot, made of strong muscles. Now, carefully tilt the glass plate. The wavy motion of the foot can be seen. Is the movement of a snail slow or fast as compared to an earthworm?

Cockroach

Activity 7

Observe a cockroach (Fig. 5.20).

Cockroaches walk and climb as well as fly in the air. They have three pairs of legs. These help in walking. The body is covered with a hard outer skeleton. This outer skeleton is made of number



Fig. 5.20 A cockroach

of plates joined together and that permits movement.

There are two pairs of wings attached to the body behind head. The cockroaches have distinct muscles — those near the legs move the legs for walking. The body muscles move the wings when the cockroach flies.

Birds

Birds fly in the air and walk on the ground. Some birds like ducks and swans also swim in water. The birds can fly because their bodies are well suited for flying. Their bones are hollow and light. The bones of the hind limbs are typical for walking and perching. The



Fig. 5.21 Skeleton of a bird

bony parts of the forelimbs are modified as wings. The shoulder bones are strong. The breastbones are modified to hold muscles of flight which are used to move the wings up and down (Fig. 5.21).

Fish

Activity 8

Make a paper boat. Put it in water and push it with one narrow end pointing forward [Fig. 5.22 (a)]. Did it go into the water easily? Now hold the boat sideways and push it into the water from the broad side [Fig. 5.22 (b)]. Are you able to make the boat move in water when you push it from this side?

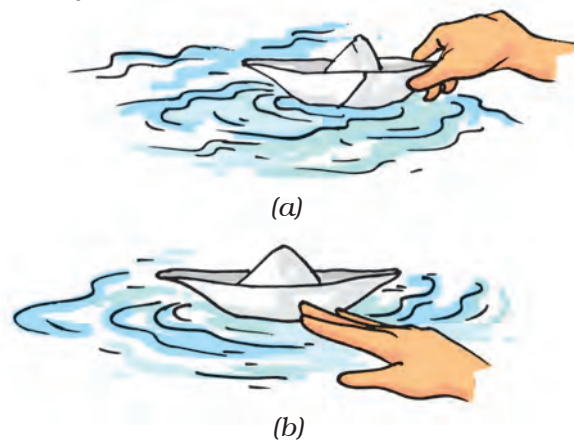


Fig. 5.22 Playing with boats



Fig. 5.23 Fish

Have you noticed that the shape of a boat is somewhat like a fish (Fig 5.23)? The head and tail of the fish are smaller than the middle portion of the body – the body tapers at both ends. This body shape is called **streamlined**.

The shape is such that water can flow around it easily and allow the fish to move in water. The skeleton of the fish is covered with strong muscles. During swimming, muscles make the front part of the body curve to one side and the tail part swings towards the opposite side. The fish forms a curve as shown in Fig. 5.24. Then, quickly, the body and tail curve to the other side. This makes a jerk and pushes the body forward. A series of such jerks make the fish swim ahead. This is helped by the fins of the tail.

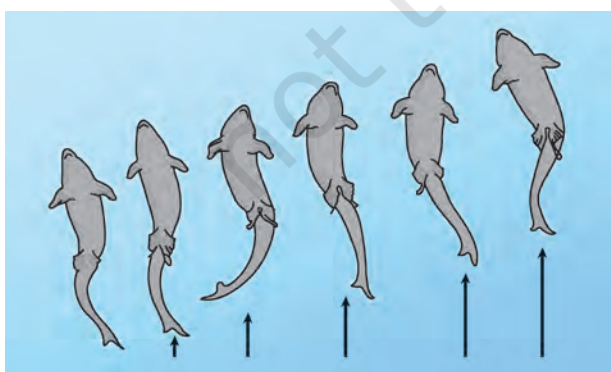


Fig. 5.24 Movement in Fish

Fish also have other fins on their body which mainly help to keep the balance of the body and to keep direction, while swimming. Did you ever notice that under water divers wear fin like flippers on their feet, to help them move easily in water?

How do snakes move?

Have you seen a snake slither? Does it move straight (Fig. 5.25)?

Snakes have a long backbone. They have many thin muscles. They are connected to each other even though they are far from one another. Muscles also interconnect the backbone, ribs and skin.

The snake's body curves into many loops. Each loop of the snake gives it a forward push by pressing against the ground. Since its long body makes many loops and each loop gives it this push, the snake moves forward very fast and not in a straightline.

We have learned about the use of bones and muscles for the movements of different animals. Paheli and Boojho have many questions in their sacks about the different movements in animals. So must you be having many unanswered questions buzzing in your



Fig. 5.25 Movement in a snake

minds? The ancient Greek philosopher Aristotle, in his book *Gait of Animals*, asked himself these questions. Why do different animals have the body parts that they do have and how do these body parts help animals to move the way they do? What are the similarities and differences in these body parts between different animals? How many body parts are needed by different animals for moving from place to

place? Why two legs for humans and four for cows and buffaloes? Many animals seem to be having an even number of legs, why? Why is the bending of our legs different from that of our arms?

So many questions and perhaps we have looked for some answers through our activities in this chapter and we need to look for many more answers.

Yoga — For Better Health

Yoga is an invaluable gift of the ancient Indian tradition. The United Nations declared 21 June as International Day of Yoga. Yoga keeps a person healthy. It helps in keeping the backbone erect, enabling you to sit straight and not slouch. Many postures in yoga require you to lift your own weight, which help in making the bones strong and help ward off osteoporosis. It also helps in relieving joint pain, which is mostly observed in elderly people. It tunes all muscles in the body and keeps them active. It keeps the heart healthy and makes it work more efficiently. Certain yoga postures should be performed under the supervision of a trained person.



Key words

Backbone

Ball and socket joint

Bristles

Cartilage

Cavity

Fixed joint

Gait of animals

Hinge joint

Muscle

Outer skeleton

Pelvic bones

Pivotal joint

Rib cage

Shoulder bones

Skeleton

Streamlined

Summary

- Bones and cartilage form the skeleton of the human body. It gives the frame and shape to the body and helps in movement. It protects the inner organs.
- The human skeleton comprises the skull, the back bone, ribs and the breast bone, shoulder and hipbones, and the bones of hands and legs.
- The bones are moved by alternate contractions and relaxations of two sets of muscles.
- The bone joints are of various kinds depending on the nature of joints and direction of movement they allow.
- Strong muscles and light bones work together to help the birds fly. They fly by flapping their wings.
- Fish swim by forming loops alternately on two sides of the body.
- Snakes slither on the ground by looping sideways. A large number of bones and associated muscles push the body forward.
- The body and legs of cockroaches have hard coverings forming an outer skeleton. The muscles of the breast connected with three pairs of legs and two pairs of wings help the cockroach to walk and fly.
- Earthworms move by alternate extension and contraction of the body using muscles. Tiny bristles on the underside of the body help in gripping the ground.
- Snails move with the help of a muscular foot.

Exercises

- Fill in the blanks:
 - Joints of the bones help in the _____ of the body.
 - A combination of bones and cartilages forms the _____ of the body.
 - The bones at the elbow are joined by a _____ joint.
 - The contraction of the _____ pulls the bones during movement.
- Indicate true (T) and false (F) among the following sentences.
 - The movement and locomotion of all animals is exactly the same. ()
 - The cartilages are harder than bones. ()
 - The finger bones do not have joints. ()
 - The fore arm has two bones. ()
 - Cockroaches have an outer skeleton. ()
- Match the items in Column I with one or more items of Column II.

Column I	Column II
Upper jaw	have fins on the body
Fish	has an outer skeleton
Ribs	can fly in the air
Snail	is an immovable joint
Cockroach	protect the heart
	shows very slow movement
	have a streamlined body

- Answer the following:
 - What is a ball and socket joint?
 - Which of the skull bones are movable?
 - Why can our elbow not move backwards?

THINGS TO THINK ABOUT

We discussed the many movements our bodies are capable of. Healthy bones, muscles, joints and cartilages are needed by the body for all these movements. Some of us suffer from conditions that could make these movements not so easy. In a whole class activity, try to find ways that one would manage everyday activities, if any one of our body movements was not possible. In Activity 1, for instance, you tied a scale on your arm and disabled the elbow movement. Think of other ways of restricting normal body movements and find ways that everyday activities could then be managed.

6

The Living Organisms Characteristics and Habitats



0652CH09

Paheli and Boojho went on vacation to many places of interest. One such trip took them to the river Ganga in Rishikesh. They climbed the mountains of the Himalayas, where it was very cold. They saw many kinds of trees on these mountains — oaks, pines and deodars, very different from the ones near their home on the plains! In yet another trip, they travelled to Rajasthan and moved on camels through the hot desert. They collected different kinds of cactus plants from this trip. Finally, they went on a trip to Puri and visited the sea beach, dotted with casuarina trees. While recollecting all the fun that they had on these trips, a thought struck them. All these places were so different from one another, some were cold, some very hot and dry, and some places so humid. And yet all of them had many **organisms** (living creatures) of various kinds.

They tried to think of a place on Earth where there may not be any living creatures. Boojho thought of places near his home. Inside the house, he tried the cupboards. He had thought that there may not be any living organisms here, but he found one tiny spider in the cupboard. Outside the home too, there did not seem to be any place, he could think of, that did not have living creatures

of some kind or the other (Fig. 6.1). Paheli started thinking and reading about far away places. She read that people have even found tiny living organisms in the openings of volcanoes!



Fig. 6.1 Search for living organisms

6.1 ORGANISMS AND THE SURROUNDINGS WHERE THEY LIVE

Another thought that occurred to Paheli and Boojho was about the kinds of living organisms that were present in different locations that they had visited. The deserts had camels, the mountains had goats and yak. Puri had some other creatures — crabs on the beach and such a variety of fish being caught by the fishermen at the sea! And then, there did seem to be some creatures like ants that were present in all these different locations. The kinds of plants found in each of these regions were so different from the plants of the other regions. What about the surroundings

in these different regions? Were they the same?

Activity 1

Let us start with a forest. Think of all the plants, animals and objects that can be found there. List them in Column 1 of Table 6.1. List things, animals and plants, found in the other regions that are also shown in the table. You can collect the examples scattered through this chapter to fill Table 6.1. Discuss also with your friends, parents and teachers, to find more examples to fill the tables. You can also consult many interesting books in libraries that talk of animals, plants and minerals of different regions.

Try and include many plants, animals and objects, big and small, in each of the columns in this table. What kind of objects will we find that may not be animals or plants? Perhaps parts of plants like dried leaves, or parts of animals, like bones. We may also find different kinds of soils and pebbles. Water in the oceans may have salts dissolved in it as discussed in Chapter 3. There could be many more objects.

As we go through the chapter, keep adding more examples to Table 6.1. We

will discuss the table as we travel through many more interesting places.

6.2 HABITAT AND ADAPTATION

What do you find from the plants and animals listed in Activity 1? Did you find a large variety in them? Look at what you have entered in the column for the desert and the column for the sea in Table 6.1. Did you list very different kind of organisms in these two columns?

What are the surroundings like, in these two regions?

In the sea, plants and animals are surrounded by **saline** (salty) water. Most of them use the air dissolved in water.

There is very little water available in the desert. It is very hot in the day time and very cold at night in the desert. The animals and plants of the desert live on the desert soil and breathe air from the surroundings.

The sea and the desert are very different surroundings and we find very different kind of plants and animals in these two regions, isn't it? Let us look at two very different kind of organisms from the desert and the sea – a camel and a fish. The body structure of a camel helps it to survive in desert conditions. Camels have long legs which help to

Table 6.1 Animals, plants and other objects found in different surroundings

In the forest	On mountains	In the desert	In the sea	Any other?

keep their bodies away from the heat of the sand (Fig. 6.2). They excrete small amount of urine, their dung is dry and they do not sweat. Since camels lose very little water from their bodies, they can live for many days without water.

Let us look at different kinds of fish. Some of these are shown in Fig. 6.3. There are so many kinds of fish, but, do you see that they all have something common about their shape? All the ones shown here have the streamlined shape that was discussed in Chapter 5. This shape helps them move inside water. Fish have slippery scales on their bodies. These scales protect the fish and also help in easy movement through water. We discussed in Chapter 5, that fish have flat fins and tails that help them to change directions and keep their body balance in water. Gills present in the fish help them to use oxygen dissolved in water.

We see that the features of a fish help it to live inside water and the features of a camel help it to survive in a desert.

We have taken only two examples from a very wide variety of animals and plants that live on the Earth. In all this variety of organisms, we will find that they have certain features that help them live in the surroundings in which they are normally found. The presence of specific features or certain habits, which enable an organism to live naturally in a place is called adaptation. Adaptation of organisms differ depending on their place of dwelling. That is why a fish cannot live out of water and a camel cannot live in sea.

The place where organisms live is called **habitat**. Habitat means a dwelling place (a home). The habitat provides food, water, air, shelter and other needs to organisms. Several kinds of plants and animals live in the same habitat.

The plants and animals that live on land are said to live in **terrestrial habitats**. Some examples of terrestrial habitats are forests, grasslands, deserts, coastal and mountain regions. On the other hand, the habitats of plants and



Fig. 6.2 Camels in their surroundings



Fig. 6.3 Different kinds of fish

There are some changes that can happen in an organism over a short period of time to help them adjust to some changes in their surroundings. For instance, if we live in the plains and suddenly go to high mountain regions, we may experience difficulty in breathing and doing physical exercise for some days. We need to breathe faster when we are on high mountains. After some days, our body adjusts to the changed conditions on the high mountain. Such small changes that take place in the body of a single organism over short periods, to overcome small problems due to changes in the surroundings, are called **acclimatisation**. These changes are different from the adaptations that take place over thousands of years.

animals that live in water are called **aquatic habitats**. Lakes, rivers and oceans are some examples of aquatic habitats. There are large variations among terrestrial habitats like forests, grasslands, deserts, coastal and mountain regions located in different parts of the world.

The organisms, both plants and animals, living in a habitat are its **biotic** components. The non-living things such as rocks, soil, air and water in the habitat constitute its **abiotic components**. Are sunlight and heat biotic or abiotic components?

We know that some plants grow from seeds. Let us look at some abiotic factors and their effect on seeds as they grow into young plants.

Activity 2

Recall Activity 7 in Chapter 4 — we made sprouts from gram and maize seeds. When the seed turned into a sprout, it is said to have **germinated**. This is the beginning of life of a new plant.

Collect some dry *moong* seeds. Keep 20-30 seeds aside and soak the rest in

water for a day. Divide the soaked seeds into four parts. Keep one part completely submerged in water for 3-4 days. Do not disturb the dry seeds and those submerged in water. Keep one part of soaked seeds in a sunny room and another in a completely dark region like a cupboard that does not allow any light to come in. Keep the last part in very cold surroundings, say, in a refrigerator or with ice around them. Rinse them and replace the water every day. What do you notice, after a few days? Do the seeds in all the five conditions germinate uniformly? Do you find slower or no germination in any of these?

Do you realise that abiotic factors like air, water, light and heat are important for the growth of plants. In fact, abiotic factors are important for all living organisms.

We find that organisms exist in very cold as well as very hot climates, isn't it? How do they manage to survive? Adaptation is the method by which organisms get well adjusted to the climate.

Adaptation does not take place in a short time because the abiotic factors of a region also change very slowly. Those organisms which cannot adapt to these changes die, and only the adapted ones survive. Organisms adapt to different abiotic factors in different ways. This results in a wide variety of organisms in different habitats.

Let us look at some habitats, understand the abiotic factors and the adaptations of animals in these habitats.

6.3 A JOURNEY THROUGH DIFFERENT HABITATS

Some Terrestrial Habitats

Deserts

We discussed the abiotic factors of a desert and the adaptations in camels. What about other animals and plants that are found in deserts? Do they have the same kind of adaptations?

There are desert animals like rats and snakes, which do not have long legs that a camel has. To stay away from the intense heat during the day, they stay in burrows deep in the sand (Fig 6.4). These animals come out only during the night, when it is cooler.

Fig. 6.5 shows some typical plants that grow in a desert. How are these adapted to the desert?

Activity 3

Bring a potted cactus and a leafy plant to the classroom. Tie polythene bags to some parts of the two plants, as was done for Activity 4 in Chapter 4, where we studied transpiration in plants.

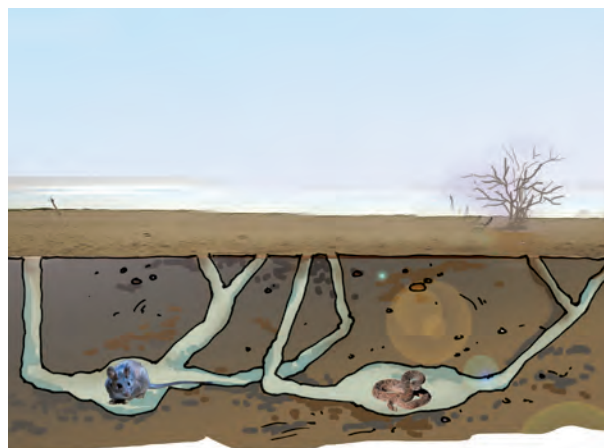


Fig. 6.4 Desert animals in burrows



Fig. 6.5 Some typical plants that grow in desert

Leave the potted plants in the sun and observe after a few hours. What do you see? Do you notice any difference in the amount of water collected in the two polythene bags?

Desert plants lose very little water through transpiration. The leaves in desert plants are either absent, very small, or they are in the form of spines. This helps in reducing loss of water from the leaves through transpiration. The leaf-like structure you see in a cactus is, in fact, its stem (Fig. 6.5). Photosynthesis in these plants is usually carried out by the stems. The

stem is also covered with a thick waxy layer, which helps to retain water in the tissues of cacti. Most desert plants have roots that go very deep into the soil for absorbing water.

Mountain regions

These habitats are normally very cold and windy. In some areas, snowfall may take place in winters.

There is a large variety of plants and animals living in the mountain regions. Have you seen the kind of trees shown in Fig. 6.6?



Fig. 6.6 Trees of a mountain habitat

If you live in a mountain region or have visited one, you may have seen a large number of such trees. But, have you ever noticed such trees naturally growing in other regions?

How are these trees adapted to the conditions prevailing in their habitat? These trees are normally cone shaped and have sloping branches. The leaves of some of these trees are needle-like. This helps the rainwater and snow to slide off easily. There could be trees with shapes very different from these that are

also present on mountains. They may have different kind of adaptations to survive on the mountains.

Animals living in the mountain regions are also adapted to the conditions there (Fig. 6.7). They have thick skin or fur to protect them from cold. For example, yaks have long hair to keep them warm. Snow leopard has thick fur on its body



(a)



(b)



(c)

Fig. 6.7 (a) Snow leopard, (b) yak and (c) mountain goat are adapted to mountain habitats

including feet and toes. This protects its feet from the cold when it walks on the snow. The mountain goat has strong hooves for running up the rocky slopes of the mountains.

As we go up in the mountainous regions, the surroundings change and we see different kinds of adaptations at different heights.

Grasslands

A lion lives in a forest or a grassland and is a strong animal that can hunt and kill animals like deer. It is light brown in colour. Look at the picture of a lion and that of a deer (Fig. 6.8). How are the eyes placed in the face for these two animals? Are they in the front or on the side of the face? Lions have long claws in their front legs that can be withdrawn inside the toes. Do the features of a lion help it in any way to



(a)



(b)

Fig. 6.8 (a) Lion and (b) deer

survive? It's light brown colour helps it to hide in dry grasslands when it hunts for **prey** (animals to eat). The eyes in front of the face allow it to have a correct idea about the location of its prey.

A deer is another animal that lives in forests and grasslands. It has strong teeth for chewing hard plant stems of the forest. A deer needs to know about the presence of **predators** (animals like lion that make it their prey) in order to run away from them and not become their prey. It has long ears to hear movements of predators. The eyes on the side of its head allow it to look in all directions for danger. The speed of the deer helps them to run away from the predators.

There are many other features of a lion, a deer or other animals and plants that help them to survive in their habitat.

Some Aquatic Habitats

Oceans

We already discussed how fish are adapted to live in the sea. Many other sea animals have streamlined bodies to help them move easily in water. There are some sea animals like squids and octopus, which do not have this streamlined shape. They stay deeper in the ocean, near the seabed and catch any prey that moves towards them. However, when they move in water they make their body shapes streamlined. These animals have gills to help them use oxygen dissolved in water.

There are some sea animals like dolphins and whales that do not have

gills. They breathe in air through nostrils or **blowholes** that are located on the upper parts of their heads. This allows them to breathe in air when they swim near the surface of water. They can stay inside the water for a long time without breathing. They come out to the surface from time to time, to breathe in air. Did you ever see this interesting activity of dolphins in television programme or films on ocean life?

Ponds and lakes

Have you seen plants growing in ponds, lakes, rivers and even some drains? Go on a field trip to a nearby pond, if possible, and try to observe the kinds of plants that are seen there. Observe the leaves, stems and roots of these plants.

Some of these plants have their roots fixed in the soil below the water




Fig. 6.9 Some aquatic plants float on water. Some have their roots fixed in the soil at the bottom. Some aquatic plants are submerged in water.

(Fig. 6.9). In terrestrial plants, roots normally play a very important role in the absorption of nutrients and water from the soil. However, in aquatic plants, roots are much reduced in size and their main function is to hold the plant in place.

The stems of these plants are long, hollow and light. The stems grow up to the surface of water while the leaves and flowers, float on the surface of water.

Some aquatic plants are submerged in water. All parts of such plants are under water. Some of these plants have narrow and thin ribbon-like leaves. These can bend in the flowing water. In some submerged plants, leaves are often highly divided, through which the water can easily flow without damaging them.

Frogs usually live in ponds. Frogs can stay both inside the water as well as move on land. They have strong back legs that help them in leaping and catching their prey. They have webbed feet which help them swim in water.

We have discussed only a few common animals and plants compared to the wide variety that live in different habitats. You may have also noticed the very wide variety in plants around you, when you prepared a herbarium as part of the suggested activities in Chapter 4. Imagine the kind of variety that you could see in a herbarium of leaves of plants from all regions of the Earth!

6.4 CHARACTERISTICS OF ORGANISMS

We went on a journey through different habitats and discussed many plants and

animals. In Activity 1, we listed objects, plants and animals found in different surroundings. Suppose we stop a while and think which examples in our list are living? Let us think of examples from a forest. Trees, creepers, small and big animals, birds, snakes, insects, rocks, soil, water, air, dry leaves, dead animals, mushrooms and moss may be only some of the objects that are present in the forest. Which of these are living?

Think of objects that you can see around you at this moment and group them as living and non-living. In some cases, it is easy for us to know. For example, we know that objects like chair or table are not alive. Paheli was reading this rhyme from *Complete Nonsense* written by Edward Lear:



Said the Table to the Chair,
'You can hardly be aware,
'How I suffer from the heat,
'And from chilblains on my feet!
'If we took a little walk,
'We might have a little talk!
'Pray let us take the air!
Said the Table to the Chair,
Said the Chair to the table,
'Now you know we are not able!
'How foolishly you talk,
'When you know we *cannot* walk!
Said the Table with a sigh,
'It can do no harm to try,
'I've as many legs as you,
'Why can't we walk on two?'

Paheli and Boojho found the poem very funny, because they knew that a chair or a table is not alive and it cannot talk or walk.

Chair, table, stone or a coin are not alive. Similarly, we do know that we are alive and so are all the people of the world. We also see animals around us that are so full of life — dogs, cats, monkeys, squirrels, insects and many others.

How do we know that something is living? Often, it is not so easy to decide. We are told that plants are living, but they do not move like a dog or a pigeon. On the other hand, a car or a bus can move, still we consider them as non-living. Plants and animals appear to grow in size with time. But then, at times, clouds in the sky also seem to grow in size. Does it mean that clouds are living? No! So, how does one distinguish between living and non-living things? Do living things have some common characteristics that make them very different from the non-living?

You are a wonderful example of a living being. What characteristics do you have which make you different from a non-living thing? List a few of these characteristics in your notebook. Look at your list and mark those characteristics that you have listed, which may also be found in animals or plants.

Some of these characteristics are perhaps common to all living things.

Do all organisms need food?

Earlier, we learnt that all living things need food and how essential it is to animals and to us. We have also learnt that plants make their own food by the process of photosynthesis. Animals depend on plants or other animals for their food.

Food gives organisms the energy needed for them to grow. Organisms also need energy for other life processes that go on inside them.

Do all organisms show growth?

Does the *kurta* you had four years back, still fit you? You cannot wear it any more, isn't it? You must have grown taller during these years. You may not realise it, but you are growing all the time and in few more years you will become an adult. (Fig. 6.10).

Young ones of animals also grow into adults. You would surely have



Fig. 6.10 A baby grows into an adult

noticed pups grow into adults. A chick hatched from an egg, grows into a hen or a cock. (Fig. 6.11).

Plants also grow. Look around you and see a few plants of a particular type. Some are very small and young, some are bigger. They may all be in different stages of growth. Look at the plants after a few days and weeks. You may find that some of them have grown in size. Growth seems to be common to all living things.

Do you think, non-living things show growth?

Do all organisms respire?

Can we live without breathing? When we inhale, the air moves from outside to the inside of our body. When we breathe out, the air moves from inside our body to outside. Breathing is part of a process called **respiration**. In respiration, some of the oxygen of the air we breathe in, is used by the body. We breathe out carbon dioxide produced in this process.

The process of breathing in animals like cows, buffaloes, dogs or cats is similar to humans. Observe any one of these animals while they are taking rest, and notice the movement of their abdomen. This slow movement indicates that they are breathing.



Fig. 6.11 A chicken grows into an adult

Respiration is necessary for all living organisms. It is through respiration that the body finally obtains energy from the food it takes.

Some animals may have different mechanisms for the exchange of gases, which is a part of the respiration process. For example, earthworms breathe through their skin. Fish, we have learnt, have gills for using oxygen dissolved in water. The gills absorb oxygen from the air dissolved in water.

Do plants also respire? Exchange of gases in plants mainly takes place through leaves. The leaves take in air through tiny pores in them and use the oxygen. They give out carbon dioxide to the air.

We learnt that in sunlight, plants use carbon dioxide to produce food and give out oxygen. The amount of oxygen released in the process of food preparation by plants is much more than the oxygen they use in respiration. Respiration in plants takes place day and night.

Do all organisms respond to stimuli?

How do you respond, if you suddenly step on a sharp object like a thorn, while walking barefoot? How do you feel when you see or think about your favourite food? You suddenly move from a dark place into bright sunlight. What happens? Your eyes shut themselves automatically for a moment till they adjust to the changed bright

surroundings. Your favourite food, bright light and a thorn, in the above situations are some examples of changes in your surroundings. All of us respond immediately to such changes. Changes in our surroundings that makes us respond to them, are called **stimuli**.

Do other animals also respond to stimuli? Observe the behaviour of animals, when food is served to them. Do you find them suddenly becoming active on seeing the food? When you move towards a bird, what does it do? Wild animals run away when bright light is flashed towards them. Similarly, cockroaches begin to move to their hiding places if the light in the kitchen is switched on at night. Can you give some more examples of responses of animals to stimuli?

Do plants also respond to stimuli? Flowers of some plants bloom only at night. In some plants flowers close after sunset. In some plants like Mimosa, commonly known as 'touch-me-not', leaves close or fold when someone touches them. These are some examples of responses of plants towards changes in their surroundings.

Activity 4

Place a potted plant in a room a little away from a window through which sunlight enters some time during the day (Fig. 6.12). Continue watering the plant for a few days. Does the plant grow upright, like plants out in the open? Note the direction in which it bends, if



Fig. 6.12 Plant respond to light

it is not growing upright. Do you think, this may be in response to some stimulus?

All living things respond to changes around them.

Living organisms and excretion

All organisms need food. Not all the food that is eaten is completely used, only a part of it is utilised by the body. What happens to the rest? This has to be removed from the body as wastes. Our body produces some wastes in other life processes also. The process of getting rid of wastes by organisms is known as **excretion**.

Do plants also excrete? They do, but not as seen in animals. The mechanisms in plants are a little different. Some plants find it possible to store the waste products within their parts in a way that they do not harm the plant as a whole. Some plants remove waste products as secretions.

Excretion is another characteristic common to all organisms.



Do all organisms reproduce their own kind?

Have you ever seen nests of some birds like pigeons? Many birds lay their eggs in the nest. Some of the eggs hatch and young birds come out of them (Fig. 6.13).



Fig. 6.13 (a) Birds lay eggs which after hatching produce (b) young ones

Animals **reproduce** their own kind. The mode of reproduction may be different, in different animals. Some animals produce their young ones through eggs. Some animals give birth to the young ones (Fig. 6.14).

Plants also reproduce. Like animals, plants also differ in their mode of reproduction. Many plants reproduce through seeds. Plants produce seeds,



Fig. 6.14 Some animals which give birth to their young ones




Fig. 6.15 A seed from a plant germinates into a new plant

which can germinate and grow into new plants (Fig.6.15).

Some plants also reproduce through parts other than seeds. For example, a part of a potato with a bud, grows into a new plant (Fig. 6.16).



Fig. 6.16 A new plant grows from a bud of potato

Plants also reproduce through cuttings. Would you like to grow a plant in this way yourself?

Activity 5

Take a cutting from a rose or a *menhdi* plant. Fix it in the soil and water it regularly. What do you observe, after a few days?

It may not be easy to grow plants from cuttings. Do not be disappointed if your cutting does not grow. Talk to a gardener, if possible, on the care to be given to cuttings to make them grow into plants.

Living things produce more of their own kind through **reproduction**. It takes place in many different ways, for different organisms.

Do all organisms move?

In Chapter 6, we discussed the various ways in which animals move. They move from one place to another and also show other body movements.

What about plants? Do they also move? Plants are generally anchored in soil so they do not move from one place to another. However, various substances like water, minerals and the food synthesised by them move from one part of the plant to other. Have you noticed any other kind of movement in plants? Opening or closing of flowers? Do you recall how some plants show movement in response to certain stimuli?

We also have some non-living things moving, of course. A bus, car, a small piece of paper, clouds and so on. Is there something different in these movements from the movements of living beings?

There is such a variety of living organisms, but, all of them show some common characteristics, as we have discussed. Yet another common characteristic is that living beings die. Because organisms die, particular types of organisms can survive over thousands of years only if they reproduce their own kind. One single organism may die without ever reproducing, but, the type of organism can exist only if there is reproduction.

We see that, all living things seem to have some common characteristics. They all need food, respire, respond to stimuli, reproduce, show movement, grow and die.

Do we find some non-living things that also show some of these characteristics? Cars, bicycle, clocks and the water in the river move. The moon moves in the sky. A cloud grows in size right in front of our eyes. Can such things be called living? We ask ourselves, do these objects also show **all** the other characteristics of living things?

In general, something that is living may have all the characteristics that we have discussed, while non-living things may not show all these characteristics at the same time.

Is this always true? Do we always find that living things definitely show all the characteristics of the living that we have discussed? Do we always find that non-living things may show only some of these characteristics and never all of them?

To understand this a little better, let us look at a specific example. Consider any seed, say, *moong*. Is it living? It can

stay in a shop for months and not show any growth or some of the other characteristics of life. However, we bring the same seed and plant it in soil, water it and it turns into a whole plant. Did the seed — need food, did it excrete, grow or reproduce when it was in the shop for many months?

We see that there can be cases when we cannot easily say that a thing has all the characteristics that we have discussed, for it to be called living.

“What then is life?”

Push your hand deep inside a sack of wheat. Do you find it is warm inside? There is some heat being produced inside the sack of wheat. The seeds respire and in that process give out some heat.

We see that respiration is a process that takes place in seeds even when some of the other life processes may not be very active.

It may not be very easy to answer our question — “what then is life”? However, looking at all the diversity of living beings around us, we can conclude that **“life is beautiful”!**

Key words

Adaptation	Habitat
Aquatic habitat	Living
Biotic component	Reproduction
Excretion	Respiration
Growth	Stimulus



Summary


- The surroundings where plants and animals live, is called their habitat.
- Several kinds of plants and animals may share the same habitat.
- The presence of specific features and habits, which enable a plant or an animal to live in a particular habitat, is called adaptation.
- There are many types of habitats, however, these may be broadly grouped as terrestrial (on the land) and aquatic (in water).
- There is a wide variety of organisms present in different habitats.
- Plants, animals and microorganisms together constitute biotic components.
- Rocks, soil, air, water, light and temperature are some of the abiotic components of our surroundings.
- Living things have certain common characteristics — they need food, they respire and, excrete, respond to their environment, reproduce, grow and show movement.

Exercises

1. What is a habitat?
2. How are cactus adapted to survive in a desert?
3. Fill up the blanks
 - (a) The presence of specific features, which enable a plant or an animal to live in a particular habitat, is called _____.
 - (b) The habitats of the plants and animals that live on land are called _____ habitat.
 - (c) The habitats of plants and animals that live in water are called _____ habitat.
 - (d) Soil, water and air are the _____ factors of a habitat.
 - (e) Changes in our surroundings that make us respond to them, are called _____.
4. Which of the things in the following list are nonliving?
Plough, Mushroom, Sewing machine, Radio, Boat, Water hyacinth, Earthworm
5. Give an example of a non-living thing, which shows any two characteristics of living things.
6. Which of the non-living things listed below, were once part of a living thing?
Butter, Leather, Soil, Wool, Electric bulb, Cooking oil, Salt, Apple, Rubber
7. List the common characteristics of the living things.
8. Explain, why speed is important for survival in the grasslands for animals that live there. (Hint: There are few trees or places for animals to hide in grasslands habitats.)

SUGGESTED PROJECTS AND ACTIVITIES

1. Many magazines and newspapers talk about possibility of life outside the Earth. Read these articles and have a discussion in the class about what could be defined as life outside Earth.
2. Visit a local zoo and find out what special arrangements are made for the animals that have been brought there from different habitats.
3. Find out where are the habitats of the polar bear and the penguin. For each animal, explain two ways in which it is well adapted to its habitat.
4. Find out which animals live in the foot-hills of the Himalayas. Find out if the types and varieties of animals and plants changes as one goes higher into the mountain regions of the Himalayas.
5. Make a habitat album. Try to obtain pictures of animals and plants that you have listed in Activity 1 and paste these under different habitat sections in the album. Draw the leaf shapes and structures for trees found in these different regions and include these in the album. In addition, draw the patterns of branching found in trees of these different regions and include these also in the album.



7

Motion and Measurement of Distances



0652CH10

There was a general discussion among the children in Paheli and Boojho's class about the places they had visited during the summer vacations. Someone had gone to their native village by a train, then a bus, and finally a bullock cart. One student had travelled by an aeroplane. Another spent many days of his holidays going on fishing trips in his uncle's boat.

The teacher then asked them to read newspaper articles that mentioned about small wheeled vehicles that moved on the soil of Mars and conducted experiments. These vehicles were taken by spacecraft all the way to Mars!

Meanwhile, Paheli had been reading stories about ancient India and wanted to know how people travelled from one place to another in earlier times.

7.1 STORY OF TRANSPORT

Long ago people did not have any means of transport. They used to move only on foot and carry goods on their back. Later on they began to use animals for transportation.

For transport through water, routes, boats were used from ancient times. To begin with, boats were simple logs of wood in which a hollow cavity could be made. Later, people learnt to put together different pieces of wood and give shapes to the boats. These shapes

imitated the shapes of the animals living in water. Recall our discussions of this streamlined shape of fish in Chapters 5 and 6.

Invention of the wheel made a great change in modes of transport. The design of the wheel was improved over thousands of years. Animals were used to pull carts that moved on wheels.

Until the beginning of the 19th century, people still depended on animals, boats and ships to transport them from place to place. The invention of steam engine led to the development of new means of transport. Railroads were made for steam engine driven carriages and wagons. Later came




Fig. 7.1 Some means of transportation

automobiles such as motor cars, trucks and buses. Motorised boats and ships were used as means of transport on water. The early years of 1900 saw the development of aeroplanes. These were later improved to carry passengers and goods. Electric trains, monorail, supersonic aeroplanes and spacecraft are some of the contributions of the 20th century.

Fig. 7.1 shows some of the different modes of transport. Place them in the correct order — from the earliest modes of transport to the most recent.

Are there any of the early modes of transport that are not in use today?

7.2 HOW WIDE IS THIS DESK?

How did people know how far they have travelled?

How will you know whether you can walk all the way to your school or whether you will need to take a bus or a rickshaw to reach your school? When you need to purchase something, is it possible for you to walk to the market? How will you know the answers to these questions?

It is often important to know how far a place is, so that we can have an idea how we are going to reach that place — walk, take a bus or a train, a ship, an aeroplane or even a spacecraft!

Sometimes, there are objects whose length or width we need to know.

In Paheli and Boojho's classroom, there are large desks which are to be shared by two students. Paheli and Boojho share one desk, but, frequently end up objecting that the other is using a larger share of the desk.

On the teacher's suggestion, they decided to measure the length of the desk, make a mark exactly in the middle of it and draw a line to separate the two halves of the desk.

Both Paheli and Boojho are very fond of playing *gilli danda* with their friends. Boojho brought a set of *gilli* and *danda* with him.

Here is how they tried to measure the length of the desk using the *danda* and the *gilli* (Fig. 7.2).

The desk seems to be having a length equal to two *danda* lengths and two lengths of the *gilli*. Drawing a line in the middle of the desk leaves each of them happy with a half of the desk equal to a *danda* and a *gilli* in length. After a few days, the marked line gets wiped out. Boojho now has a new set of *gilli* and *danda* as he lost his old one. Here is how, the length of the desk seems to measure using the *gilli* and *danda* (Fig. 7.3).



Fig. 7.2 Measuring the length of a desk with *gilli* and *danda*



Fig. 7.3 Measuring the length of the desk with a different set of *gilli* and *danda*

Hello! Now, when measured with the new set of *gilli* and *danda*, the desk length seems to be about two *danda* lengths, one *gilli* length with a small length still left out. This is less than one *gilli* length. Now what?

What would you suggest Paheli and Boojho do, to measure the length of the whole desk? Can they use a cricket wicket and bails to measure the length or do you think that this might create the similar problem?

One thing they could do is to take a small length of string and mark two points on it. This will be a string length. They can measure the width of the desk in string lengths (Fig. 7.4). How can they use the string to measure distances less than the length of a string? They can fold the string and mark it into $\frac{1}{2}$, $\frac{1}{4}$ and $\frac{1}{8}$ 'string lengths'. Now, perhaps Paheli and Boojho can measure the exact length of the desk using the string.

You would say that they should use the scale in their geometry box and solve their problem? Yes, Of course!

Boojho has been reading about the way people used to measure distances



Fig. 7.4 Measuring the length of the desk with string lengths

before such standard scales were made and he has been trying to follow different methods of measuring distances.

There are so many occasions when we come across a need to measure lengths and distances. The tailor needs to measure the length of the cloth to know if it is enough to stitch a *kurta*. A carpenter needs to measure the height and width of a cupboard to know how much wood he would need to make its door. The farmer needs to know the length and breadth or the area of his land to know how much seed he can sow and how much water would be needed for his crops.

Suppose, you are asked how tall you are? You want to tell the length of a straight line from the top of your head to the heel of your feet.

How long is this room?

How wide is this desk?

How far is it from Delhi to Lucknow?

How far away is the Moon from the Earth?

All these questions have one thing in common. They all concern distance between two places. The two places may be close enough, like the two ends of a table or they may be far apart, like Jammu and Kanyakumari.

Let us do a few measurements to see what exactly we need to do, when we measure distances or lengths.

7.3 SOME MEASUREMENTS

Activity 1

Work in groups and each of you do this activity one by one. Using your foot as a

unit of length, measure the length and breadth of the classroom. It is possible that while measuring these you may find some part remains to be measured as it is smaller than your foot. Use a string to measure the length of a part of your foot as you did before. Record your observations in Table 7.1.

Table 7.1 Measuring length and breadth of classroom

Name of student	Length of the classroom	Width of the classroom

Activity 2

Work in a group and each of you use your handspan as a unit to measure the width of a table or a desk in the classroom (Fig. 7.5).



Fig. 7.5 Measuring the width of a table with a handspan

Here too, you may find that you need string lengths equal to your handspan and then fractions of this string length to make the measurement. Record all observations in Table 7.2.

We see that, measurement means the comparison of an unknown quantity

Table 7.2 Measuring width of a table

Who measured the width of the table?	Number of handspans

with some known quantity. This known fixed quantity is called a **unit**. The result of a measurement is expressed in two parts. One part is a number. The other part is the unit of the measurement. For example, if in Activity 1, the length of the room is found to be 12 lengths of your foot, then 12 is the number and 'foot length' is the unit selected for the measurement.

Now, study all the measurements recorded in Table 7.1 and 7.2. Are all the measurements for the room using everybody's foot, equal? Are everybody's measurement, by handspan, of the width of the table equal? Perhaps the results could be different as the length of your handspan and that of your friends may not be the same. Similarly, the length of the foot may be slightly different for all the students. Therefore, when you tell your measurement using your handspan or length of foot as a unit to others, they will not be able to understand how big the actual length is, unless they know the length of your handspan or foot.

We see therefore, that some standard units of measurement are needed, that do not change from person to person.

7.4 STANDARD UNITS OF MEASUREMENTS

In ancient times, the length of a foot, the width of a finger, and the distance of a step were commonly used as different units of measurements.

The people of the Indus valley civilisation must have used very good measurements of length because we see evidence in excavations of perfectly geometrical constructions.

A cubit as the length from the elbow to the finger tips was used in ancient Egypt and was also accepted as a unit of length in other parts of the world.

People also used the "foot" as a unit of length in different parts of the world. The length of the foot used varied slightly from region to region.

People measured a "yard" of cloth by the distance between the end of the outstretched arm and their chin. The Romans measured with their pace or steps.

In ancient India, small length measurements used were an *angul* (finger) or a *mutthi* (fist). Even today, we can see flower sellers using their forearm as a unit of length for garlands in many towns of India. Many such body parts continue to be in use as unit of length, when convenient.

However, everyone's body parts could be of slightly different sizes. This must

have caused confusion in measurement. In 1790, the French created a standard unit of measurement called the metric system.

For the sake of uniformity, scientists all over the world have accepted a set of standard units of measurement. The system of units now used is known as the International System of Units (SI units). The SI unit of length is a metre. A metre scale is shown in Fig. 7.6. Also shown is the 15 cm scale in your geometry box.

Each metre (m) is divided into 100 equal divisions, called centimetre (cm). Each centimetre has ten equal divisions, called millimetre (mm). Thus,

$$1 \text{ m} = 100 \text{ cm}$$

$$1 \text{ cm} = 10 \text{ mm}$$

For measuring large distances, metre is not a convenient unit. We define a larger unit of length. It is called kilometre (km).

$$1 \text{ km} = 1000 \text{ m}$$

Now, we can repeat all our measurement activities using a standard scale and measure in SI units. Before we do that, we do need to know the correct way of measuring lengths and distances.

7.5 CORRECT MEASUREMENT OF LENGTH

In our daily life we use various types of measuring devices. We use a metre scale




Fig. 7.6 A metre scale and a 15 cm scale

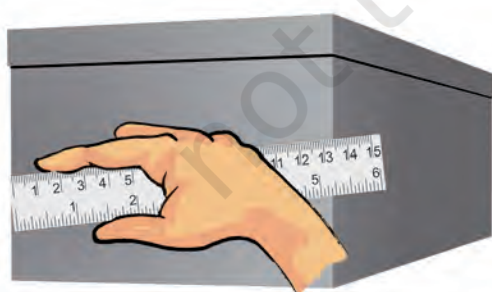
for measuring length. A tailor uses a tape, whereas a cloth merchant uses a metre rod. For measuring the length of an object, you must choose a suitable device. You cannot measure the girth of a tree or the size of your chest using a metre scale, for instance. Measuring tape is more suitable for this. For small measurements, such as the length of your pencil, you can use a 15 cm scale from your geometry box.

In taking measurement of a length, we need to take care of the following:

1. Place the scale in contact with the object along its length as shown in Fig. 7.7.
2. In some scales, the ends may be broken. You may not be able to see the zero mark clearly (Fig.7.8 (a)). In such cases, you should avoid taking




(a)




(b)

Fig. 7.7 Method of placing the scale along the length to be measured (a) correct and (b) incorrect

measurements from the zero mark of the scale. You can use any other full mark of the scale, say, 1.0 cm [Fig.7.8 (b)]. Then you must subtract the reading of this mark from the reading at the other end. For example, in Fig.7.8 (b) the reading at one end is 1.0 cm and at the other end it is 14.3 cm. Therefore, the length of the object is $(14.3 - 1.0) \text{ cm} = 13.3 \text{ cm}$.



(a)



(b)

Fig. 7.8 (a) Incorrect and (b) correct method of placing the scale with broken edge

3. Correct position of the eye is also important for taking measurement. Your eye must be exactly in front of the point where the measurement is to be taken as shown in Fig.7.9. Position 'B' is the correct position of the eye. Note that from position 'B', the reading is 7.5 cm. From positions 'A' and 'C', the readings may be different.

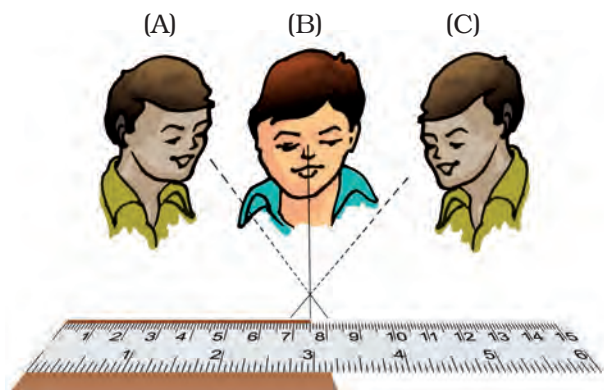


Fig. 7.9 B is the proper position of the eye for taking reading of the scale

Activity 3

Measure the height of your classmate using hand span and then by using a metre scale. For this, ask your classmate to stand with his back against a wall. Make a mark on the wall exactly above his head. Now, measure the distance from the floor to this mark on the wall with your handspan and then with a metre scale. Let all other students measure this length in a similar way. Record all observations in Table 7.3.

Table 7.3 Measurement of height

Who measured the height?	Height in handspans	Height in cm

Study carefully results obtained by different students. The results in column 2 may be different from each other as the length of the handspan may be different for different students. Look

at the results in column 3 where the measurements are done using a standard scale. The results may be close to each other now, but, are they exactly equal? If not, why do you think there is a difference? After all, everybody is using the same scale and not different hand spans. This could be due to small errors in taking observations. In higher classes we will learn about the importance of knowing and handling such errors in measurement.

7.6 MEASURING THE LENGTH OF A CURVED LINE

We cannot measure the length of a curved line directly by using a metre scale. We can use a thread to measure the length of a curved line.

Activity 4

Use a thread to measure the length of the curved line AB (Fig. 7.10). Put a knot on the thread near one of its ends. Place this knot on the point A. Now, place a small portion of the thread along the line, keeping it taut using your fingers and thumb. Hold the thread at this end point with one hand. Using the other hand, stretch a little more portion of the thread along the curved line. Go



Fig. 7.10 Measuring the length of a curved line with a thread

on repeating this process till the other end B of the curved line is reached. Make a mark on the thread where it touches the end B. Now stretch the thread along a metre scale. Measure the length between the knot in the beginning and the final mark on the thread. This gives the length of the curved line AB.

We see that we need a lot of care to ensure that we are measuring distances and lengths correctly. And, we need some standard units and devices with which we measure these distances and can convey our results to others.

7.7 MOVING THINGS AROUND US

Activity 5

Think of some objects you have seen recently. List them in Table 7.4. These may include a school bag, a mosquito, a table, people sitting on chairs or people moving about. The list may also have a butterfly, a dog, a cow, your hands, a small baby, a fish in water, a house, a factory, a piece of stone, a horse, a ball, a bat, a moving train, a sewing machine, a wall clock or the hands of a clock. Make your list as large as you can.

Which of these are moving? Which are at rest?

Table 7. 4 Objects at rest and in motion

Objects at rest	Objects in motion
House	A flying bird
Table	Second's hand of the clock
Clock	

How did you decide whether an object is in motion or at rest?

You might have noticed that the bird is not at the same place after some time, while the table is at the same place. On this basis, you may have decided whether an object is at rest or in motion.

Let us look at the motion of an ant closely.

Activity 6

Select a place where you find ants. Spread a large sheet of white paper on the ground and keep a little sugar on it. Ants are likely to be attracted to the sugar and you will find many ants crawling on the sheet of paper soon. For any one ant, try and make a small mark with a pencil near its position when it has just crawled on to the sheet of paper (Fig. 7.11). Keep marking its position after a few seconds as it moves along on the sheet of paper. After some time, shake the paper free of the sugar and the ants. Connect the different points you have marked, with arrows, to show the direction in which the ant was



Fig. 7.11 Motion of an ant

moving. Each point you have marked shows where the ant moved to, in intervals of a few seconds.

Motion seems to be some kind of a change in the position of an object with time, isn't it?


In Activity 5, where did you place objects like a clock, a sewing machine or an electric fan in your grouping of objects? Are these objects moving from one place to other? No? Do you notice movement in any of their parts? The blades of the fan or the hands of a clock— how are they moving? Is their movement similar to that of an ant or a train? Let us now look at some types of motion to help us understand these differences.

7.8 TYPES OF MOTION

You may have observed the motion of a vehicle on a straight road, march-past of soldiers in a parade or the falling of a stone (Fig. 7.12). What kind of motion is this? Sprinters in a 100-metre race also move along a straight track. Can you think of more such examples from your surroundings?



Fig. 7.12 Some examples of rectilinear motion



In all these examples we see that the objects move along a straight line. This type of motion is called rectilinear motion.

Activity 7

Take a stone, tie a thread to it and whirl it with your hand. Observe the motion of the stone. We see that the stone moves along a circular path.

In this motion, the distance of the stone from your hand remains the same. This type of motion is called circular motion.

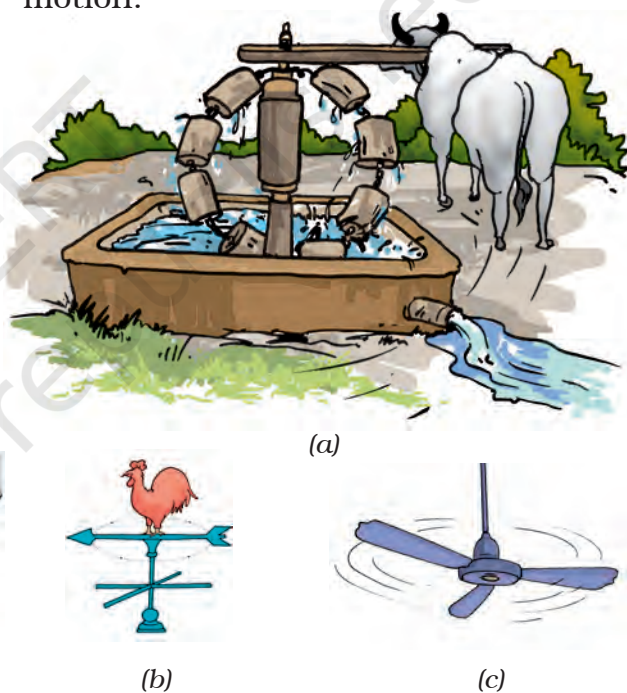



Fig. 7.13 Some objects in circular motion

The motion of a point marked on the blade of an electric fan or the hands of a clock are examples of circular motion (Fig. 7.13).

The electric fan or the clock by themselves are not moving from one place to another. But, the blades of the



fan rotate and so do the hands of a clock. If we mark a point anywhere on the blades of a fan or on the hands of a clock, the distance of this point from the centre of the fan or

the clock, will remain the same as they rotate.

In some cases, an object repeats its motion after some time. This type of motion is called periodic motion. Take the stone tied with a string that you used in Activity 7. Now, hold the string in your hand and let the stone hang from it. This is a pendulum. Pull the stone to one side with the other hand and let it go. Now the pendulum is in motion. It is an example of periodic motion. A branch of a tree moving to and fro, motion of a child on a swing, strings of a guitar or the membrane of drums (*tabla*) being played, are all examples of periodic motion where an



(a)



(b)



(c)



(d)



(e)

Fig. 7.14 Examples of periodic motion

object or a part of it repeats its motion after a fixed interval of time (Fig. 7.14).

Did you observe a sewing machine as a part of Activity 5? You must have observed that it remains at the same location while any point on its wheel moves with a circular motion. It also has a needle that moves up and down continuously, as long as the wheel rotates, isn't it? This needle is undergoing a periodic motion.

Have you observed closely, the motion of a ball along the ground? Here,

Boojho is not sure why we say that the distance of the stone from your hand is the same when we whirl it around. Can you help him understand this? Remember that the stone is held with a string.



the ball is rolling on the ground – rotating as well as moving forward along the ground. Thus, the ball undergoes a rectilinear motion as well as rotational motion. Can you think of other examples where objects undergo combinations of different types of motion?

We did many measurement activities and discussed some kinds of motion. We saw that motion is a change in the

position of an object with time. The change in this position can be determined through distance measurements. This allows us to know how fast or slow a motion is. The movement of a snail on the ground, a butterfly flitting from flower to flower, a river flowing, an aeroplane flying, moon going around the Earth and blood flowing inside our bodies show that there is motion everywhere around us!

Key words

Circular motion

Distance

Measurement

Motion

Periodic motion

Rectilinear motion

SI units

Units of measurement



Summary

- Different modes of transport are used to go from one place to another.
- In ancient times, people used length of a foot, the width of a finger, the distance of a step as units of measurement. This caused confusion and a need to develop a uniform system of measurement arose.
- Now, we use International System of Units (SI units). This is accepted all over the world.
- Metre is the unit of length in SI unit.

- Motion in a straight line is called rectilinear motion.
- In circular motion an object moves such that its distance from a fixed point remains the same.
- Motion that repeats itself after some period of time is called periodic motion.

Exercises

1. Give two examples each, of modes of transport used on land, water and air.
2. Fill in the blanks:
 - (i) One metre is _____ cm.
 - (ii) Five kilometre is _____ m.
 - (iii) Motion of a child on a swing is _____.
 - (iv) Motion of the needle of a sewing machine is _____.
 - (v) Motion of wheel of a bicycle is _____.
3. Why can a pace or a footstep not be used as a standard unit of length?
4. Arrange the following lengths in their increasing magnitude:
1 metre, 1 centimetre, 1 kilometre, 1 millimetre.
5. The height of a person is 1.65 m. Express it into cm and mm.
6. The distance between Radha's home and her school is 3250 m. Express this distance into km.
7. While measuring the length of a knitting needle, the reading of the scale at one end is 3.0 cm and at the other end is 33.1 cm. What is the length of the needle?
8. Write the similarities and differences between the motion of a bicycle and a ceiling fan that has been switched on.
9. Why would you not like to use a measuring tape made of an elastic material like rubber to measure distance? What would be some of the problems you would meet in telling someone about a distance you measured with such a tape?
10. Give two examples of periodic motion.

SUGGESTED PROJECTS AND ACTIVITIES

1. Draw a map of your classroom. Roll a ball on the floor. In your map mark the points where the ball started and where it stopped. Show also the path it moved along. Did the ball move along a straight line?
2. Using string and a scale, let each student measure the length of his/her foot. Prepare a bar graph of the foot length measurements that have been obtained for the whole class.

8

Light, Shadows and Reflections



0652CH11

We see so many objects around us. On the way to school we see things like buses, cars, cycles, trees, animals and sometimes flowers. How do you think, we see objects?

Think of the same places at night time if it were completely dark. What will you see? Suppose you go inside a completely dark room. Are you able to see any objects in the room?

But, when you light a candle or a torch you can see the objects present in the room, isn't it? Without light, things cannot be seen. Light helps us see objects.

The torch bulb is an object that gives out light of its own. The Sun, is another familiar object that gives its own light. During the day, its light allows us to see objects. Objects like the sun that give out or emit light of their own are called **luminous** objects.

What about objects like a chair, a painting or a shoe? We see these when light from a luminous object (like the Sun, a torch or an electric light) falls on these and then travels towards our eye.

8.1 TRANSPARENT, OPAQUE AND TRANSLUCENT OBJECTS

Recall our grouping objects as opaque, transparent or translucent, in Chapter 2. If we cannot see through an object at

all, it is an **opaque** object. If you are able to see clearly through an object, it is allowing light to pass through it and is **transparent**. There are some objects through which we can see, but not very clearly. Such objects are known as **translucent**.

Activity 1

Look around yourself and collect as many objects as you can — an eraser, plastic scale, pen, pencil, notebook, single sheet of paper, tracing paper or a piece of cloth. Try to look at something far away, through each of these objects (Fig. 8.1). Is light from a far away object able to travel to your eye, through any of the objects?

Record your observations in a table as shown in Table 8.1.

We see that a given object or material could be transparent, translucent or



Fig. 8.1 Observing objects that do or do not allow light to pass through them

Table 8.1

Object/material	View through the object possible (fully/ partially/ not at all)	Object is opaque/ transparent/ translucent
Pencil		
Rubber ball		
Sheet of writing paper	Not very sure?	

opaque depending on whether it allows light to pass through it completely, partially or not at all.

8.2 WHAT EXACTLY ARE SHADOWS?

Activity 2

Now, one by one hold each of the opaque objects in the sunlight, slightly above the ground. What do you see on the ground? You know that the dark patch formed by each on the ground is due to its shadow. Sometimes you can identify the object by looking at its shadow (Fig. 8.2).

Spread a sheet of paper on the ground. Hold a familiar opaque object at some height, so that its shadow is formed on the sheet of paper on the ground. Ask one of your friends to draw



Fig. 8.2 Sometimes shadow of an object gives an idea about its shape

the outline of the shadow while you are holding the object. Draw outlines of the shadows of other objects in a similar way.

Now, ask some other friends to identify the objects from these outlines of shadows. How many objects are they able to identify correctly?

Do you observe your shadow in a dark room or at night when there is no light? Do you observe a shadow when there is just a source of light and nothing else, in a room? It seems we need a source of light and an opaque object, to see a shadow. Is there anything else required?

Activity 3

This is an activity that you will have to do in the dark. In the evening, go out in an open ground with a few friends. Take a torch and a large sheet of cardboard with you. Hold the torch close to the ground and shine it upwards so that its light falls on your friend's face. You now have a source of light that is falling on an opaque object. If there were no trees, building or any other object behind your friend, would you see the shadow of your friend's head? This does not mean



Fig. 8.3 A shadow is obtained only on a screen

that there is no shadow. After all, the light from the torch is not able to pass through his body to the other side.

Now, ask another friend to hold the cardboard sheet behind your friend. Is the shadow now seen on the cardboard sheet (Fig. 8.3)?

Thus, the shadow can be seen only on a screen. The ground, walls of a room,




Fig. 8.4 Shadows of animals hidden in your hand

a building, or other such surfaces act as a screen for the shadows you observe in everyday life.

Shadows give us some information about shapes of objects. Sometimes, shadows can also mislead us about the shape of the object. In Fig. 8.4 are a few shadows that we can create with our hands and make-believe that they are shadows of different animals. Have fun!

Activity 4

Place a chair in the school ground on a sunny day. What do you observe from the shadow of the chair?

Does the shadow give an accurate picture of the shape of the chair? If the chair is turned around a little, how does the shape of the shadow change?

Take a thin notebook and look at its shadow. Then, take a rectangular box and look at its shadow. Do the two shadows seem to have a similar shape?

Take flowers or other objects of different colours and look at their shadows. A red rose and a yellow rose, for instance. Do the shadows look different in colour, when the colours of the objects are different?

Take a long box and look at its shadow on the ground. When you move the box around, you may see that the size of the shadow changes. When is the shadow of the box the shortest, when the long side of the box is pointed towards the Sun or when the short side is pointing towards the Sun?

Let us use this long box, to prepare a simple camera.

8.3 A PINHOLE CAMERA

You might think that we need a lot of stuff to make a camera? Not really. If we just wish to make a simple pin hole camera.

Activity 5

Take two boxes of cardboard such that one can slide into another with no gap in between them. Cut open one side of each box. On the opposite face of the larger box, make a small hole in the middle [Fig. 8.5 (a)]. In the smaller box, cut out from the middle a square with a side of about 5 to 6 cm. Cover this open square in the box with tracing paper (translucent screen) [Fig. 8.5 (b)]. Slide the smaller box inside the larger one with the hole, in such a way that the side with the tracing paper is inside [Fig. 8.5 (c)]. Your pinhole camera is ready for use.

Holding the pinhole camera look through the open face of the smaller box. You should use a piece of black cloth to cover your head and the pinhole camera. Now, try to look at some distant objects like a tree or a building through the pinhole camera. Make sure that the

objects you wish to look at through your pinhole camera are in bright sun shine. Move the smaller box forward or backward till you get a picture on the tracing paper pasted at the other end.

Are these pinhole images different from their shadows?

Look through your pinhole camera at the vehicles and people moving on the road in bright sunlight.

Do the pictures seen in the camera show the colours of the objects on the other side? Are the images erect or upside down? Surprise, surprise!

Let us now image the Sun, with our pinhole camera. We need a slightly different set up for this. We just need a large sheet of cardboard with a small pinhole in the middle. Hold the sheet up in the Sun and let its shadow fall on a clear area. Do you see a small circular image of the Sun in the middle of the shadow of the cardboard sheet?

Look at these pinhole images of the Sun when an eclipse is visible from your location. Adjust your pinhole and screen to get a clear image before the eclipse is to occur. Look at the image as the eclipse begins. You will notice a part

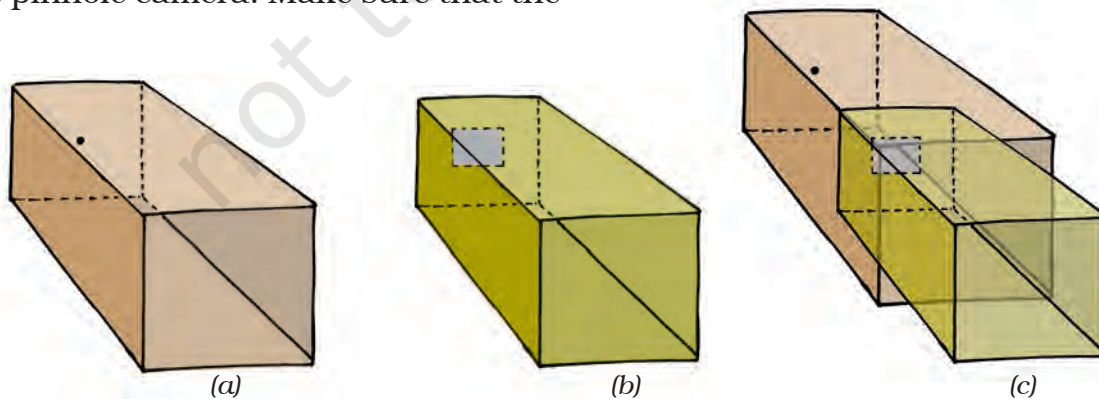


Fig. 8.5 A sliding pin hole camera

of the image of the Sun gradually becoming darker as the eclipse starts. **Never ever look directly at the Sun.** That could be extremely harmful for the eyes.

There is an interesting pinhole camera in nature. Sometimes, when we pass under a tree covered with large number of leaves, we notice small patches of sunlight under it (Fig. 8.6). These circular images are, in fact, pinhole images of the Sun. The gaps between the leaves, act as the pinholes. These gaps are all kinds of irregular shapes, but, we can see circular images of the Sun. Try to locate images of the



Fig. 8.6 A natural pinhole camera. Pinhole images of the Sun under a tree!

Sun when an eclipse occurs next. That could be so much fun!

Boojho has this thought. We saw upside down images of people on the road, with our pinhole camera. What about the images of the Sun? Did we notice them to be upside down or anything like that?

Paheli has another thought. Surely, all these results that we are seeing, formation of shadows and pinhole images are possible only if light moves in a straight path?

Activity 6

Let us use a piece of a pipe or a long rubber tube. Light a candle and fix it on a table at one end of the room. Now standing at the other end of the room look at the candle through the pipe

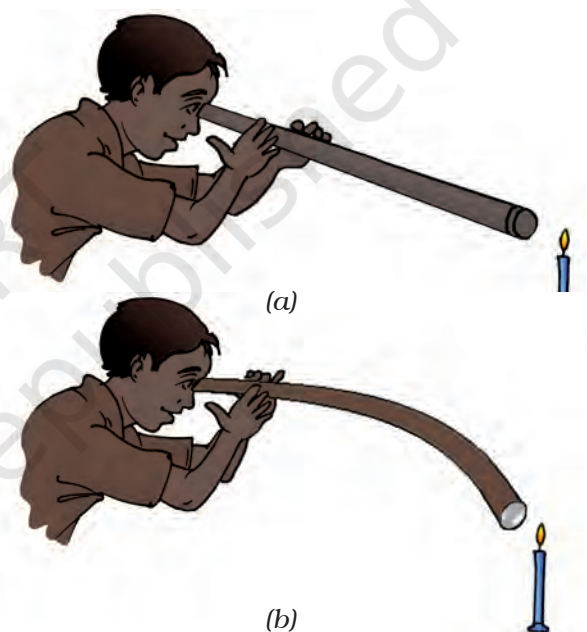


Fig. 8.7 Looking through a pipe pointed (a) towards and (b) a little away from a candle

[Fig. 8.7 (a)]. Is the candle visible? Bend the pipe a little while you are looking at the candle [Fig. 8.7 (b)]. Is the candle visible now? Turn the pipe a little to your right or left. Can you see the candle now?

What do you conclude from this?

This suggests that light travels along a straight line, isn't it? That is why, when opaque objects obstruct it, a shadow forms.

8.4 MIRRORS AND REFLECTIONS

We all use mirrors at home. You look into the mirror and see your own face inside the mirror. What you see is a **reflection** of your face in the mirror. We also see reflections of other objects that are in front of the mirror. Sometimes, we see reflections of trees, buildings and other objects in the water of a pond or a lake.

Activity 7

This activity should be done at night or in a dark room. Ask one of your friends to hold a mirror in his/her hand at one corner of the room. Stand at another corner with a torch in your hand. Cover the glass of torch with your fingers and switch it on. Adjust your fingers with a small gap between them so that you can get a beam of light. Direct the beam of the torch light onto the mirror that your friend is holding. Do you see a patch of light on the other side (Fig. 8.8)? Now,



Fig. 8.8 A mirror reflects a beam of light

adjust the direction of the torch so that the patch of light falls on another friend standing in the room.

This activity suggests that a mirror changes the direction of light that falls on it.

Here is an activity that shows light travelling along straight lines and getting reflected from a mirror.

Activity 8

Fix a comb on one side of a large thermo Col sheet and fix a mirror on the other side as shown in Fig. 8.9. Spread a dark coloured sheet of paper between the mirror and the comb. Keep this in sunlight or send a beam of light from a torch through the comb.

What do you observe? Do you get a pattern similar to that shown in Fig. 8.9?

This activity gives us an idea of the manner in which light travels and gets reflected from a mirror.

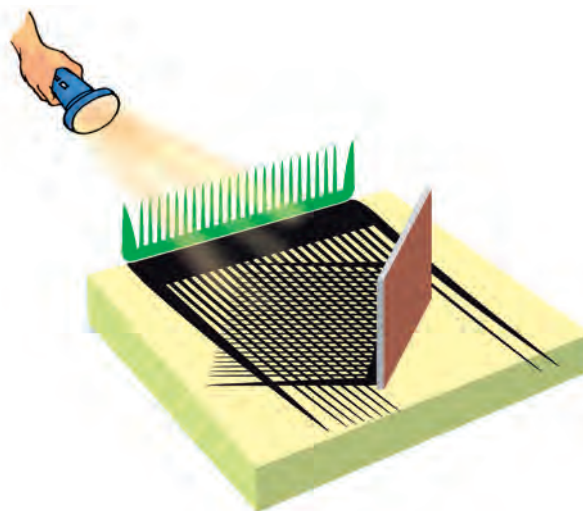


Fig. 8.9 Light travelling in a straight line and getting reflected from a mirror

Key words

Luminous

Mirror

Opaque

Pinhole camera

Reflection

Shadow

Translucent

Transparent



Summary

- Opaque objects do not allow light to pass through them.
- Transparent objects allow light to pass through them and we can see through these objects clearly.
- Translucent objects allow light to pass through them partially.
- Shadows are formed when an opaque object comes in the path of light.
- Pinhole camera can be made with simple materials and can be used to image the Sun and brightly lit objects.
- Light travels in straight line.
- Mirror reflection gives us clear images.

Exercises

1. Rearrange the boxes given below to make a sentence that helps us understand opaque objects.

OWS AKE OPAQ UE O BJEC T SM
SHAD

- Classify the objects or materials given below as opaque, transparent or translucent and luminous or non-luminous:

Air, water, a piece of rock, a sheet of aluminium, a mirror, a wooden board, a sheet of polythene, a CD, smoke, a sheet of plane glass, fog, a piece of red hot iron, an umbrella, a lighted fluorescent tube, a wall, a sheet of carbon paper, the flame of a gas burner, a sheet of cardboard, a lighted torch, a sheet of cellophane, a wire mesh, kerosene stove, sun, firefly, moon.

- Can you think of creating a shape that would give a circular shadow if held in one way and a rectangular shadow if held in another way?
- In a completely dark room, if you hold up a mirror in front of you, will you see a reflection of yourself in the mirror?

SUGGESTED ACTIVITIES

- Make a row of your friends — A, B, C and D, standing in a line. Let one friend stand in front facing them and holding out a mirror towards them (Fig. 8.10).

Now, each person can tell who they are able to see in the Mirror. A,B, C, or D.

If, A is able to see B in the mirror then, can B also see A in the mirror? Similarly, for any two pairs amongst A,B,C, or D?

If A is not able to see B in the mirror, then, is B able to see A in the mirror?

Similarly, for any two pairs amongst A,B,C, or D?



Fig. 8.10

This activity tells us something about the way light travels and gets reflected from mirrors. You will learn more about this in higher classes.

- Daayan-Baayan**—Take a comb in your right hand and bring it up to your hair and look at yourself in the mirror. There is your familiar face, grinning at you 😊

Wait, try and find out which is the hand holding the comb, in your mirror reflection. Is it the right hand or the left? You were holding it in your right hand, isn't it?

While a pinhole camera seems to be giving us upside down images, a mirror seems to be turning right hand into left hand and the left into right hand. We will learn more about this in the higher classes.

3. **Magic Device**—In the chapter on symmetry in your Mathematics textbook, you might have made an interesting device Kaleidoscope, that uses reflections. Now, let us make another device, a periscope, that uses reflections to see around corners! Ask one of your friends to stand in the corridor just outside the entrance to the classroom with a mirror in hand. Ask another friend also holding a mirror, to stand in the middle of classroom in front of the entrance. Now ask your friends to adjust their mirrors in such a way that the image of object on the other side of the corridor becomes visible to you while you are standing inside the class (Fig. 8.11).




Fig. 8.11 Seeing around corners!

You can make a simple periscope by placing two mirrors in a 'Z' shaped box as shown in Fig. 8.12.

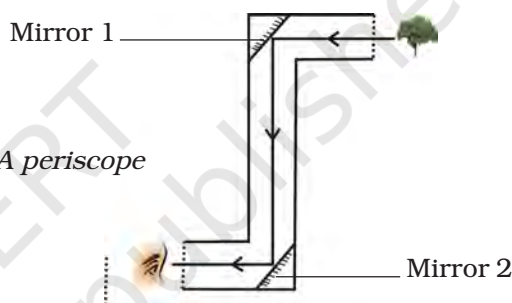


Fig. 8.12 A periscope

THINGS TO THINK ABOUT

1. Opaque objects cast shadows, isn't it? Now, if we hold a transparent object in the Sun, do we see anything on the ground that gives us a hint that we are holding something in our hand?
2. We saw that changing colour of opaque objects does not change the colour of their shadows. What happens if we place an opaque object in coloured light? You can cover the face of a torch with a coloured transparent paper to do this. (Did you ever notice the colours of evening shadows just as the Sun is setting?)

THINGS TO READ

Rudyard Kipling's "*Just So Stories*" and in particular, the story of "*How the Leopard got its spots*" where he mentions stripy, speckly, patchy-blatchy shadows. Here are a few lines from this story, that has a lot of shadows.

...after ever so many days, they saw a great, high, tall forest full of tree trunks all 'sclusively speckled and sprottled and spottled, dotted and splashed and slashed and hatched and cross-hatched with shadows. (Say that quickly aloud, and you will see how very shadowy the forest must have been.)

'What is this,' said the Leopard, 'that is so 'sclusively dark, and yet so full of little pieces of light?'



0652CH12

9

Electricity and Circuits

We use electricity for many purposes to make our tasks easier. For example, we use electricity to operate pumps that lift water from wells or from ground level to the roof top tank. What are other purposes for which you use electricity? List some of them in your notebook.

Does your list include the use of electricity for lighting? Electricity makes it possible to light our homes, roads, offices, markets and factories even after sunset. This helps us to continue working at night. A power station provides us with electricity. However, the supply of electricity may fail or it may not be available at some places. In such situations, a torch is sometimes used for providing light. A torch has a bulb that lights up when it is switched on. Where does the torch get electricity from?

9.1. ELECTRIC CELL

Electricity to the bulb in a torch is provided by the electric cell. Electric cells

are also used in alarm clocks, wristwatches, transistor radios, cameras and many other devices. Have you ever carefully looked at an electric cell? You might have noticed that it has a small metal cap on one side and a metal disc on the other side (Fig. 9.1). Did you notice a positive (+) sign and a negative (-) sign marked on the electric cell? The



Fig. 9.1 An Electric Cell

metal cap is the positive terminal of the electric cell. The metal disc is the negative terminal. All electric cells have two terminals; a positive terminal and a negative terminal.

An electric cell produces electricity from the chemicals stored inside it. When the chemicals in the electric cell are used up, the electric cell stops

Caution



You might have seen the danger sign shown here displayed on poles, electric substations and many other places. It is to warn people that electricity can be dangerous if not handled properly. Carelessness in handling electricity and electric devices can cause severe injuries and sometimes even death. Hence, you should never attempt to experiment with the electric wires and sockets. Also remember that the electricity generated by portable generators is equally dangerous. Use only electric cells for all activities related to electricity.

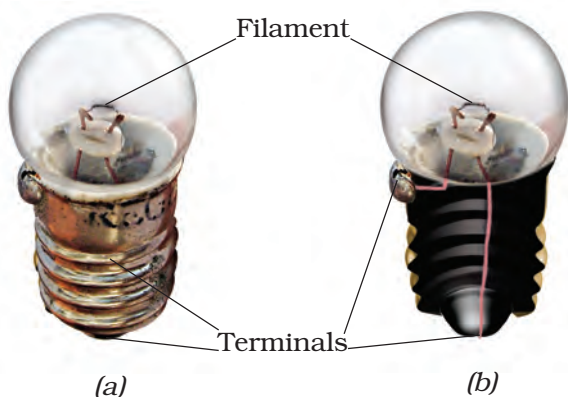


Fig.9.2 (a) Torch bulb and (b) its inside view

producing electricity. The electric cell then has to be replaced with a new one.

A torch bulb has an outer case of glass that is fixed on a metallic base [Fig. 9.2 (a)]. What is inside the glass case of the bulb?

Activity 1

Take a torch and look inside its bulb. You can also take out the bulb with the help of your teacher. What do you notice? Do you find a thin wire fixed in the middle of the glass bulb [Fig. 9.2 (b)]? Now switch the torch on and observe which part of the bulb is glowing.

The thin wire that gives off light is called the **filament** of the bulb. The filament is fixed to two thicker wires, which also provide support to it, as shown in Fig. 9.2 (b). One of these thick wires is connected to the metal case at the base of the bulb [Fig. 9.2 (b)]. The other thick wire is connected to the metal tip at the centre of the base. The base of the bulb and the metal tip of the base are the two terminals of the bulb. These two terminals are fixed in such a

Caution: Never join the two terminals of the electric cell without connecting them through a switch and a device like a bulb. If you do so, the chemicals in the electric cell get used up very fast and the cell stops working.

way that they do not touch each other. The electric bulbs used at home also have a similar design.

Thus, both the electric cell and the bulb have two terminals each. Why do they have these two terminals?

9.2 A BULB CONNECTED TO AN ELECTRIC CELL

Let us try to make an electric bulb light up using an electric cell. How do we do that?

Activity 2

Take four lengths of electric wire with differently coloured plastic coverings. Remove a little of the plastic covering from each length of wire at the ends. This would expose the metal wires at the ends of each length. Fix the exposed parts of two wires to the cell and the other two of the bulb as shown in Fig. 9.3 and Fig. 9.4.



Fig.9.3 Electric cell with two wires attached to it



Fig. 9.4 Bulb connected to two wires

You can stick the wires to the bulb with the tape used by electricians. Use rubber bands or tape to fix the wires to the cell.

Now, connect the wires fixed to the bulb with those attached to the cell in six different ways as have been shown in Fig. 9.5 (a) to (f). For each arrangement, find out whether the bulb glows or not.

Write 'Yes' or 'No' for each arrangement in your notebook.

Now, carefully look at the arrangements in which the bulb glows. Compare these with those in which the bulb does not glow. Can you find the reason for the difference?

Keep the tip of your pencil on the wire near one terminal of the electric cell for the arrangement in Fig. 9.5 (a). Move the pencil along the wire all the way to the bulb. Now, from the other terminal of the bulb, move along the other wire connected to the cell. Repeat this exercise for all the other arrangements in Fig. 9.5. Did the bulb glow for the arrangements in which you could not move the pencil from one terminal to the other?

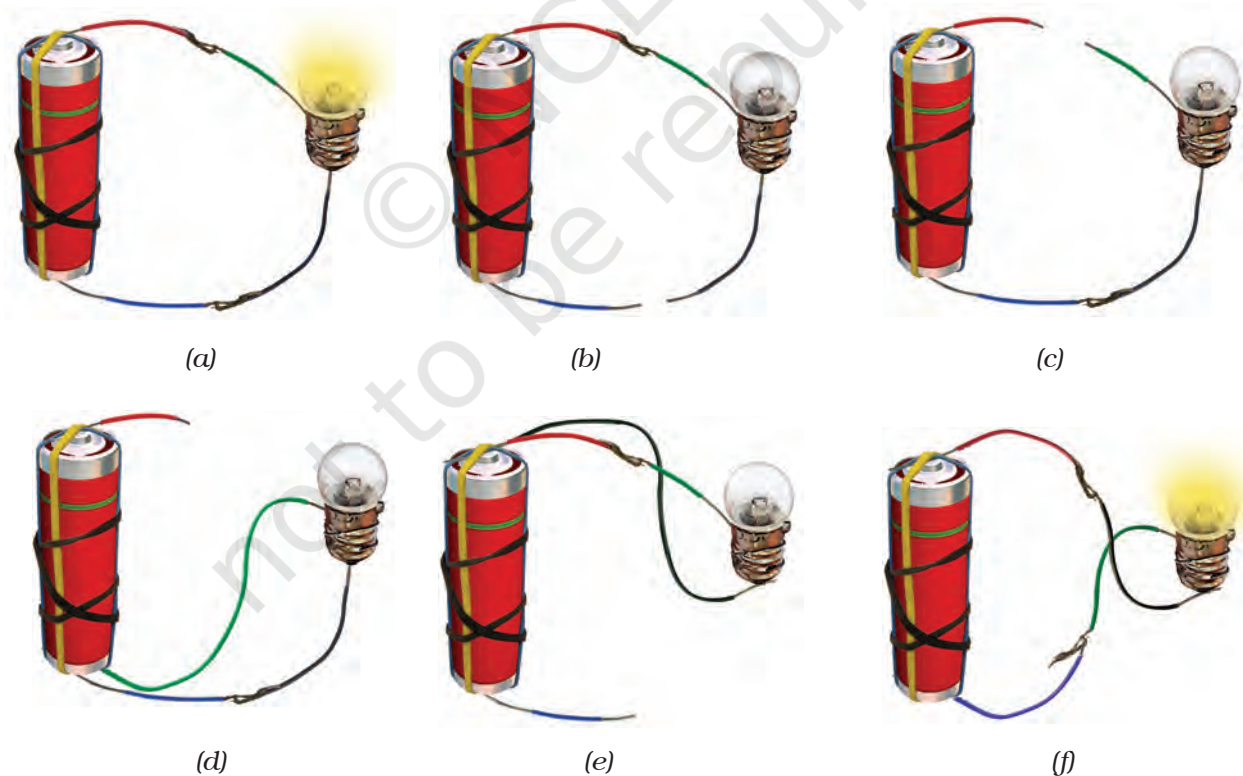


Fig. 9.5 Different arrangements of electric cell and bulb

9.3 AN ELECTRIC CIRCUIT

In Activity 2 you connected one terminal of the electric cell to the other terminal through wires passing to and from the electric bulb. Note that in the arrangements shown in Fig. 9.5 (a) and (f), the two terminals of the electric cell were connected to two terminals of the bulb. Such an arrangement is an example of an electric circuit. The electric circuit provides a complete path for electricity to pass (current to flow) between the two terminals of the electric cell. The bulb glows only when **current** flows through the circuit.

In an electric circuit, the direction of current is taken to be from the positive to the negative terminal of the electric cell as shown in Fig.9.6. When the



Fig.9.6 Direction of current in an electric circuit

terminals of the bulb are connected with that of the electric cell by wires, the current passes through the filament of the bulb. This makes the bulb glow.

Sometimes an electric bulb does not glow even if it is connected to the cell. This may happen if the bulb has **fused**. Look at a fused bulb carefully. Is the filament inside it intact?

An electric bulb may fuse due to many reasons. One reason for a bulb to fuse is a break in its filament. A break in the filament of an electric bulb means a break in the path of the current between the terminals of the electric cell. Therefore, a fused bulb does not light up as no current passes through its filament.

Can you now explain why the bulb did not glow when you tried to do so with the arrangements shown in Fig. 9.5 (b), (c), (d) and (e)?

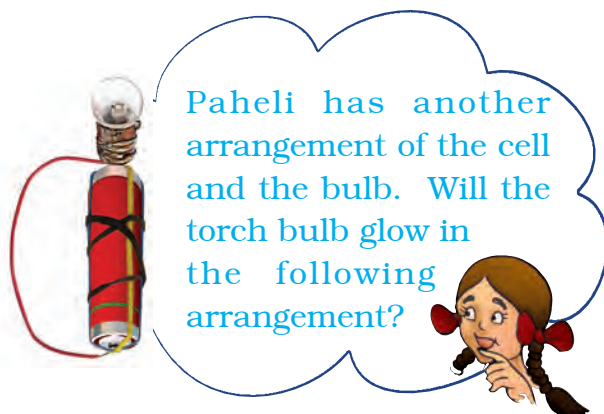
Now we know how to make a bulb light up using an electric cell. Would you like to make a torch for yourself?

Activity 3

Take a torch bulb and a piece of wire. Remove the plastic covering at the two ends of the wire as you did before. Wrap one end of a wire around the base of an electric bulb as shown in Fig. 9.7. Fix the other end of the wire to the negative terminal of an electric cell with a rubber band. Now, bring the tip of the base of the bulb, that is, its other terminal in contact with the positive terminal of the



Fig. 9.7 A home-made torch



cell. Does the bulb glow? Now move the bulb away from the terminal of the electric cell. Does the bulb remain lighted? Is this not similar to what you do when you switch your torch on or off?

9.4 ELECTRIC SWITCH

We had an arrangement for switching on or off our home made torch by moving the base of the bulb away from the tip of the cell. This was a simple switch, but, not very easy to use. We can make another simple and easier switch to use in our circuit.

Activity 4

You can make a switch using two drawing pins, a safety pin (or a paper clip), two wires and a small sheet of thermo Col or a wooden board. Insert



Fig. 9.8 A simple switch

a drawing pin into the ring at one end of the safety pin and fix it on the thermo Col sheet as shown in Fig. 9.8. Make sure that the safety pin can be rotated freely. Now, fix the other drawing pin on the thermo Col sheet in a way that the free end of the safety pin can touch it. The safety pin fixed in this way would be your switch in this activity.



Fig. 9.9 An electric circuit with a switch

Now, make a circuit by connecting an electric cell and a bulb with this switch as shown in Fig. 9.9. Rotate the safety pin so that its free end touches the other drawing pin. What do you observe? Now, move the safety pin away. Does the bulb continue to glow?

The safety pin covered the gap between the drawing pins when you made it touch two of them. In this position the switch is said to be 'on' (Fig. 9.10). Since the material of the safety pin allows the current to pass


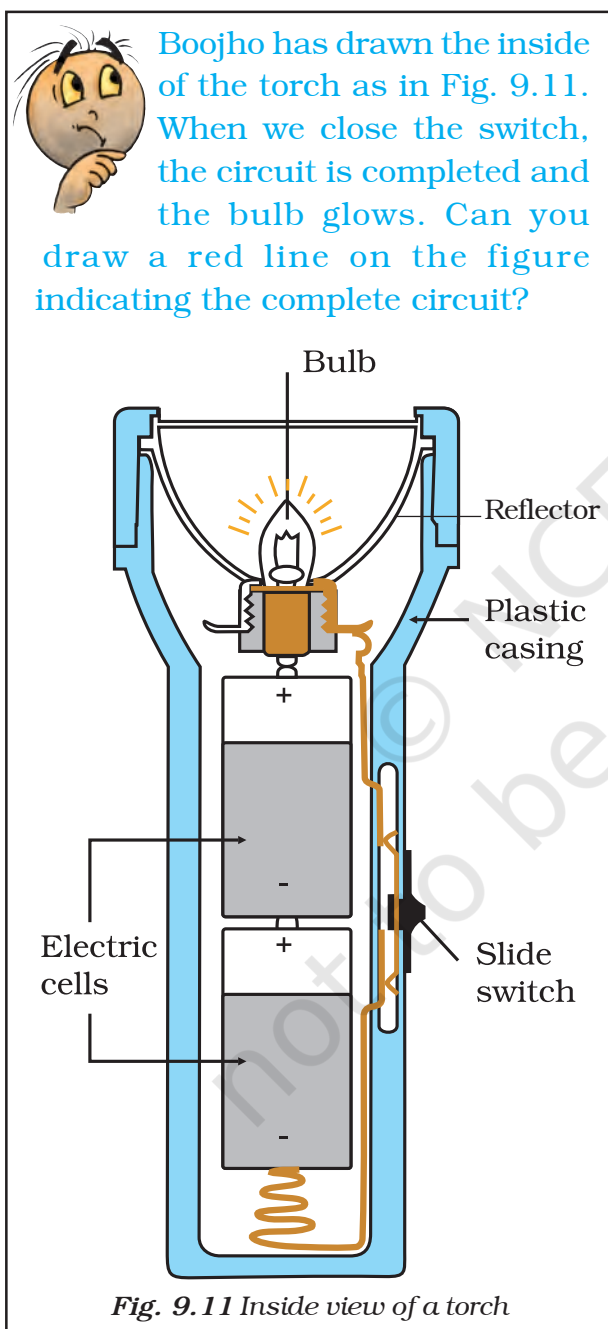


Fig. 9.10 A switch in 'on' position

through it, the circuit was complete. Hence, the bulb glows.

On the other hand, the bulb did not glow when the safety pin was not in touch with the other drawing pin. The circuit was not complete as there was a gap between the two drawing pins. In



this position, the switch is said to be 'off' as in Fig. 9.9.

A switch is a simple device that either breaks the circuit or completes it. The switches used in lighting of electric bulbs and other devices in homes work on the same principle although their designs are more complex.

9.5 ELECTRIC CONDUCTORS AND INSULATORS

In all our activities we have used metal wires to make a circuit. Suppose we use a cotton thread instead of a metal wire to make a circuit. Do you think that the bulb will light up in such a circuit? What materials can be used in electric circuits so that the current can pass through them? Let us find out.

Activity 5

Disconnect the switch from the electric circuit you used for Activity 4. This would leave you with two free ends of wires as shown in Fig. 9.12 (a). Bring the free ends of the two wires close, to let them touch each other. Does the bulb light up? You can now use this arrangement to test whether any given material allows current to pass through it or not.

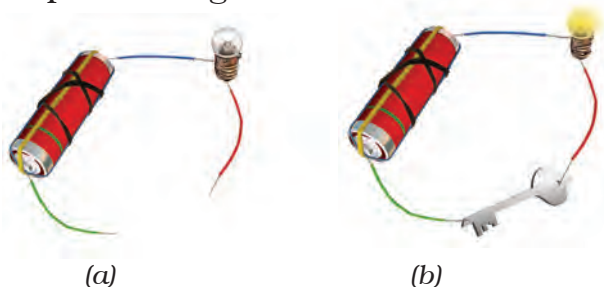


Fig. 9.12 (a) A conduction tester (b) Testing whether the bulb glows when the tester is in contact with a key

Collect samples of different types of materials such as coins, cork, rubber, glass, keys, pins, plastic scale, wooden block, aluminium foil, candle, sewing needle, thermo Col, paper and pencil lead. One by one bring the free ends of the wires of your tester in contact with two ends of the samples you have collected [Fig. 9.12 (b)]. Make sure that the two wires do not touch each other while you are doing so. Does the bulb glow in each case?

Make a table in your notebook similar to Table 9.1, and record your observations.

Table 9.1 Conductors and insulators

Object used in place of the switch	Material it is made of	Bulb glows? (Yes/No)
Key	Metal	Yes
Eraser	Rubber	No
Scale	Plastic	
Matchstick	Wood	
Glass bangle	Glass	
Iron nail	Metal	

What do you find? The bulb does not glow when the free ends of the wires are in contact with some of the materials you have tested. This means that these materials do not allow the electric current to pass through them. On the other hand, some materials allow electric current to pass through them, which is indicated by the glowing bulb. Materials which allow electric current to pass through them are **conductors** of electricity.

Insulators do not allow electric current to pass through them. With the help of Table 9.1, name the materials that are conductors of electricity and also those which are insulators.

Conductors _____, _____, _____

Insulator _____, _____, _____

What do you conclude? Which materials are conductors and which are insulators? Recall the objects that we grouped as those having lustre, in Chapter 2. Are they the conductors? It now seems easy to understand why copper, aluminum and other metals are used for making wires.

Let us recall Activity 4 in which we made an electric circuit with a switch (Fig.9.9). When the switch was in the open position, were the two drawing pins not connected with each other through the thermo Col sheet? But, thermo Col, you may have found is an insulator. What about the air between the gap? Since the bulb does not glow when there is only air in the gap between the drawing pins in your switch, it means that air is also an insulator.


Conductors and insulators are equally important for us. Switches, electrical plugs and sockets are made of conductors. On the other hand, rubber and plastics are used for covering electrical wires, plug tops, switches and other parts of electrical appliances, which people might touch.

Caution: Your body is a conductor of electricity. Therefore, be careful when you handle an electrical appliance.

Summary

- Electric cell is a source of electricity.
- An electric cell has two terminals; one is called positive (+ ve) while the other is negative (- ve).
- An electric bulb has a filament that is connected to its terminals.
- An electric bulb glows when electric current passes through it.
- In a closed electric circuit, the electric current passes from one terminal of the electric cell to the other terminal.
- Switch is a simple device that is used to either break the electric circuit or to complete it.
- Materials that allow electric current to pass through them are called conductors.
- Materials that do not allow electric current to pass through them are called insulators.

Key words

Bulb	Filament	
Conductors	Insulators	
Electric cell	Switch	
Electric circuit	Terminal	

Exercises

1. Fill in the blanks :
 - (a) A device that is used to break an electric circuit is called _____.
 - (b) An electric cell has _____ terminals.
2. Mark 'True' or 'False' for following statements:
 - (a) Electric current can flow through metals.
 - (b) Instead of metal wires, a jute string can be used to make a circuit.
 - (c) Electric current can pass through a sheet of thermo Col.
3. Explain why the bulb would not glow in the arrangement shown in Fig. 9.13.



Fig. 9.13

- Complete the drawing shown in Fig. 9.14 to indicate where the free ends of the two wires should be joined to make the bulb glow.
- What is the purpose of using an electric switch? Name some electrical gadgets that have switches built into them.
- Would the bulb glow after completing the circuit shown in Fig. 9.14 if instead of safety pin we use an eraser?
- Would the bulb glow in the circuit shown in Fig. 9.15?

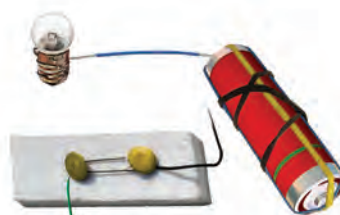


Fig. 9.14



Fig. 9.15

- Using the "conduction tester" on an object it was found that the bulb begins to glow. Is that object a conductor or an insulator? Explain.
- Why should an electrician use rubber gloves while repairing an electric switch at your home? Explain.
- The handles of the tools like screwdrivers and pliers used by electricians for repair work usually have plastic or rubber covers on them. Can you explain why?

SOME SUGGESTED ACTIVITIES

- Imagine there were no electric supply for a month. How would that affect your day to day activities and others in your family? Present your imagination in the form of a story or a play. If possible stage the play written by you or your friends in school.
- For your friends, you may set up a game "How steady is your hand?". You will need a cell, an electric bulb, a metal key, two iron nails (about 5 cm in length), about one and a half metre long thick metal wire (with its plastic insulation scraped off) and few pieces of connecting wires. Fix two nails nearly one metre apart on a wooden board so that these can be used as a hook. Fix the wire between the nails after inserting it through the loop of the key. Connect one end of this wire to a bulb and a cell. Connect the other terminal of the cell to the key with a wire. Ask your friend to move the loop along the straight wire without touching it. Glowing of the bulb would indicate that the loop of the key has touched the wire.
- Read and find out about Alessandro Volta who invented the electric cell. You may also find out about Thomas Alva Edison who invented the electric bulb.



0652CH13

10

Fun with Magnets

Paheli and Boojho went to a place where a lot of waste material was piled into huge heaps. Something exciting was happening! A crane was moving towards the heap of junk. The long hand of the crane lowered a block over a heap. It then began to move. Guess, what? Many pieces of iron junk were sticking to the block, as it moved away (Fig. 10.1)!



Fig. 10.1 Picking up pieces of iron from waste

They had just read a very interesting book on magnets and knew immediately that there must be a magnet attached to the end of the crane that was picking up iron from the junk yard.

You might have seen magnets and have even enjoyed playing with them. Have you seen stickers that remain attached to iron surfaces like almirahs or the doors of refrigerators? In some pin holders, the pins seem to be

sticking to the holder. In some pencil boxes, the lid fits tightly when we close it even without a locking arrangement. Such stickers, pin holders and pencil boxes have magnets fitted inside (Fig. 10.2). If you have any one of these items, try to locate the magnets hidden in these.

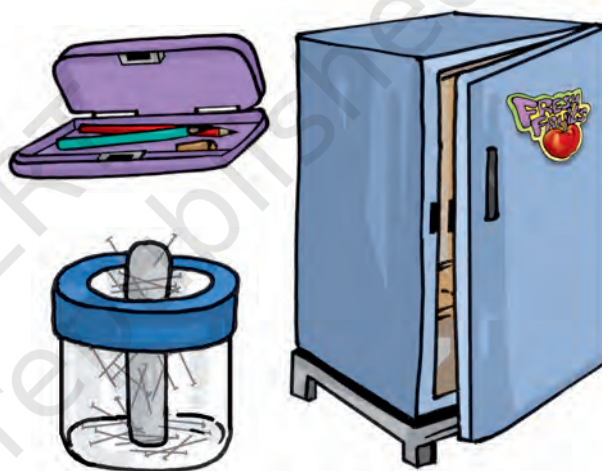


Fig. 10.2 Some common items that have magnets inside them

How Magnets Were Discovered

It is said that, there was a shepherd named Magnes, who lived in ancient Greece. He used to take his herd of sheep and goats to the nearby mountains for grazing. He would take a stick with him to control his herd. The stick had a small piece of iron attached at one end. One day he was surprised to find that he had to pull hard to free his stick from a rock on the



Fig. 10.3 A natural magnet on a hillside!

mountainside (Fig. 10.3). It seemed as if the stick was being attracted by the rock. The rock was a natural magnet and it attracted the iron tip of the shepherd's stick. It is said that this is how natural magnets were discovered. Such rocks were given the name magnetite, perhaps after the name of that shepherd. Magnetite contains iron. Some people believe that magnetite was first discovered at a place called Magnesia. The substances having the property of attracting iron are now known as magnets. This is how the story goes.

In any case, people now have discovered that certain rocks have the property of attracting pieces of iron. They also found that small pieces of these rocks have some special properties. They named these naturally occurring materials magnets. Later on the process of making magnets from pieces of iron was discovered. These are known as artificial magnets. Nowadays artificial




Fig. 10.4 Magnets of different shapes

magnets are prepared in different shapes. For example, bar magnet, horse-shoe magnet, cylindrical or a ball-ended magnet. Fig.10.4 shows a few such magnets.

Activity 1

Take a plastic or a paper cup. Fix it on a stand with the help of a clamp as shown in Fig. 10.5. Place a magnet inside the cup and cover it with a paper so that the magnet is not visible. Attach a thread to a clip made of iron. Fix the other end of the thread at the base of the stand. (Mind you, the trick involved here, is to keep the length of the thread sufficiently short.) Bring the clip near the base of the cup. The clip is raised in air without support, like a kite.

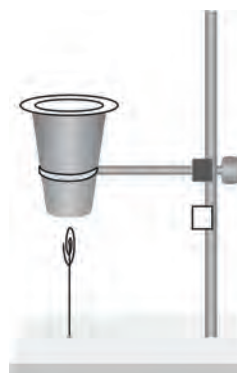


Fig. 10.5 Effect of magnet - a paper clip hanging in air!

10.1 MAGNETIC AND NON-MAGNETIC MATERIALS

Activity 2

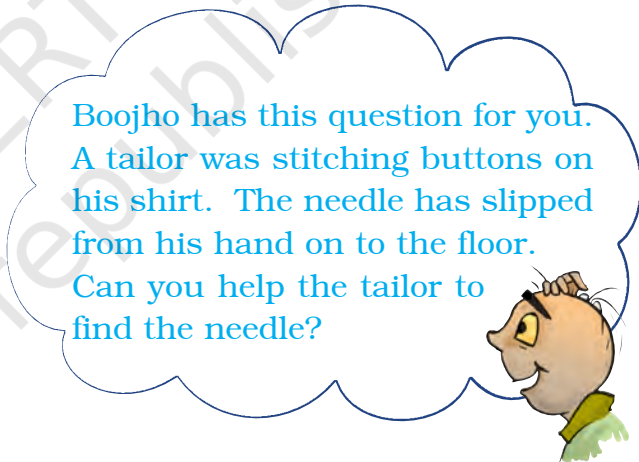
Let us walk in the footsteps of Magnes. Only, this time, we will change the positions of the magnet and the iron. There will be a magnet at the end of our shepherd's stick. We can attach a small magnet to a hockey stick, walking stick or a cricket wicket with a tape or some glue. Let us now go out on a "Magnes walk" through the school playground. What does our "Magnes stick" pick up from the school ground? What about objects in the classroom?

Collect various objects of day-to-day use from your surroundings. Test these with the "Magnes stick". You can also take a magnet, touch these objects with it and observe which objects stick to the magnet. Prepare a table in your notebook as shown in Table 10.1. and record your observations.

Look at the last column of Table 10.1 and note the objects that are attracted by a magnet. Now, make a list of

materials from which these objects are made. Is there any material common in all the objects that were attracted by the magnet?

We understand that magnet attracts certain materials whereas some do not get attracted towards magnet. The materials which get attracted towards a magnet are **magnetic** – for example, iron, nickel or cobalt. The materials which are not attracted towards a magnet are **non-magnetic**. What materials did you find to be non-magnetic from Table 10.1? Is soil a magnetic or a non-magnetic material?



Boojho has this question for you. A tailor was stitching buttons on his shirt. The needle has slipped from his hand on to the floor. Can you help the tailor to find the needle?

Table 10.1 Finding the objects attracted by magnet

Name of the object	Material which the object is made of (Cloth/plastic/ aluminium/ wood/ glass/ iron/ any other	Attracted by Magnes stick/ magnet (Yes/No)
Iron ball	Iron	Yes
Scale	Plastic	No
Shoe	Leather	?

Activity 3

Rub a magnet in the sand or soil. Pull out the magnet. Are there some particles of sand or soil sticking to the magnet? Now, gently shake the magnet to remove the particles of sand or soil. Are some particles still sticking to it? These might be small pieces of iron (iron filings) picked up from the soil.

Through such an activity, we can find out whether the soil or sand from a given place contains particles that have iron. Try this activity near your home, school or the places you visit on your holidays. Does the magnet with iron filings sticking to it, look like any one of those shown in Fig. 10.6?

Make a table of what you find.



Fig. 10.6 Magnet with (a) many iron filings (b) few iron filings and (c) no iron filings sticking to it.

**Table 10.2 Magnet rubbed in sand.
How many iron filings?**

Name of location (Colony and town/ city/ village)	Did you find iron filings sticking to the magnet? (Many/ very few/ none)

If you fill this table and send it to Paheli and Boojho, they can compare the amount of iron filings found in soil from different parts of the country. They can share this information with you.

10.2 POLES OF MAGNET

We observed that iron filings (if they are present) stick to a magnet rubbed in the soil. Did you observe anything special about the way they stick to the magnet?

Activity 4

Spread some iron filings on a sheet of paper. Now, place a bar magnet on this sheet. What do you observe? Do the iron filings stick all over the magnet? Do you observe that more iron filings get attracted to some parts of the magnet than others (Fig. 10.7)? Remove the iron filings sticking to the magnet and repeat the



Fig. 10.7 Iron filings sticking to a bar magnet

activity. Do you observe any change in the pattern with which the iron filings get attracted by different parts of the magnet? You can do this activity using pins or iron nails in place of iron filings and also with magnets of different shapes.

Draw a diagram to show the way iron filings stick to the magnet. Is your drawing similar to that shown in Fig. 10.6 (a)?

We find that the iron filings are attracted more towards the region close

Paheli has this puzzle for you. You are given two identical bars which look as if they might be made of iron. One of them is a magnet, while the other is a simple iron bar. How will you find out, which one is a magnet?



to two ends of a bar magnet. Poles of a magnet are said to be near these ends. Try and bring a few magnets of different shapes to the classroom. Check for the location of the poles on these magnets using iron filings. Can you now mark the location of poles in the kind of magnets shown in Fig. 10.4?

10.3 FINDING DIRECTIONS

Magnets were known to people from ancient times. Many properties of magnets were also known to them. You might have read many interesting stories about the uses of magnets. One such story is about an emperor in China named Hoang Ti. It is said that he had a chariot with a statue of a lady that could rotate in any direction. It had an extended arm as if it was showing the way (Fig. 10.8). The statue had an interesting property. It would rest in such a position that its extended arm always pointed towards South. By looking at the extended arm of the statue, the Emperor was able to locate directions when he went to new places on his chariot.




Fig. 10.8 The chariot with direction finding statue

Let us make such a direction finder for ourselves.

Activity 5

Take a bar magnet. Put a mark on one of its ends for identification. Now, tie a thread at the middle of the magnet so that you may suspend it from a wooden stand (Fig. 10.9). Make sure that the magnet can rotate freely. Let it come to rest. Mark two points on the ground to show the position of the ends of the magnet when it comes to rest. Draw a



Fig. 10.9 A freely suspended bar magnet always comes to rest in the same direction

line joining the two points. This line shows the direction in which the magnet was pointing in its position of rest. Now, rotate the magnet by gently pushing one end in any direction and let it come to rest. Again, mark the position of the two ends in its position of rest. Does the magnet now point in a different direction? Rotate the magnet in other directions and note the final direction in which it comes to rest.

Do you find that the magnet always comes to rest in the same direction? Now can you guess the mystery behind the statue in the Emperor's chariot?

Repeat this activity with an iron bar and a plastic or a wooden scale instead of a magnet. Do not use light objects for this activity and avoid doing it where there are currents of air. Do the other materials also always come to rest in the same direction?

We find that a freely suspended bar magnet always comes to rest in a particular direction, which is the North-South direction. Use the direction of the rising sun in the morning to find out the rough direction towards east, where you are doing this experiment. If you stand facing east, to your left will be North. Using the Sun for finding directions may not be very exact, but, it will help to make out the direction North from the South, on your line. Using this you can figure out which end of the magnet is pointing to the North and which points to the South.

The end of the magnet that points towards North is called its North seeking

In which direction is the main gate of your school situated from your classroom?



end or the North pole of the magnet. The other end that points towards the South is called South seeking end or the South pole of the magnet. All magnets have two poles whatever their shape may be. Usually, north (N) and south (S) poles are marked on the magnets.

This property of the magnet is very useful for us. For centuries, travellers have been making use of this property of magnets to find directions. It is said that in olden days, travellers used to find directions by suspending natural magnets with a thread, which they always carried with them.

Later on, a device was developed based on this property of magnets. It is known as the compass. A compass is usually a small box with a glass cover on it. A magnetised needle is pivoted inside the box, which can rotate freely (Fig. 10.10). The compass also has a dial



Fig. 10.10 A compass

with directions marked on it. The compass is kept at the place where we wish to know the directions. Its needle indicates the north-south direction when it comes to rest. The compass is then rotated until the north and south marked on the dial are at the two ends of the needle. To identify the north-pole of the magnetic needle, it is usually painted in a different colour.

10.4 MAKE YOUR OWN MAGNET

There are several methods of making magnets. Let us learn the simplest one. Take a rectangular piece of iron. Place it on the table. Now take a bar magnet and place one of its poles near one edge of the bar of iron. Without lifting the bar magnet, move it along the length of the iron bar till you reach the other end. Now, lift the magnet and bring the pole (the same pole you started with) to the same point of the iron bar from which you began (Fig. 10.11). Move the magnet again along the iron bar in the same direction as you did before. Repeat this process about 30-40 times. Bring a pin or some iron filings near the iron bar to check whether it has become a magnet. If not, continue the process for some



Fig. 10.11 Making your own magnet

more time. Remember that the pole of the magnet and the direction of its movement should not change. You can also use an iron nail, a needle or a blade and convert them into a magnet.

You now know how to make a magnet. Would you like to make your own compass?

Activity 6

Magnetise an iron needle using a bar magnet. Now, insert the magnetised needle through a small piece of cork or foam. Let the cork float in water in a bowl or a tub. Make sure that the needle



Fig. 10.12 A compass in a cup

does not touch the water (Fig. 10.12). Your compass is now ready to work. Make a note of the direction in which the needle points when the cork is floating. Rotate the cork, with the needle fixed in it, in different directions. Note the direction in which the needle points when the cork begins to float again without rotating. Does the needle always point in the same direction, when the cork stops rotating?

10.5 ATTRACTION AND REPULSION BETWEEN MAGNETS

Let us play another interesting game with magnets. Take two small toy cars and label them A and B. Place a bar magnet on top of each car along its length and fix them with rubber bands



Fig. 10.13 Do opposite poles attract each other?

(Fig. 10.13). In car A, keep the south pole of the magnet towards its front. Place the magnet in opposite direction in car B. Now, place the two cars close to one another (Fig. 10.13). What do you observe? Do the cars remain at their places? Do the cars run away from each other? Do they move towards each other and collide? Record your observations in a table as shown in Table 10.3. Now, place the toy cars close to each other such that the rear side of car A faces the front side of car B (Fig 10.14). Do they move as before? Note the direction in which the cars move now. Next, place the car A behind car B and note the direction in which they move in each case. Repeat the activity by placing cars



Fig. 10.14 Repulsion between similar poles?

with their rear sides facing each other. Record your observations in each case.

What do we find from this activity? Do two similar poles attract or repel each other? What about opposite poles — do they attract or repel each other?

This property of the magnets can also be observed by suspending a magnet and bringing one by one the poles of another magnet near it.

Boojho has this question for you. What will happen if a magnet is brought near a compass?



A Few Cautions

Magnets lose their properties if they are heated, hammered or dropped from some height (Fig. 10.15). Also, magnets become weak if they are not stored properly. To keep them safe, bar




Fig. 10.15 Magnets lose their property on heating, hammering and dropping

Table 10.3

Position of the cars	How do the cars move? Move towards/ away from each other/ not move at all
Front of car A facing the front of car B	
Rear of car A facing the front of car B	
Car A placed behind car B	
Rear of car B facing rear of car A	




Fig. 10.16 Store your magnets safely

magnets should be kept in pairs with their unlike poles on the same side. They must be separated by a piece of wood while two pieces of soft iron should be placed across their ends (Fig. 10.16).

For horse-shoe magnet, one should keep a piece of iron across the poles.

Keep magnets away from cassettes, mobiles, television, music system, compact disks (CDs) and the computer.

Key words

Compass

Magnet

Magnetite

North pole

South pole



Summary

- Magnetite is a natural magnet.
- Magnet attracts materials like iron, nickel, cobalt. These are called magnetic materials.
- Materials that are not attracted towards magnet are called non-magnetic.
- Each magnet has two magnetic poles—North and South.
- A freely suspended magnet always aligns in N-S direction.
- Opposite poles of two magnets attract each other whereas similar poles repel one another.

Exercises

- Fill in the blanks in the following:
 - Artificial magnets are made in different shapes such as _____, _____ and _____.
 - The Materials which are attracted towards a magnet are called _____.
 - Paper is not a _____ material.
 - In olden days, sailors used to find direction by suspending a piece of _____.
 - A magnet always has _____ poles.
- State whether the following statements are true or false:
 - A cylindrical magnet has only one pole.
 - Artificial magnets were discovered in Greece.
 - Similar poles of a magnet repel each other.
 - Maximum iron filings stick in the middle of a bar magnet when it is brought near them.
 - Bar magnets always point towards North-South direction.
 - A compass can be used to find East-West direction at any place.
 - Rubber is a magnetic material.
- It was observed that a pencil sharpener gets attracted by both the poles of a magnet although its body is made of plastic. Name a material that might have been used to make some part of it.
- Column I shows different positions in which one pole of a magnet is placed near that of the other. Column II indicates the resulting action between them for each situation. Fill in the blanks.

Column I	Column II
N - N	_____
N - _____	Attraction
S - N	_____
_____ - S	Repulsion

- Write any two properties of a magnet.
- Where are poles of a bar magnet located?
- A bar magnet has no markings to indicate its poles. How would you find out near which end is its north pole located?
- You are given an iron strip. How will you make it into a magnet?
- How is a compass used to find directions?
- A magnet was brought from different directions towards a toy boat that has

been floating in water in a tub. Affect observed in each case is stated in Column I. Possible reasons for the observed affects are mentioned in Column II. Match the statements given in Column I with those in Column II.

Column I	Column II
Boat gets attracted towards the magnet	Boat is fitted with a magnet with north pole towards its head
Boat is not affected by the magnet	Boat is fitted with a magnet with south pole towards its head
Boat moves towards the magnet if north pole of the magnet is brought near its head	Boat has a small magnet fixed along its length
Boat moves away from the magnet when north pole is brought near its head	Boat is made of magnetic material
Boat floats without changing its direction	Boat is made up non-magnetic material

SOME SUGGESTED ACTIVITIES

- Using a compass, find the direction in which windows and entrance to your house or classroom open.
- Try to place two equal sized bar magnets one above the other such that their north poles are on the same side. Note what happens and write your observations in your note book.
- Few iron nails and screws got mixed with the wooden shavings while a carpenter was working with them. How can you help him in getting the nails and screws back from the scrap without wasting his time in searching with his hands?
- You can make an intelligent doll, which picks up the things it likes (Fig. 10.17). Take a doll and attach a small magnet in one of its hands. Cover this hand with small gloves so that the magnet is not visible. Now, your intelligent doll is ready. Ask your friends to bring different objects near the doll's hand. Knowing the material of the object you can tell in advance whether the doll would catch it or not.



Fig. 10.17 An intelligent doll

THINGS TO READ

'Gulliver's Travels' which has this fantasy of the whole island of Laputa, floating in air. Could magnets be involved?

11

Air Around us



0652CH15

We have learnt in Chapter 6 that all living things require air. But, have you ever seen air? You might not have seen air, but, surely you must have felt its presence in so many ways. You notice it when the leaves of the trees rustle or the clothes hanging on a clothes-line sway. Pages of an open book begin fluttering when the fan is switched on. The moving air makes it possible for you to fly your kite. Do you remember Activity 3 in Chapter 3 in which you separated the sand and sawdust by winnowing? Winnowing is more effective in moving air. You may have noticed that during storms the wind blows at a very high speed. It may even uproot trees and blow off the rooftops.

Have you ever played with a *firki* (Fig. 11.1)?



Fig. 11.1 Different types of *firki*

Activity 1

Let us make a *firki* of our own, following the instructions shown in Fig. 11.2.

Hold the stick of the *firki* and place it in different directions in an open area.

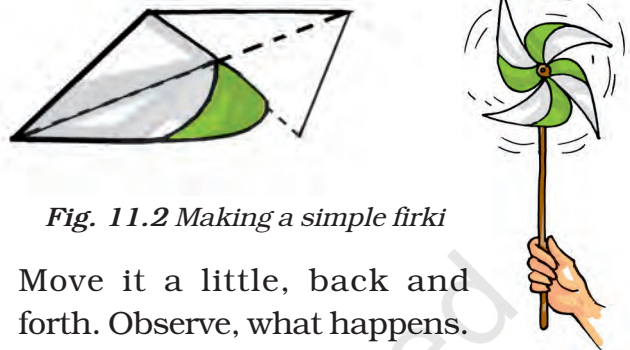


Fig. 11.2 Making a simple *firki*

Move it a little, back and forth. Observe, what happens. Does the *firki* rotate? What makes a *firki* rotate — moving air, isn't it?

Have you seen a weather cock (Fig. 11.3)? It shows the direction in which the air is moving at that place.




Fig. 11.3 A weather cock

11.1 IS AIR PRESENT EVERYWHERE AROUND US?

Close your fist — what do you have in it? Nothing? Try the following activity to find out.

Activity 2

Take an empty open bottle. Is it really empty or does it have something inside? Turn it, upside down. Is something inside it, now?



Fig. 11.4 Experiments with an empty bottle

Now, dip the open mouth of the bottle into the bucket filled with water as shown in Fig. 11.4. Observe the bottle. Does water enter the bottle? Now tilt the bottle slightly. Does the water now enter the bottle? Do you see bubbles coming out of the bottle or hear any bubbly sound? Can you now guess what was in the bottle?

Yes! You are right. It is “air”, that was present in the bottle. The bottle was not empty at all. In fact, it was filled completely with air even when you turned it upside down. That is why you notice that water does not enter the bottle when it is pushed in an inverted position, as there was no space for air to escape. When the bottle was tilted, the air was able to come out in the form of bubbles, and water filled up the empty space that the air has occupied.

This activity shows that air occupies space. It fills all the space in the bottle. It is present everywhere around us. Air has no colour and one can see through it. It is transparent.

Our earth is surrounded by a thin layer of air. This layer extends up to many kilometres above the surface of the earth and is called atmosphere. As we move higher in the atmosphere, the air gets rarer.



Fig. 11.5 Mountaineers carry oxygen cylinders with them

Now can you think, mountaineers carry oxygen cylinders with them, while climbing high mountains (Fig. 11.5)?

11.2 WHAT IS AIR MADE UP OF?

Until the eighteenth century, people thought that air was just one substance. Experiments have proved that it is really not so. Air is a mixture of many gases. What kind of a mixture is it? Let us find out about some of the major components of this mixture, one by one.

Water vapour

We have learnt earlier that air contains water vapour. We also saw that, when air comes in contact with a cool surface, it condenses and drops of water appear on the cooled surfaces. The presence of water vapour in air is important for the water cycle in nature.

Oxygen

Activity 3

In the presence of your teacher, fix two small candles of the same length on a

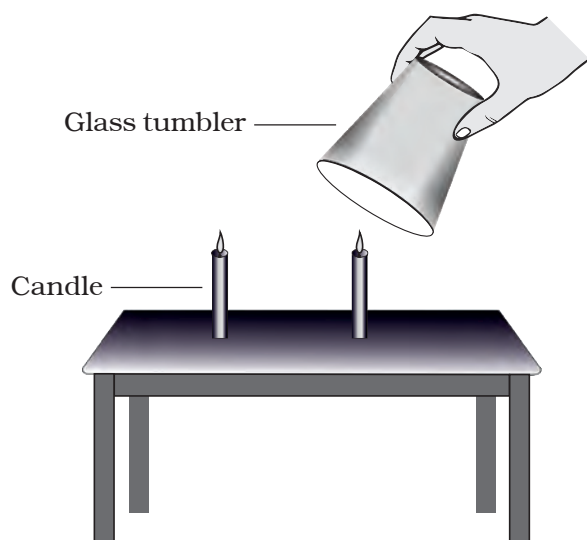


Fig. 11.6 Air has oxygen

table. Light both the candles. Cover one of the candles with an inverted glass tumbler. Observe both the candles carefully.

Do both the candles continue to burn or go off?

You must have observed that the candle covered with glass tumbler got extinguished after some time, whereas the other candle continued burning.

What can be the reason for this? Think about it.

It seems that the candle got extinguished because the component inside of the glass tumbler, which supports burning, is limited. Most of the component is used up by the burning candles. However, the other candle is getting continued supply of air. This component of air, which supports burning, is known as oxygen.

Nitrogen

In Activity 3 did you observe that air is still present in the glass bottle even after

the candle blew out? This indicates the presence of some component in the air, which does not support burning. The major part of air (which does not support burning candle) is **nitrogen**.

Carbon dioxide

In a closed room, if there is some material that is burning, you may have felt suffocation. This is due to excess of carbon dioxide that may be accumulating in the room, as the burning continues. Carbon dioxide makes up a small component of the air around us. Plants and animals consume oxygen for respiration and produce carbon dioxide. Plant and animal matter also consumes oxygen on burning and produces mainly carbon dioxide and a few other gases. It is advisable not to burn dry leaves and discarded remains of the crop, which pollute our surroundings.

Dust and smoke

The burning of fuel also produces smoke. Smoke contains a few gases and fine dust particles and is often harmful. That is why you see long chimneys in factories. This takes the harmful smoke and gases away from our noses, but, brings it closer to the birds flying up in the sky!

Dust particles are always present in air.

Activity 4

Find a sunny room in your school/home. Close all the doors and windows with curtains pulled down to make the



Fig. 11.7 Observing presence of dust in air with sunlight

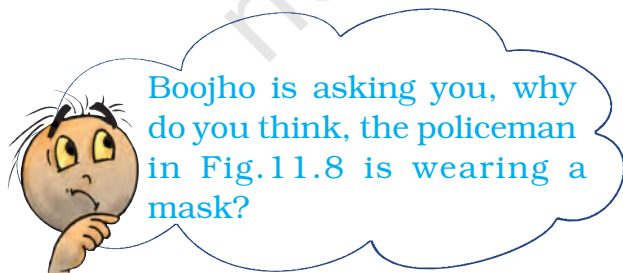
room dark. Now, open the door or a window facing the sun, just a little, in such a way that it allows sunlight to enter the room only through a slit. Look carefully at the incoming beam of sunlight.

Do you see some tiny shining particles moving in the beam of sunlight (Fig. 11.7)? What are these particles?

During winters you might have observed similar beam of sunlight filter through the trees in which dust particles appear to dance merrily around!

This shows that air also contains dust particles. The presence of dust particles in air varies from time to time, and from place to place.

We inhale air when we breathe through our nostrils. Fine hair and mucus are present inside the nose to



Boojho is asking you, why do you think, the policeman in Fig.11.8 is wearing a mask?





Fig. 11.8 Policemen regulating traffic at a crowded crossing often wear a mask

prevent dust particles from getting into the respiratory system.

Do you recall being scolded by your parents when you breathe through your mouth? If you do that, harmful dust particles may enter your body.

We may conclude, then, that air contains some gases, water vapour and dust particles. The gases in air are mainly nitrogen, oxygen, small amount of carbon dioxide, and many other gases. However, there may be some



Paheli wants to know, why the transparent glass of windows, if not wiped off regularly, appears hazy?

Boojho wants to know, why during an incident of fire, one is advised to wrap a woollen blanket over a burning object.

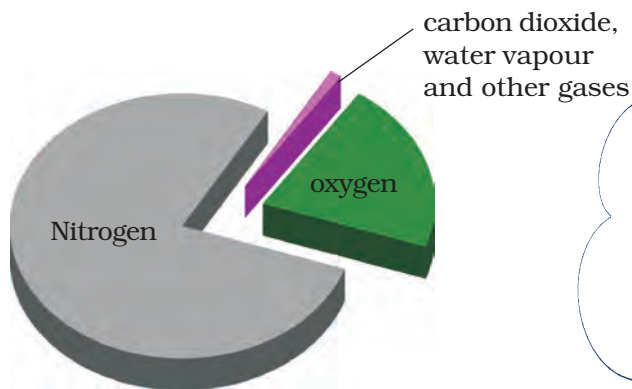


Fig. 11.9 Composition of air

variations in the composition of air from place to place. We see that air contains mostly nitrogen and oxygen. In fact, these two gases together make up 99% of the air. The remaining 1% is constituted by carbon dioxide and a few other gases and water vapour (Fig. 11.9).

11.3 HOW DOES OXYGEN BECOME AVAILABLE TO ANIMALS AND PLANTS LIVING IN WATER AND SOIL?

Activity 5

Take some water in a glass or metal container. Heat it slowly on a tripod stand. Well before the water begins to boil, look carefully at the inner surface



Fig. 11.10 Water contains air

Here is a question from Paheli, “Will the tiny air bubbles seen before the water actually boils, also appear if we do this activity by reheating boiled water kept in an air tight bottle?” If you do not know the answer you may try doing it and see for yourself.



of the container. Do you see tiny bubbles on the inside (Fig. 11.10)?

These bubbles come from the air dissolved in water. When you heat the water, to begin with, the air dissolved in it escapes. As you continue heating, the water itself turns into vapour and finally begins to boil. We learnt in Chapters 5 and 6, that the animals living in water use the dissolved oxygen in water.

The organisms that live in soil also need oxygen to respire, isn't it? How do they get the air they need, for respiration?

Activity 6

Take a lump of dry soil in a beaker or a glass. Add water to it and note what happens (Fig. 11.11). Do you see bubbles coming out from soil? These bubbles indicate the presence of air in the soil.

When the water is poured on the lump of soil, it displaces the air which is seen in the form of bubbles. The organisms that live inside the soil and the plant roots respire in this air. A lot



Fig. 11.11 Soil has air in it

of burrows and holes are formed in deep soil by the animals living in the soil. These burrows also make spaces available for air to move in and out of the soil. However, when it rains heavily, water fills up all the spaces occupied by the air in the soil. In this situation, animals living in the soil have to come out for respiration. Could this be the reason why earthworms come out of the soil, only during heavy rains?

Have you ever wondered why all the oxygen of atmosphere does not get used up though a large number of organisms are consuming it? Who is refilling the oxygen in the atmosphere?

11.4 HOW IS THE OXYGEN IN THE ATMOSPHERE REPLACED?

In Chapter 4, we read about photosynthesis. In this process, plants make their own food and oxygen is produced along with it. Plants also consume oxygen for respiration, but they produce more of it than they consume. That is why we say plants produce oxygen.

It is obvious that animals cannot live without plants. The balance of oxygen

and carbon dioxide in the atmosphere is maintained through respiration in plants and animals and by the photosynthesis in plants. This shows the interdependence of plants and animals.

We can now appreciate, how important air is for life on earth. Are there any other uses of air? Have you heard about a windmill? Look at Fig. 11.12.



Fig. 11.12 A windmill

The wind makes the windmill rotate. The windmill is used to draw water from tubewells and to run flour mills. Windmills are also used to generate electricity. Air helps in the movements of sailing yachts, gliders, parachutes and aeroplanes. Birds, bats and insects can fly due to the presence of air. Air also helps in the dispersal of seeds and pollen of flowers of several plants. Air plays an important role in water cycle.

Key words

Atmosphere

Carbon dioxide

Composition of air

Oxygen

Nitrogen

Smoke

Windmill



Summary

- Air is found everywhere. We cannot see air, but we can feel it.
- Air in motion is called wind.
- Air occupies space.
- Air is present in water and soil.
- Air is a mixture of nitrogen, oxygen, carbon dioxide, water vapour and a few other gases. Some dust particles may also be present in it.
- Oxygen supports burning and is necessary for living organisms.
- The envelope of air that surrounds the earth is known as atmosphere.
- Atmosphere is essential for life on earth.
- Aquatic animals use dissolved air in water for respiration.
- Plants and animals depend on each other for exchange of oxygen and carbon dioxide from air.

Exercises

1. What is the composition of air?
2. Which gas in the atmosphere is essential for respiration?
3. How will you prove that air supports burning?
4. How will you show that air is dissolved in water?
5. Why does a lump of cotton wool shrink in water?

6. The layer of air around the earth is known as _____.
7. The component of air used by green plants to make their food, is _____.
8. List five activities that are possible due to the presence of air.
9. How do plants and animals help each other in the exchange of gases in the atmosphere?

SUGGESTED PROJECTS AND ACTIVITIES

1. On a clear glass window facing towards an open area, fix a small rectangular strip of paper. Remove the strip after a few days. Do you notice a difference between the rectangular section that was left covered with paper and the rest of the glass window? By repeating this exercise every month, you can have an idea about the amount of dust present in air around you at different times of the year.
2. Observe the leaves of trees, shrubs or bushes planted by the roadside. Note whether their leaves have some dust or soot deposited over them. Take similar observations with the leaves of trees in the school compound or in a garden. Is there any difference in deposition of soot on leaves of trees near the roadside? What could be the possible reasons for this difference? Take a map of your city or town and try to identify regions in the map where you have noticed very thick layer of soot on the plants by the roadside. Compare with results obtained by other classmates and mark these areas on the map. Perhaps the results from all the students could be summarised and reported in newspapers.

© NCERT
not to be republished

Notes

© NCERT
not to be republished